

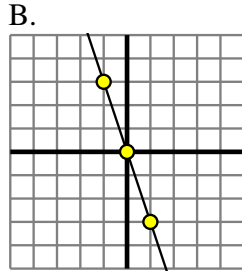


Determine which function has the greater change of rate. If the rate is the same answer with 'same'.

Answers

1) A.

X	Y
-8	-5
5	8
6	9
7	10
10	13



2) A.

B.

X	Y
-10	10
1	-1
4	-4
6	-6
7	-7

3) A.

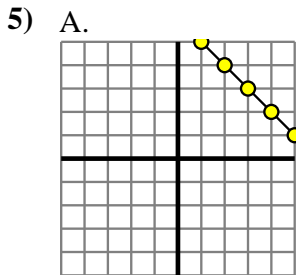
X	Y
-6	-18
-4	-10
-2	-2
2	14
4	22

B.  
 $Y = X - 4$

4) A.

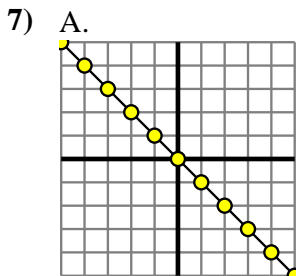
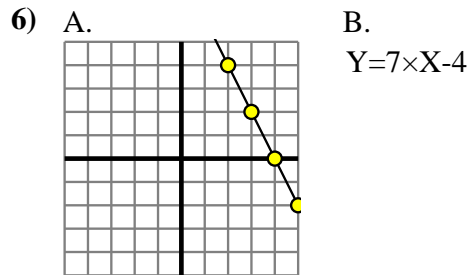
B.

X	Y
-7	-29
-6	-24
-1	1
6	36
9	51



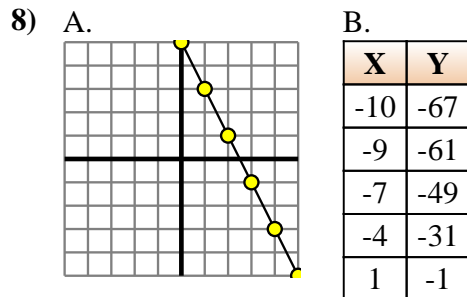
B.

X	Y
-7	-4
-3	0
1	4
3	6
7	10



B.

X	Y
-7	-63
0	0
1	9
4	36
5	45



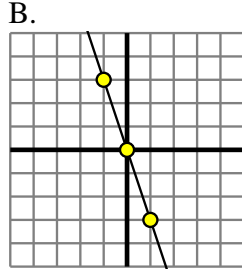
1. \_\_\_\_\_
2. \_\_\_\_\_
3. \_\_\_\_\_
4. \_\_\_\_\_
5. \_\_\_\_\_
6. \_\_\_\_\_
7. \_\_\_\_\_
8. \_\_\_\_\_



Determine which function has the greater change of rate. If the rate is the same answer with 'same'.

1) A.

X	Y
-8	-5
5	8
6	9
7	10
10	13



2) A.

B.

X	Y
-10	10
1	-1
4	-4
6	-6
7	-7

3) A.

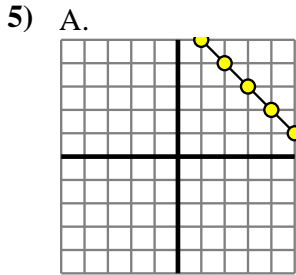
X	Y
-6	-18
-4	-10
-2	-2
2	14
4	22

B.  
 $Y=X-4$

4) A.

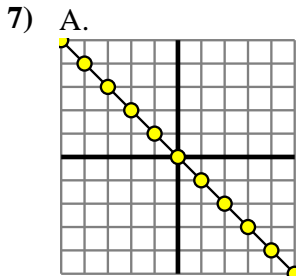
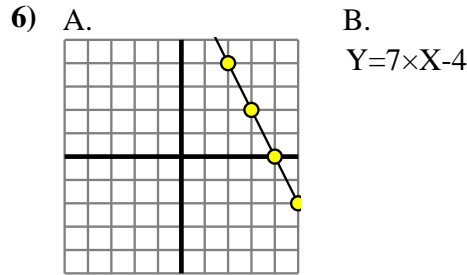
B.

X	Y
-7	-29
-6	-24
-1	1
6	36
9	51



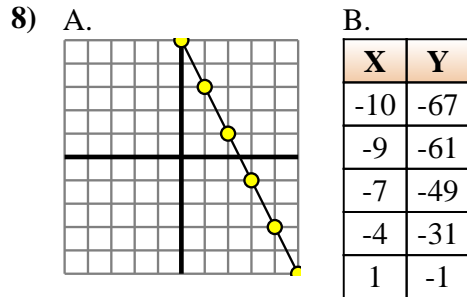
B.

X	Y
-7	-4
-3	0
1	4
3	6
7	10



B.

X	Y
-7	-63
0	0
1	9
4	36
5	45



Answers

1. **B**
2. **same**
3. **A**
4. **B**
5. **same**
6. **B**
7. **B**
8. **B**