



Use the numberlines to show each expression and solve.

Ex) Start at -4 and add 8



Ex. $-4 + 8 = 4$

1) Start at -3 and add 10



1. _____

2) Start at 2 and add -12



2. _____

3) Start at -5 and add 3



3. _____

4) Start at -7 and add 5



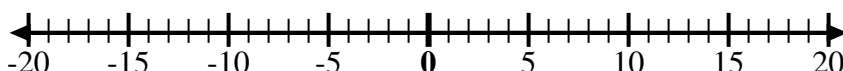
4. _____

5) Start at -3 and add -3



5. _____

6) Start at -1 and add -9



6. _____

7) Start at 1 and add -10



7. _____

8) Start at -6 and add -2



8. _____

9) Start at -8 and add 10



9. _____

10) Start at 0 and add -10



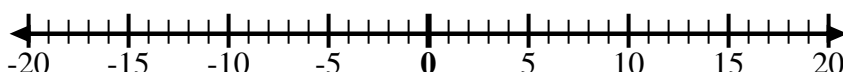
10. _____

11) Start at -8 and add -2



11. _____

12) Start at 5 and add -13



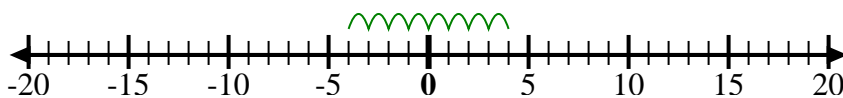
12. _____

Answers



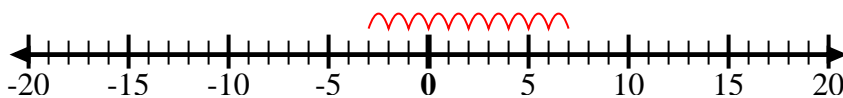
Use the numberlines to show each expression and solve.

Ex) Start at -4 and add 8



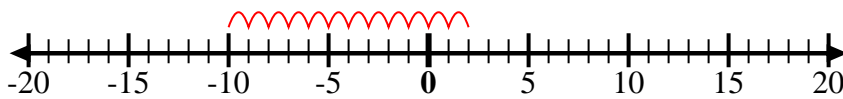
Ex. $-4 + 8 = 4$

1) Start at -3 and add 10



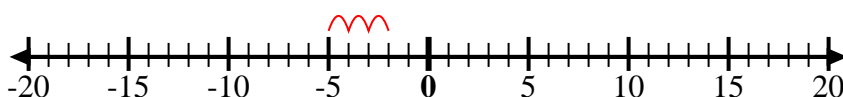
1. $-3 + 10 = 7$

2) Start at 2 and add -12



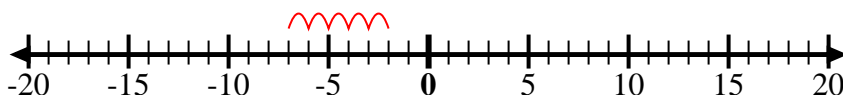
2. $2 + -12 = -10$

3) Start at -5 and add 3



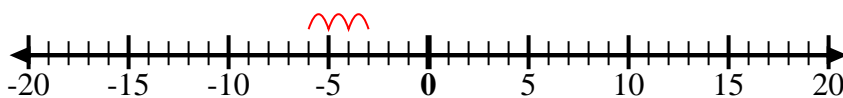
3. $-5 + 3 = -2$

4) Start at -7 and add 5



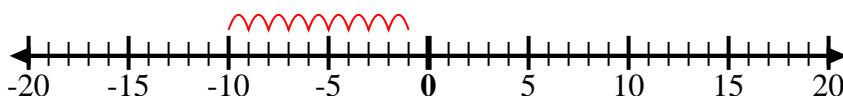
4. $-7 + 5 = -2$

5) Start at -3 and add -3



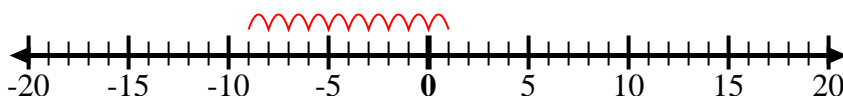
5. $-3 + -3 = -6$

6) Start at -1 and add -9



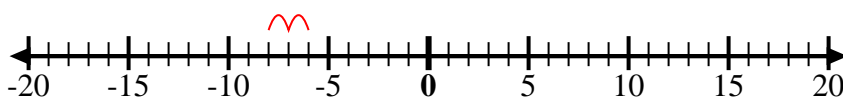
6. $-1 + -9 = -10$

7) Start at 1 and add -10



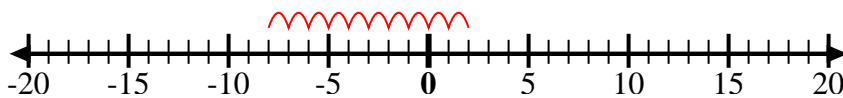
7. $1 + -10 = -9$

8) Start at -6 and add -2



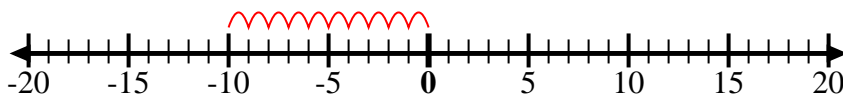
8. $-6 + -2 = -8$

9) Start at -8 and add 10



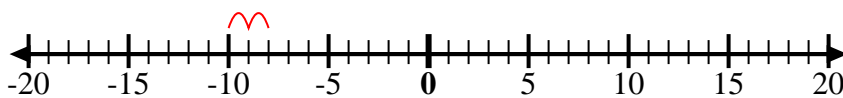
9. $-8 + 10 = 2$

10) Start at 0 and add -10



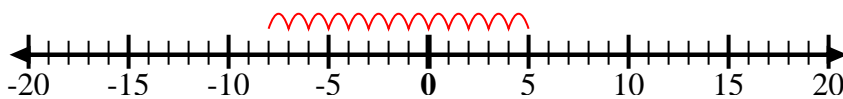
10. $0 + -10 = -10$

11) Start at -8 and add -2



11. $-8 + -2 = -10$

12) Start at 5 and add -13



12. $5 + -13 = -8$

Answers