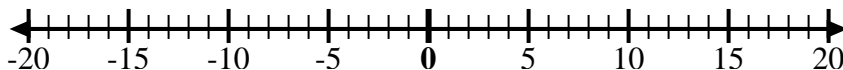




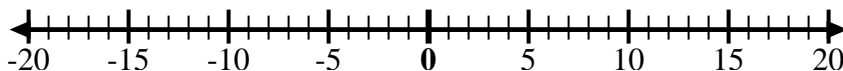
Use the numberlines to show each expression and solve.

Ex) Start at -4 and add -6



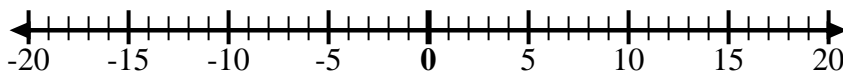
Ex. $-4 + -6 = -10$

1) Start at 7 and add -7



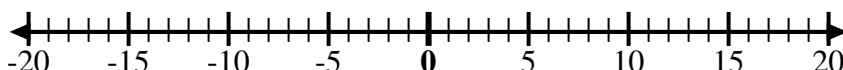
1. _____

2) Start at -4 and add 9



2. _____

3) Start at 4 and add -14



3. _____

4) Start at -2 and add -7



4. _____

5) Start at -3 and add 7



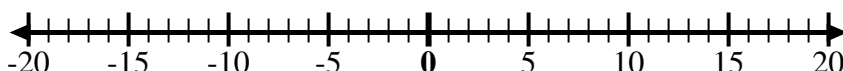
5. _____

6) Start at 1 and add -11



6. _____

7) Start at -6 and add -3



7. _____

8) Start at 10 and add -1



8. _____

9) Start at 0 and add -5



9. _____

10) Start at 0 and add -10



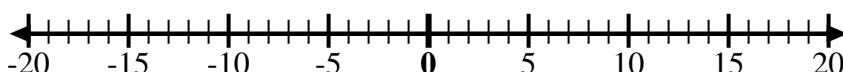
10. _____

11) Start at 6 and add -11



11. _____

12) Start at -5 and add 10



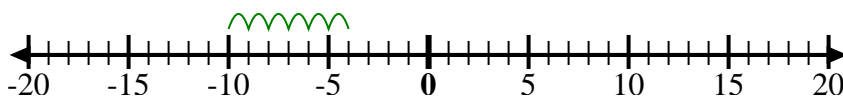
12. _____

Answers



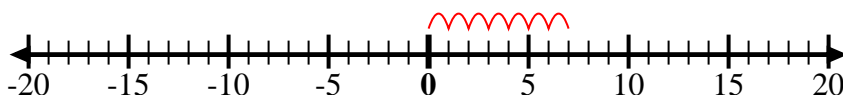
Use the numberlines to show each expression and solve.

Ex) Start at -4 and add -6



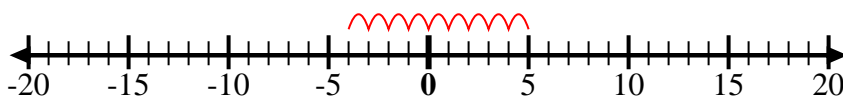
Ex. $-4 + -6 = -10$

1) Start at 7 and add -7



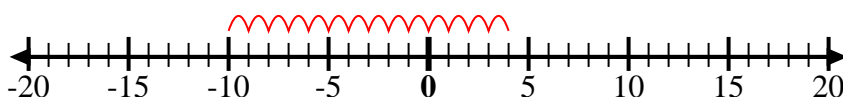
1. $7 + -7 = 0$

2) Start at -4 and add 9



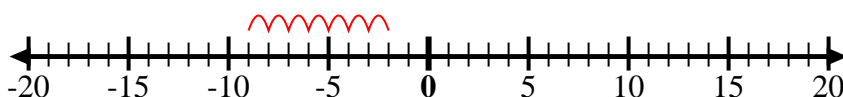
2. $-4 + 9 = 5$

3) Start at 4 and add -14



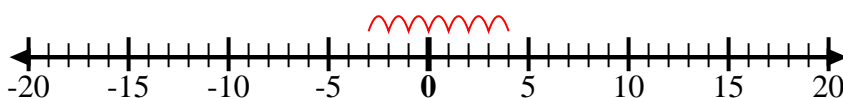
3. $4 + -14 = -10$

4) Start at -2 and add -7



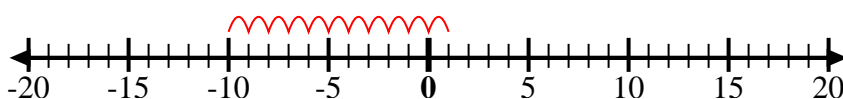
4. $-2 + -7 = -9$

5) Start at -3 and add 7



5. $-3 + 7 = 4$

6) Start at 1 and add -11



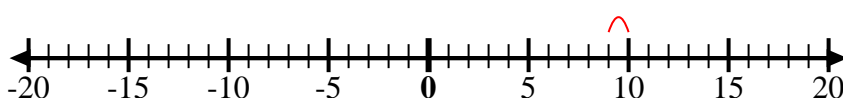
6. $1 + -11 = -10$

7) Start at -6 and add -3



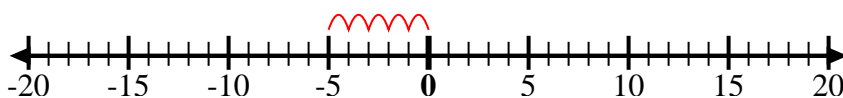
7. $-6 + -3 = -9$

8) Start at 10 and add -1



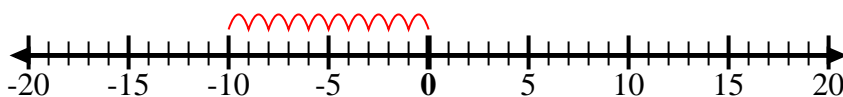
8. $10 + -1 = 9$

9) Start at 0 and add -5



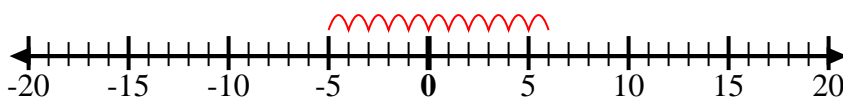
9. $0 + -5 = -5$

10) Start at 0 and add -10



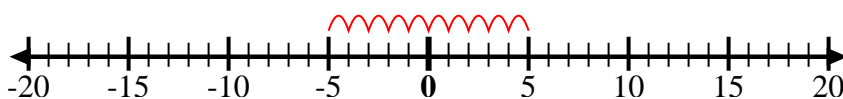
10. $0 + -10 = -10$

11) Start at 6 and add -11



11. $6 + -11 = -5$

12) Start at -5 and add 10



12. $-5 + 10 = 5$

Answers