



Solve each problem.

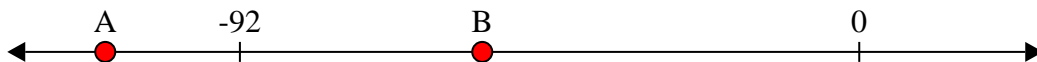
Answers

1) Which letter best shows -45?



1. _____

2) Which letter best shows -112?




2. _____

3) Which letter best shows -107?




3. _____

4) Which letter best shows -73?




4. _____

5) Which letter best shows -17?




5. _____

6) Which letter best shows -26?



6. _____

7) Which letter best shows -85?




7. _____

8) Which letter best shows -97?




8. _____

9) Which letter best shows -31?



9. _____

10) Which letter best shows -25?

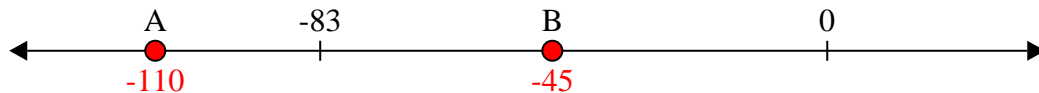


10. _____

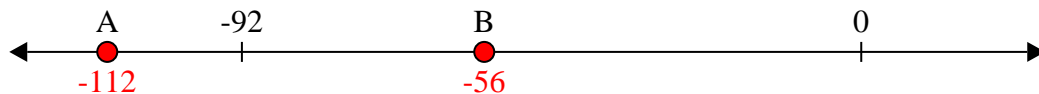


Solve each problem.

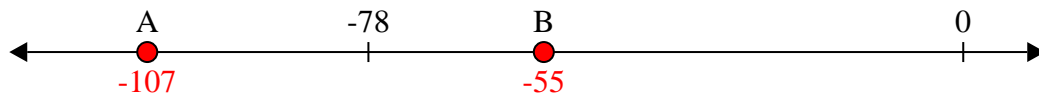
1) Which letter best shows -45?




2) Which letter best shows -112?




3) Which letter best shows -107?




4) Which letter best shows -73?




5) Which letter best shows -17?



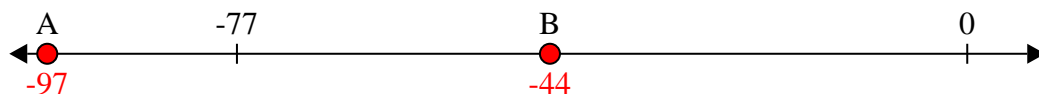
6) Which letter best shows -26?




7) Which letter best shows -85?



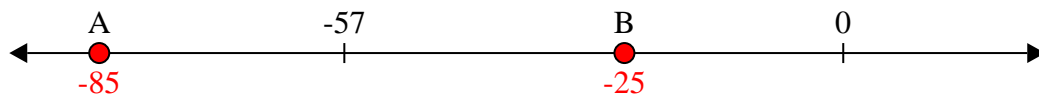
8) Which letter best shows -97?



9) Which letter best shows -31?



10) Which letter best shows -25?



Answers

1. **B**

2. **A**

3. **A**

4. **A**

5. **B**

6. **B**

7. **A**

8. **A**

9. **B**

10. **B**