




Solve each problem.

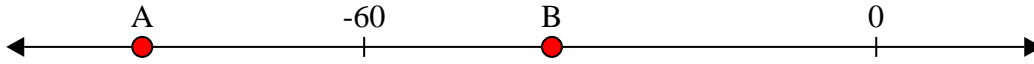
Answers

1) Which letter best shows -11?




1. _____

2) Which letter best shows -38?




2. _____

3) Which letter best shows -78?



3. _____

4) Which letter best shows -28?



4. _____

5) Which letter best shows -109?



5. _____

6) Which letter best shows -68?



6. _____

7) Which letter best shows -10?



7. _____

8) Which letter best shows -20?




8. _____

9) Which letter best shows -82?



9. _____

10) Which letter best shows -79?




10. _____

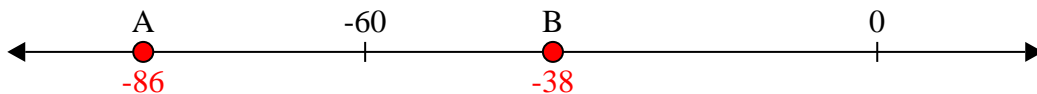


Solve each problem.

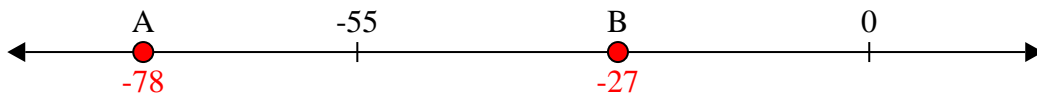
1) Which letter best shows -11?



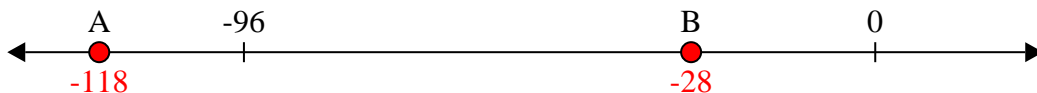
2) Which letter best shows -38?




3) Which letter best shows -78?



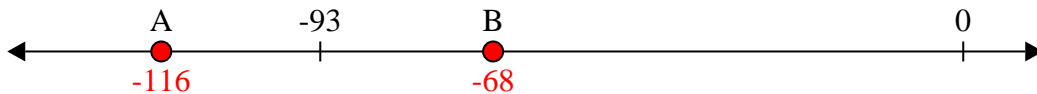
4) Which letter best shows -28?



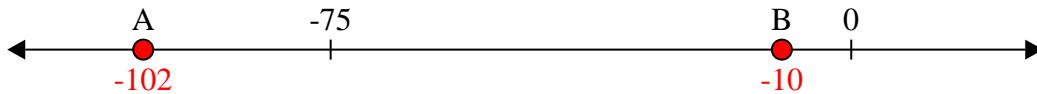
5) Which letter best shows -109?



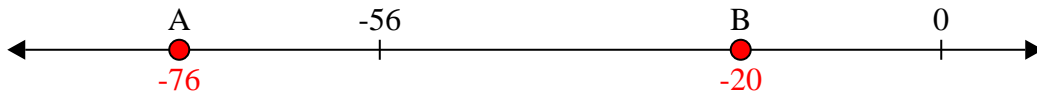
6) Which letter best shows -68?



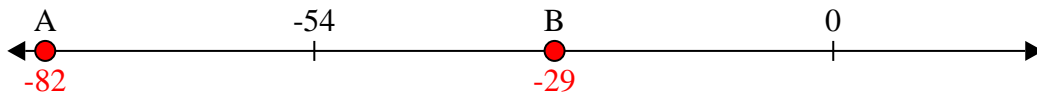
7) Which letter best shows -10?



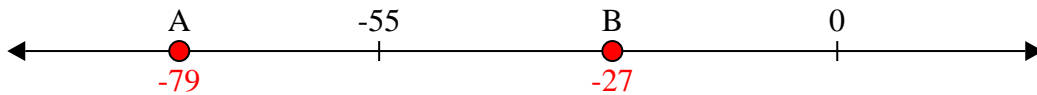
8) Which letter best shows -20?



9) Which letter best shows -82?



10) Which letter best shows -79?



Answers

1. **B**

2. **B**

3. **A**

4. **B**

5. **A**

6. **B**

7. **B**

8. **B**

9. **A**

10. **A**