




Solve each problem.


**Answers**

- 1) Which letter best shows -95?




1. \_\_\_\_\_

- 2) Which letter best shows -32?




2. \_\_\_\_\_

- 3) Which letter best shows -92?




3. \_\_\_\_\_

- 4) Which letter best shows -19?




4. \_\_\_\_\_

- 5) Which letter best shows -125?




5. \_\_\_\_\_

- 6) Which letter best shows -95?




6. \_\_\_\_\_

- 7) Which letter best shows -18?




7. \_\_\_\_\_

- 8) Which letter best shows -80?



8. \_\_\_\_\_

- 9) Which letter best shows -23?



9. \_\_\_\_\_

- 10) Which letter best shows -103?




10. \_\_\_\_\_




Solve each problem.

**Answers**


- 1) Which letter best shows -95?

1. **A**


- 2) Which letter best shows -32?

2. **B**


- 3) Which letter best shows -92?

3. **A**


- 4) Which letter best shows -19?

4. **B**


- 5) Which letter best shows -125?

5. **A**


- 6) Which letter best shows -95?

6. **A**


- 7) Which letter best shows -18?

7. **B**


- 8) Which letter best shows -80?

8. **A**

- 9) Which letter best shows -23?

9. **B**

- 10) Which letter best shows -103?

10. **A**