




Solve each problem.

**Answers**

- 1) Which letter best shows -97?




1. \_\_\_\_\_

- 2) Which letter best shows -93?



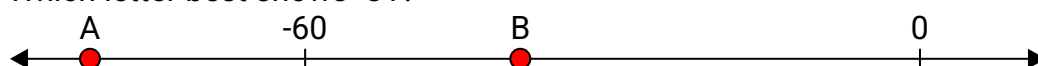
2. \_\_\_\_\_

- 3) Which letter best shows -33?




3. \_\_\_\_\_

- 4) Which letter best shows -81?



4. \_\_\_\_\_

- 5) Which letter best shows -11?




5. \_\_\_\_\_

- 6) Which letter best shows -22?




6. \_\_\_\_\_

- 7) Which letter best shows -84?



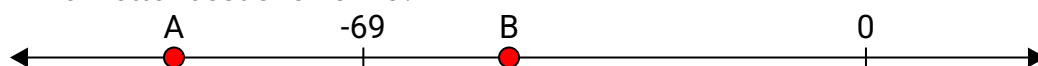
7. \_\_\_\_\_

- 8) Which letter best shows -81?




8. \_\_\_\_\_

- 9) Which letter best shows -95?



9. \_\_\_\_\_

- 10) Which letter best shows -61?




10. \_\_\_\_\_



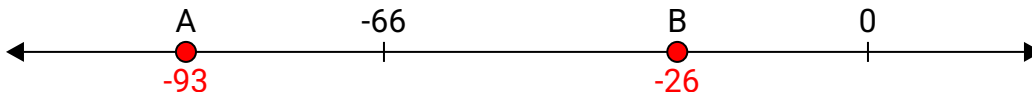
Solve each problem.

**Answers**

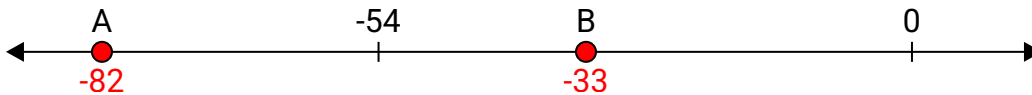
- 1) Which letter best shows -97?

1. **A**

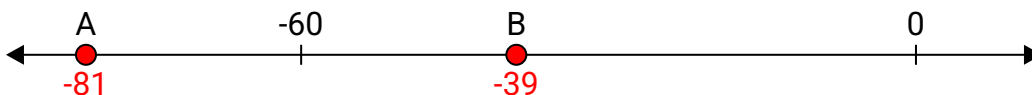
- 2) Which letter best shows -93?

2. **A**


- 3) Which letter best shows -33?

3. **B**


- 4) Which letter best shows -81?

4. **A**

- 5) Which letter best shows -11?

5. **B**


- 6) Which letter best shows -22?

6. **B**

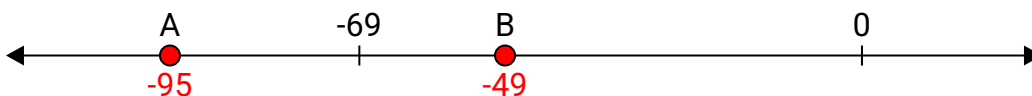
- 7) Which letter best shows -84?

7. **A**

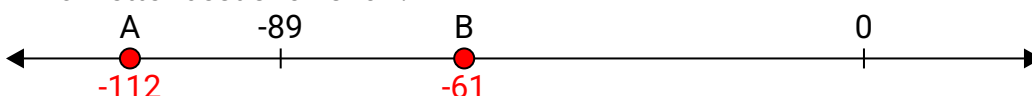
- 8) Which letter best shows -81?

8. **A**

- 9) Which letter best shows -95?

9. **A**

- 10) Which letter best shows -61?

10. **B**