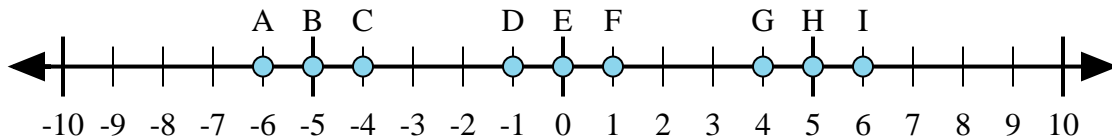




Determine which letter in the numberline best represents the answer to each problem.

Answers



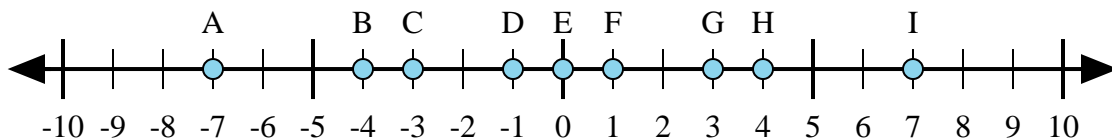
1) $5 + (-1) =$

2) $(-5) + (-1) =$

3) $(-1) + 5 =$

4) $(-5) + 1 =$

5) $1 + (-5) =$



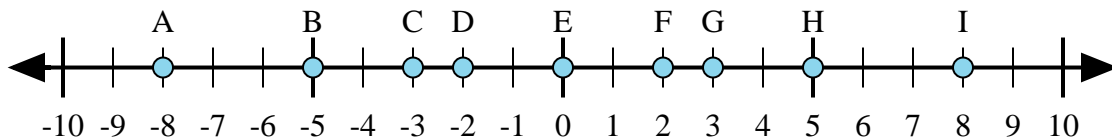
6) $4 + (-3) =$

7) $3 + 4 =$

8) $(-3) + 4 =$

9) $(-4) + 3 =$

10) $(-3) + (-4) =$



11) $(-5) + (-3) =$

12) $3 + (-5) =$

13) $5 + 3 =$

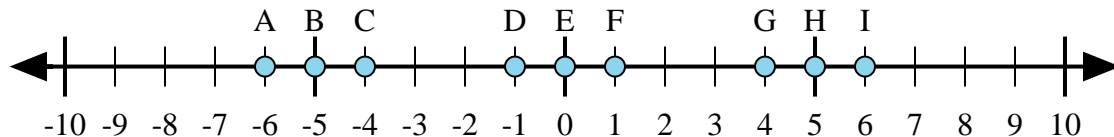
14) $(-3) + 5 =$

15) $(-5) + 3 =$

1. _____
2. _____
3. _____
4. _____
5. _____
6. _____
7. _____
8. _____
9. _____
10. _____
11. _____
12. _____
13. _____
14. _____
15. _____



Determine which letter in the numberline best represents the answer to each problem.



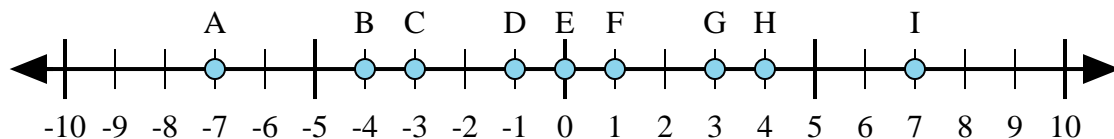
1) $5 + (-1) =$

2) $(-5) + (-1) =$

3) $(-1) + 5 =$

4) $(-5) + 1 =$

5) $1 + (-5) =$



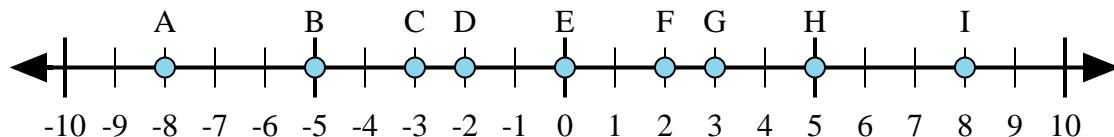
6) $4 + (-3) =$

7) $3 + 4 =$

8) $(-3) + 4 =$

9) $(-4) + 3 =$

10) $(-3) + (-4) =$



11) $(-5) + (-3) =$

12) $3 + (-5) =$

13) $5 + 3 =$

14) $(-3) + 5 =$

15) $(-5) + 3 =$

Answers

1. **G**

2. **A**

3. **G**

4. **C**

5. **C**

6. **F**

7. **I**

8. **F**

9. **D**

10. **A**

11. **A**

12. **D**

13. **I**

14. **F**

15. **D**