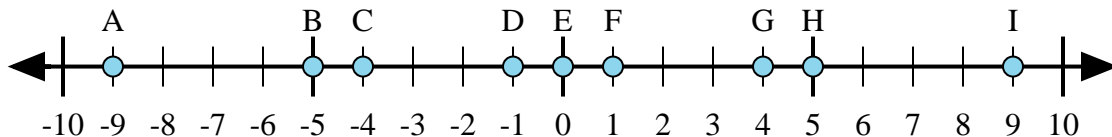




Determine which letter in the numberline best represents the answer to each problem.

Answers



1)  $(-5) + 4 =$

2)  $(-4) + (-5) =$

3)  $4 + 5 =$

4)  $(-4) + 5 =$

5)  $5 + (-4) =$

1. \_\_\_\_\_

2. \_\_\_\_\_

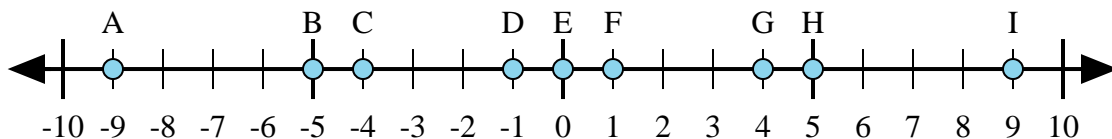
3. \_\_\_\_\_

4. \_\_\_\_\_

5. \_\_\_\_\_

6. \_\_\_\_\_

7. \_\_\_\_\_



6)  $(-5) + (-4) =$

7)  $5 + (-4) =$

8)  $4 + (-5) =$

9)  $(-5) + 4 =$

10)  $5 + 4 =$

8. \_\_\_\_\_

9. \_\_\_\_\_

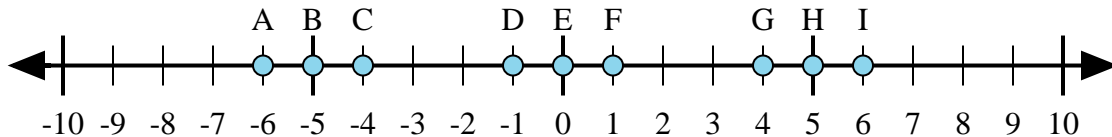
10. \_\_\_\_\_

11. \_\_\_\_\_

12. \_\_\_\_\_

13. \_\_\_\_\_

14. \_\_\_\_\_



11)  $(-5) + (-1) =$

12)  $(-5) + 1 =$

13)  $5 + 1 =$

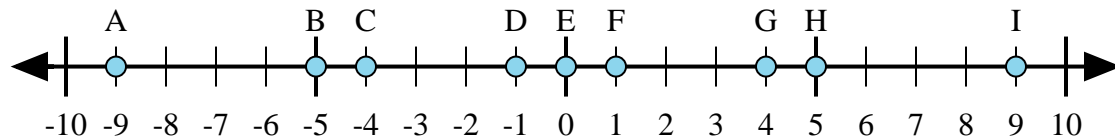
14)  $1 + (-5) =$

15)  $(-1) + 5 =$

15. \_\_\_\_\_



Determine which letter in the numberline best represents the answer to each problem.



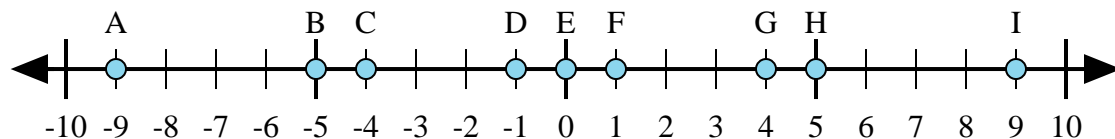
1)  $(-5) + 4 =$

2)  $(-4) + (-5) =$

3)  $4 + 5 =$

4)  $(-4) + 5 =$

5)  $5 + (-4) =$



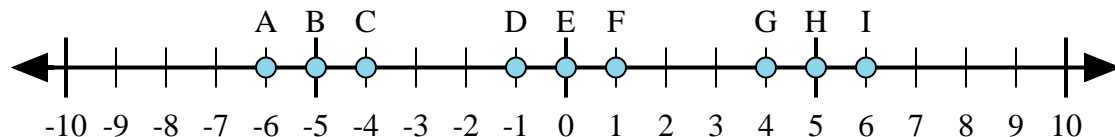
6)  $(-5) + (-4) =$

7)  $5 + (-4) =$

8)  $4 + (-5) =$

9)  $(-5) + 4 =$

10)  $5 + 4 =$



11)  $(-5) + (-1) =$

12)  $(-5) + 1 =$

13)  $5 + 1 =$

14)  $1 + (-5) =$

15)  $(-1) + 5 =$

Answers

1. D

2. A

3. I

4. F

5. F

6. A

7. F

8. D

9. D

10. I

11. A

12. C

13. I

14. C

15. G