



Solve each problem. Use the numberline if needed.

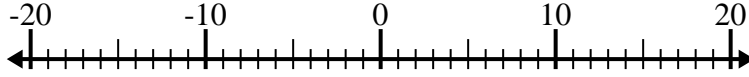
Answers

1) $(-4) - (-5) =$ _____



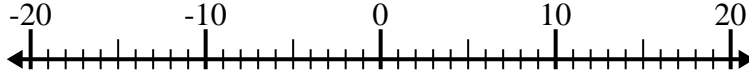
1. _____

2) $5 - (-12) =$ _____



2. _____

3) $(-4) - (-13) =$ _____



3. _____

4) $12 + (-10) =$ _____



4. _____

5) $(-1) - 13 =$ _____



5. _____

6) $(-5) + 15 =$ _____



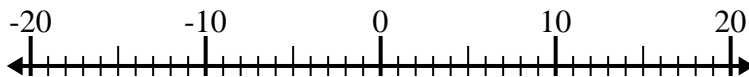
6. _____

7) $(-11) + 1 =$ _____



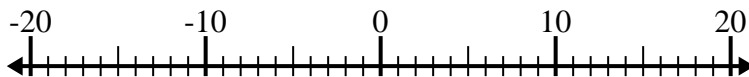
7. _____

8) $14 - (-4) =$ _____



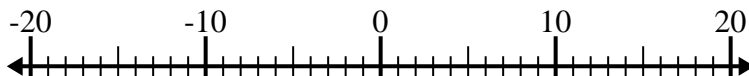
8. _____

9) $(-2) - 14 =$ _____



9. _____

10) $(-4) + (-1) =$ _____



10. _____



Solve each problem. Use the numberline if needed.

1) $(-4) - (-5) = \underline{1}$



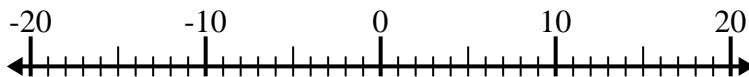
2) $5 - (-12) = \underline{17}$



3) $(-4) - (-13) = \underline{9}$



4) $12 + (-10) = \underline{2}$



5) $(-1) - 13 = \underline{-14}$



6) $(-5) + 15 = \underline{10}$



7) $(-11) + 1 = \underline{-10}$



8) $14 - (-4) = \underline{18}$



9) $(-2) - 14 = \underline{-16}$



10) $(-4) + (-1) = \underline{-5}$



Answers

1. 1

2. 17

3. 9

4. 2

5. -14

6. 10

7. -10

8. 18

9. -16

10. -5