



Write each array as a multiplication problem and solve.

Answers



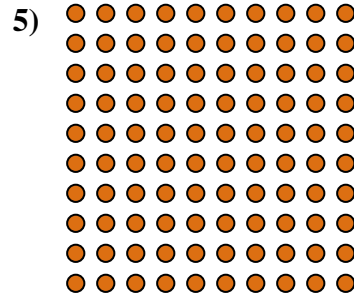

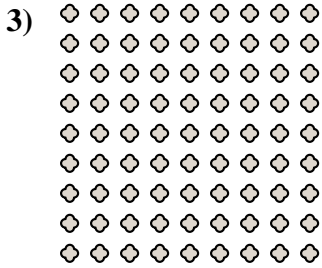
Ex. 5 × 9 = 45

1. _____

2. _____

3. _____

4. _____





5. _____

6. _____

7. _____

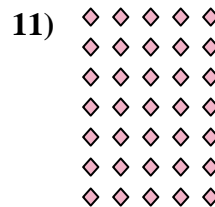
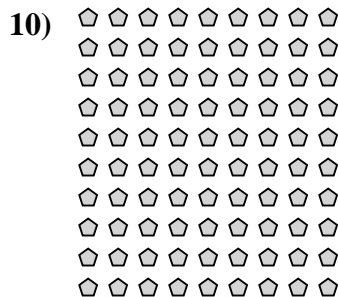

8. _____

9. _____



10. _____

11. _____





Write each array as a multiplication problem and solve.



Answers

Ex. 5 × 9 = 45

1. 8 × 8 = 64

2. 10 × 4 = 40

3. 9 × 9 = 81

4. 7 × 8 = 56

5. 10 × 10 = 100

6. 4 × 5 = 20

7. 8 × 4 = 32

8. 6 × 8 = 48

9. 9 × 10 = 90

10. 10 × 9 = 90

11. 7 × 5 = 35

