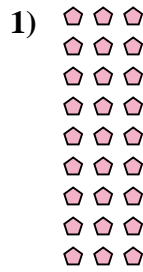
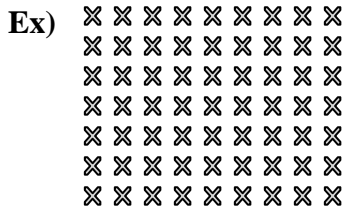




Write each array as a multiplication problem and solve.



Answers

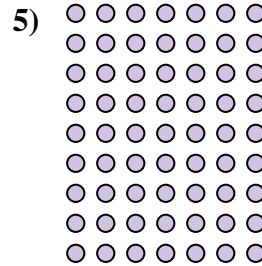


Ex. 7 × 9 = 63

1. _____

2. _____

3. _____

4. _____






5. _____

6. _____

7. _____


8. _____

9. _____



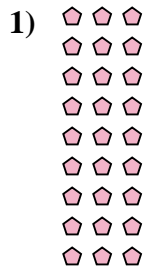
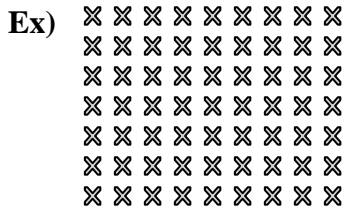
10. _____

11. _____





Write each array as a multiplication problem and solve.



Answers

Ex. 7 × 9 = 63

1. 9 × 3 = 27

2. 6 × 2 = 12

3. 9 × 4 = 36

4. 6 × 5 = 30

5. 9 × 7 = 63

6. 6 × 10 = 60




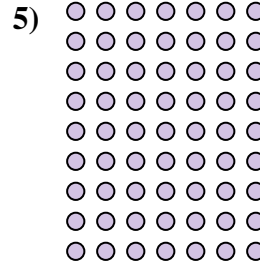


7. 7 × 6 = 42

8. 4 × 10 = 40

9. 5 × 6 = 30

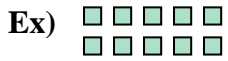
10. 2 × 3 = 6

11. 6 × 6 = 36





Write each array as a multiplication problem and solve.



Answers

Ex. 2 × 5 = 10

1. 6 × 10 = 60

2. 3 × 7 = 21

3. 10 × 3 = 30

4. 3 × 8 = 24

5. 7 × 3 = 21

6. 9 × 5 = 45

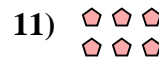





7. 9 × 6 = 54

8. 4 × 10 = 40

9. 6 × 9 = 54

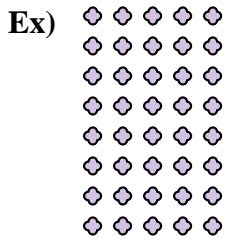
10. 6 × 5 = 30

11. 2 × 3 = 6





Write each array as a multiplication problem and solve.



Answers

Ex. $8 \times 5 = 40$

1. $9 \times 3 = 27$

2. $4 \times 5 = 20$

3. $5 \times 8 = 40$

4. $10 \times 2 = 20$

5. $5 \times 6 = 30$

6. $9 \times 5 = 45$

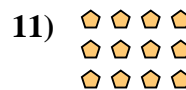


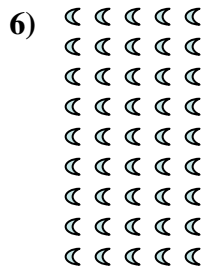
7. $8 \times 2 = 16$

8. $7 \times 8 = 56$

9. $2 \times 4 = 8$



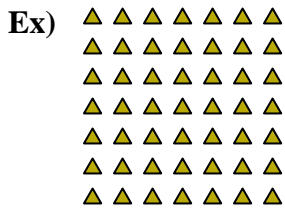
10. $10 \times 4 = 40$

11. $3 \times 4 = 12$





Write each array as a multiplication problem and solve.



Answers

Ex. $7 \times 7 = 49$

1. $8 \times 6 = 48$

2. $6 \times 8 = 48$

3. $5 \times 2 = 10$

4. $10 \times 8 = 80$

5. $8 \times 2 = 16$

6. $9 \times 10 = 90$

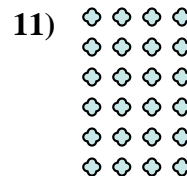
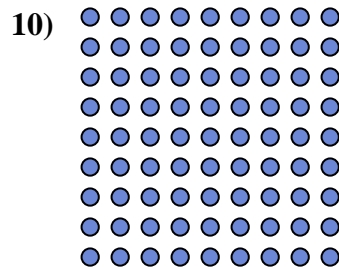


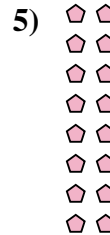

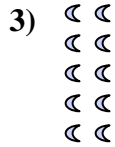
7. $3 \times 8 = 24$

8. $8 \times 9 = 72$

9. $3 \times 9 = 27$



10. $9 \times 9 = 81$

11. $6 \times 4 = 24$





Write each array as a multiplication problem and solve.



Answers

Ex. 6 × 7 = 42

1. 7 × 10 = 70

2. 3 × 4 = 12

3. 3 × 7 = 21

4. 5 × 4 = 20

5. 7 × 4 = 28

6. 4 × 9 = 36


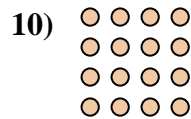


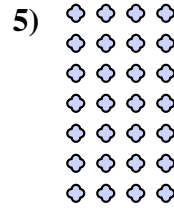
7. 4 × 10 = 40

8. 2 × 8 = 16

9. 8 × 9 = 72



10. 4 × 4 = 16

11. 7 × 9 = 63





Write each array as a multiplication problem and solve.



Answers

Ex. 9 × 5 = 45

1. 8 × 2 = 16

2. 6 × 9 = 54

3. 3 × 7 = 21

4. 2 × 9 = 18

5. 3 × 4 = 12

6. 8 × 10 = 80





7. 10 × 9 = 90

8. 2 × 10 = 20

9. 4 × 2 = 8


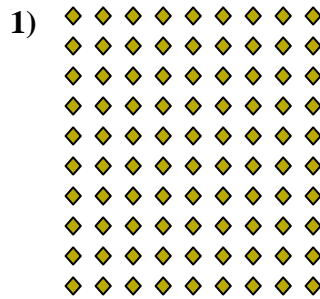

10. 3 × 6 = 18

11. 10 × 5 = 50





Write each array as a multiplication problem and solve.



Answers

Ex. 6 × 3 = 18

1. 10 × 9 = 90

2. 9 × 5 = 45

3. 5 × 2 = 10

4. 8 × 4 = 32

5. 9 × 10 = 90

6. 3 × 2 = 6

7. 4 × 9 = 36

8. 10 × 3 = 30

9. 10 × 7 = 70

10. 2 × 8 = 16

11. 3 × 4 = 12

