



Express each set as a multiplication problem.

Answers

Ex)

Ex. $2 \times 6 = 12$

1)

1. _____

2. _____

3. _____

2)

4. _____

5. _____

3)

6. _____

7. _____

8. _____

4)

5)


6)

7)

8)

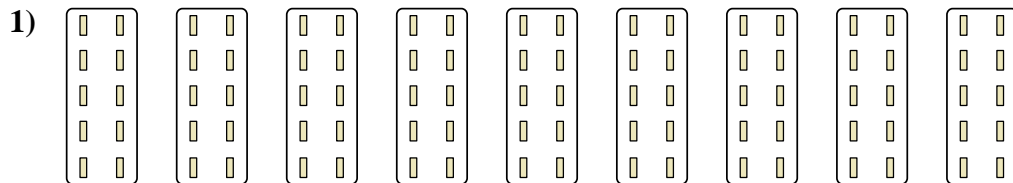


Express each set as a multiplication problem.




Answers

Ex. 2x6=12




1. 9x10=90

2. 2x3=6



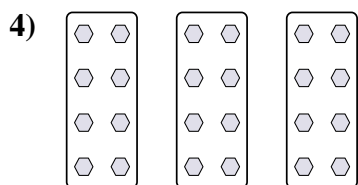
3. 4x10=40

4. 3x8=24



5. 9x5=45

6. 2x7=14



7. 6x10=60

8. 9x2=18

