



Express each set as a multiplication problem.

Answers

Ex)

Ex. $8 \times 5 = 40$

1)

1. _____

2. _____

2)

3. _____

4. _____

5. _____

3)

6. _____

7. _____

8. _____

4)

5)

6)


7)

8)



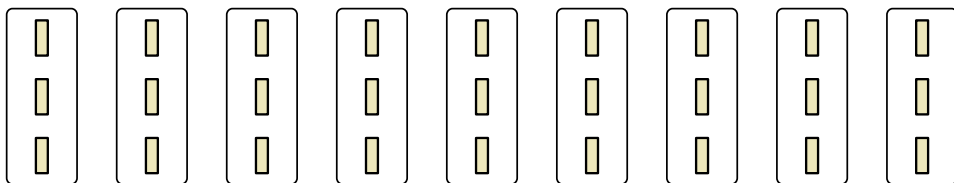
Express each set as a multiplication problem.

Ex)



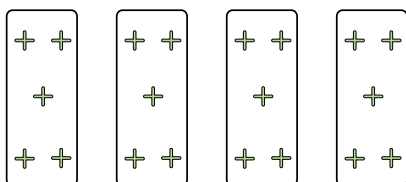
Ex. $8 \times 5 = 40$

1)



1. $9 \times 3 = 27$

2)




2. $4 \times 5 = 20$

3. $5 \times 8 = 40$

4. $10 \times 2 = 20$

5. $5 \times 6 = 30$

3)

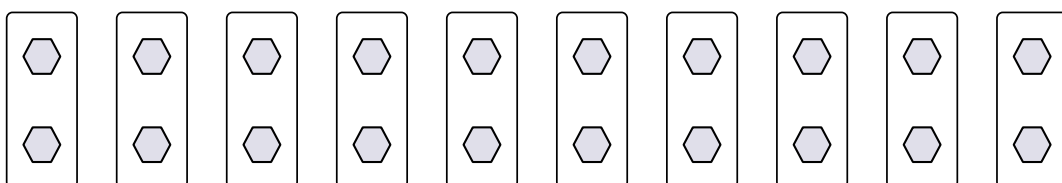


6. $9 \times 5 = 45$

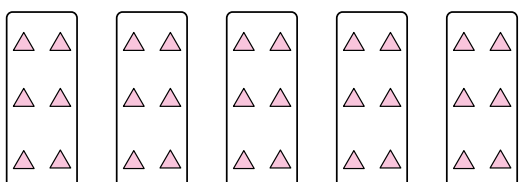
7. $8 \times 2 = 16$

8. $7 \times 8 = 56$

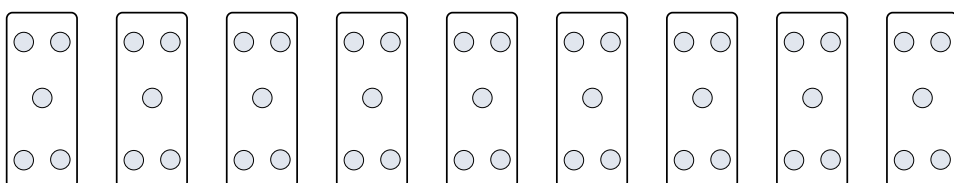
4)




5)




6)



7)



8)



Answers

Ex. $8 \times 5 = 40$

1. $9 \times 3 = 27$

2. $4 \times 5 = 20$

3. $5 \times 8 = 40$

4. $10 \times 2 = 20$

5. $5 \times 6 = 30$

6. $9 \times 5 = 45$

7. $8 \times 2 = 16$

8. $7 \times 8 = 56$