



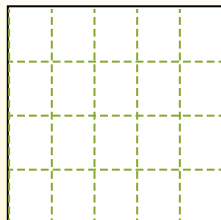
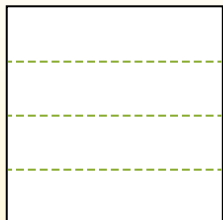
Partition the shape as described and then count to find the number of boxes.

**Answers**

Rows go left to right.


Columns go up and down.

This has 4 rows and 5 columns.  
There are 20 boxes total.



1. \_\_\_\_\_
2. \_\_\_\_\_
3. \_\_\_\_\_
4. \_\_\_\_\_
5. \_\_\_\_\_
6. \_\_\_\_\_
7. \_\_\_\_\_
8. \_\_\_\_\_
9. \_\_\_\_\_


1) 3 rows  
3 columns




2) 5 rows  
5 columns



3) 5 rows  
3 columns




4) 4 rows  
4 columns




5) 2 rows  
2 columns




6) 2 rows  
3 columns




7) 2 rows  
4 columns



8) 3 rows  
4 columns



9) 3 rows  
2 columns



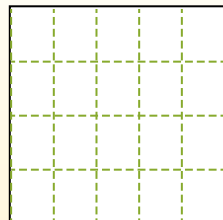
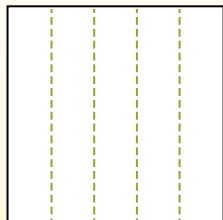
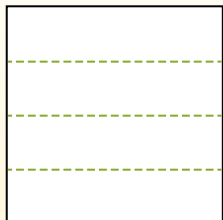


Partition the shape as described and then count to find the number of boxes.

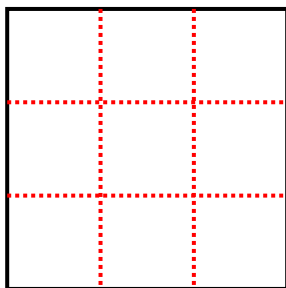
Rows go left to right.

Columns go up and down.

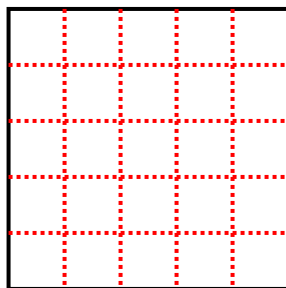
This has 4 rows and 5 columns.  
There are 20 boxes total.



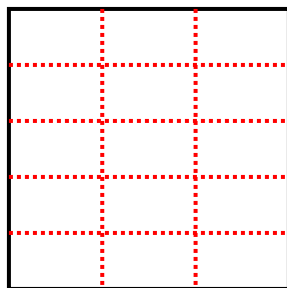
1) 3 rows  
3 columns




2) 5 rows  
5 columns



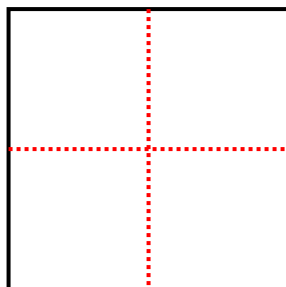
3) 5 rows  
3 columns



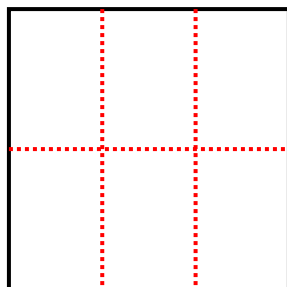
4) 4 rows  
4 columns



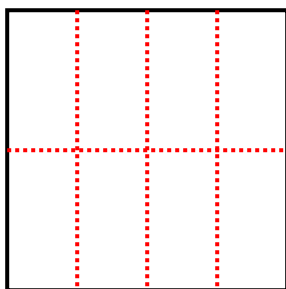
5) 2 rows  
2 columns



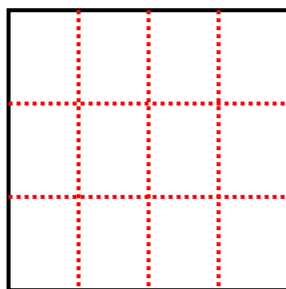
6) 2 rows  
3 columns



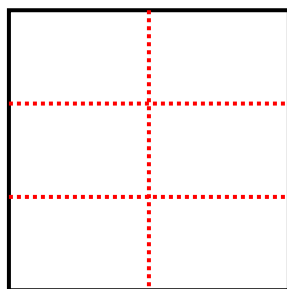
7) 2 rows  
4 columns



8) 3 rows  
4 columns



9) 3 rows  
2 columns



Answers

1. 9

2. 25

3. 15

4. 16

5. 4

6. 6

7. 8

8. 12

9. 6