



Partition the shape as described and then count to find the number of boxes.

Answers

Rows go left to right.


Columns go up and down.

This has 4 rows and 5 columns.  
There are 20 boxes total.




- 1. \_\_\_\_\_
- 2. \_\_\_\_\_
- 3. \_\_\_\_\_
- 4. \_\_\_\_\_
- 5. \_\_\_\_\_
- 6. \_\_\_\_\_
- 7. \_\_\_\_\_
- 8. \_\_\_\_\_
- 9. \_\_\_\_\_


1) 4 rows  
2 columns




2) 2 rows  
2 columns




3) 5 rows  
3 columns




4) 5 rows  
4 columns




5) 3 rows  
2 columns



6) 4 rows  
3 columns




7) 5 rows  
2 columns



8) 4 rows  
4 columns



9) 3 rows  
3 columns



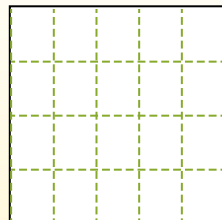
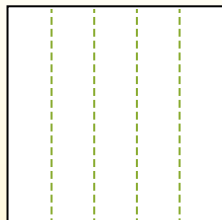
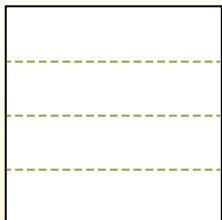


Partition the shape as described and then count to find the number of boxes.

Rows go left to right.

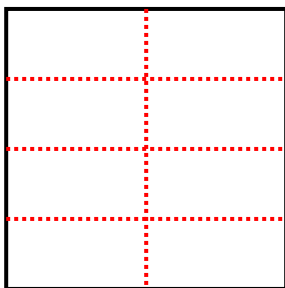
Columns go up and down.

This has 4 rows and 5 columns.  
There are 20 boxes total.

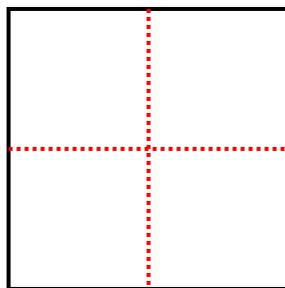


Answers

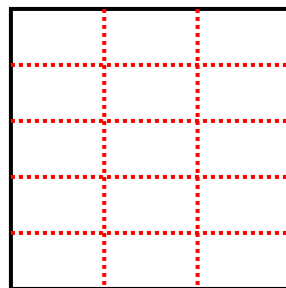
- 1) 4 rows  
2 columns



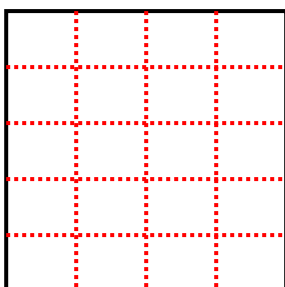
- 2) 2 rows  
2 columns



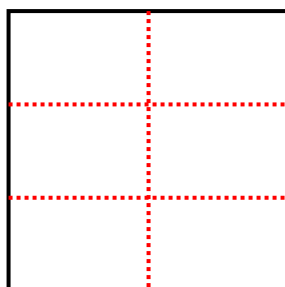
- 3) 5 rows  
3 columns



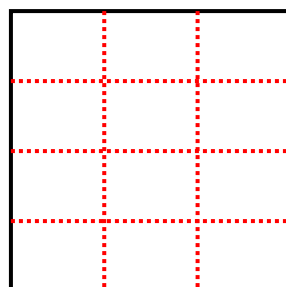
- 4) 5 rows  
4 columns



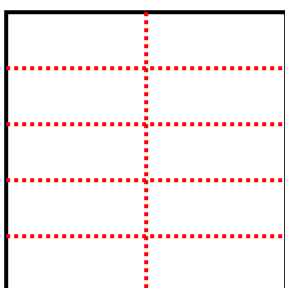
- 5) 3 rows  
2 columns




- 6) 4 rows  
3 columns



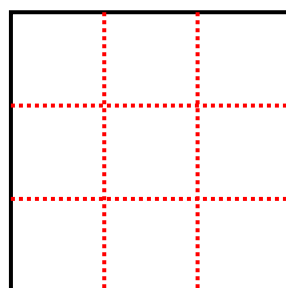
- 7) 5 rows  
2 columns



- 8) 4 rows  
4 columns



- 9) 3 rows  
3 columns



- 1. 8
- 2. 4
- 3. 15
- 4. 20
- 5. 6
- 6. 12
- 7. 10
- 8. 16
- 9. 9