



Partition the shape as described and then count to find the number of boxes.

Answers

Rows go left to right.

Columns go up and down.

This has **4 rows** and **5 columns**.
There are **20** boxes total.



1. _____
2. _____
3. _____
4. _____
5. _____
6. _____
7. _____
8. _____
9. _____

1) 5 rows
2 columns



2) 3 rows
3 columns



3) 2 rows
3 columns



4) 3 rows
4 columns



5) 2 rows
2 columns



6) 5 rows
4 columns



7) 3 rows
2 columns



8) 5 rows
3 columns



9) 2 rows
5 columns





Partition the shape as described and then count to find the number of boxes.

Rows go left to right.

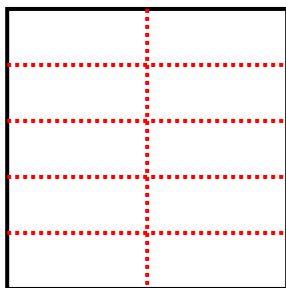
Columns go up and down.

This has 4 rows and 5 columns.
There are 20 boxes total.

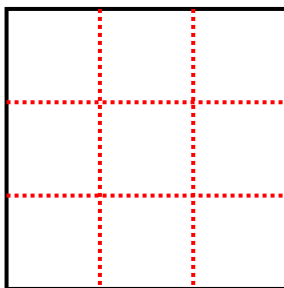


Answers

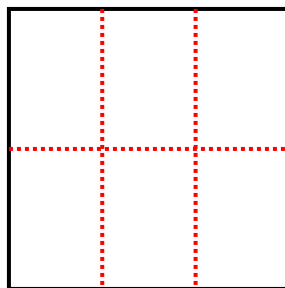
1) 5 rows
2 columns



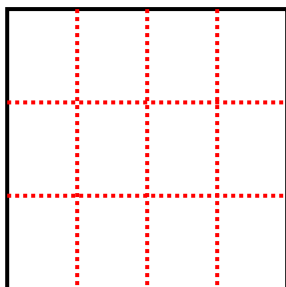
2) 3 rows
3 columns



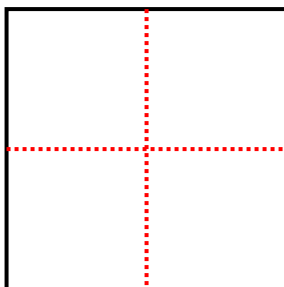
3) 2 rows
3 columns



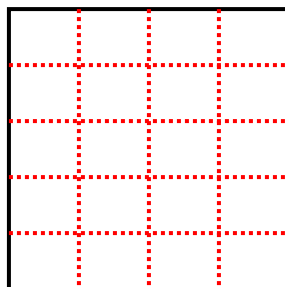
4) 3 rows
4 columns



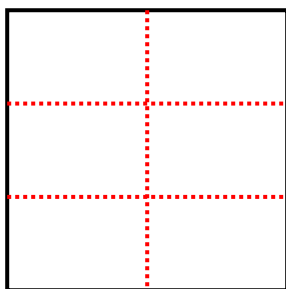
5) 2 rows
2 columns



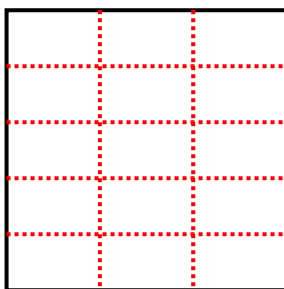
6) 5 rows
4 columns



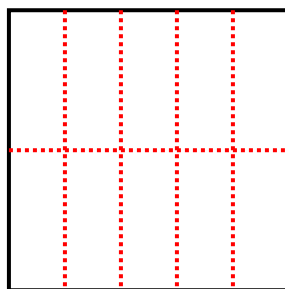
7) 3 rows
2 columns



8) 5 rows
3 columns



9) 2 rows
5 columns



1. **10**

2. **9**

3. **6**

4. **12**

5. **4**

6. **20**

7. **6**

8. **15**

9. **10**