




Use the array provided to solve each problem.


1)  $20 \times 35 =$




2)  $20 \times 23 =$




3)  $22 \times 20 =$




4)  $26 \times 20 =$



5)  $23 \times 20 =$



6)  $20 \times 21 =$



Answers

1. \_\_\_\_\_

2. \_\_\_\_\_

3. \_\_\_\_\_

4. \_\_\_\_\_

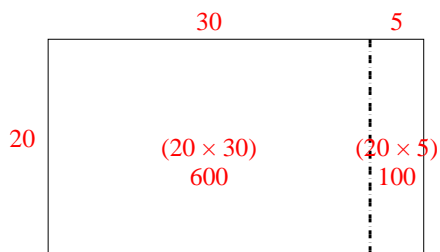
5. \_\_\_\_\_

6. \_\_\_\_\_

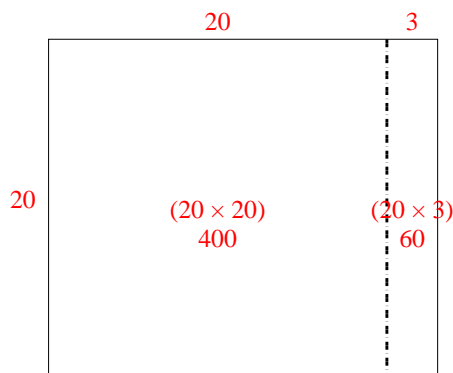


Use the array provided to solve each problem.

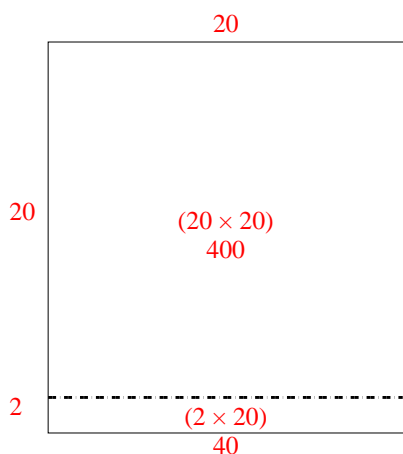
1)  $20 \times 35 =$



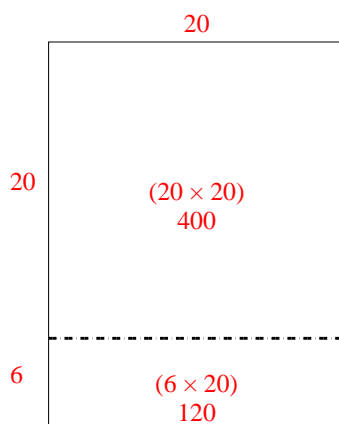
2)  $20 \times 23 =$



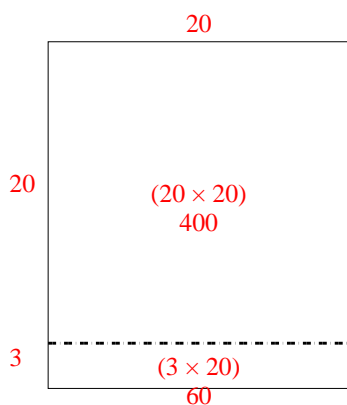
3)  $22 \times 20 =$



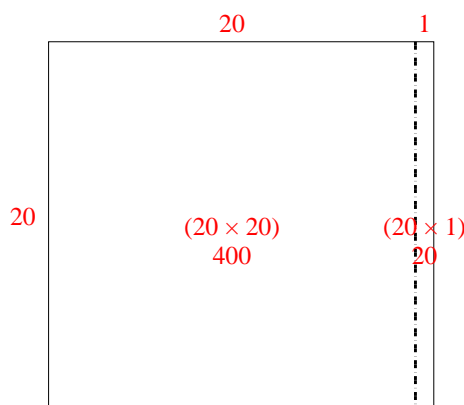
4)  $26 \times 20 =$



5)  $23 \times 20 =$



6)  $20 \times 21 =$



Answers

1. 700

2. 460

3. 440

4. 520

5. 460

6. 420