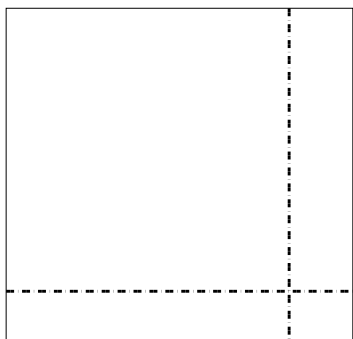


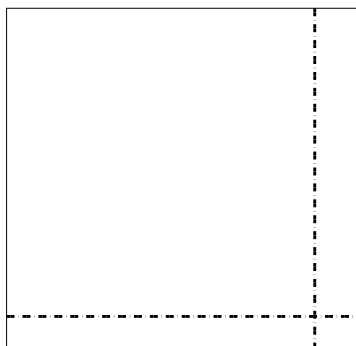


Use the array provided to solve each problem.


1) $47 \times 49 =$




2) $44 \times 46 =$




3) $36 \times 17 =$




4) $37 \times 13 =$



5) $36 \times 34 =$



6) $32 \times 25 =$



Answers

1. _____

2. _____

3. _____

4. _____

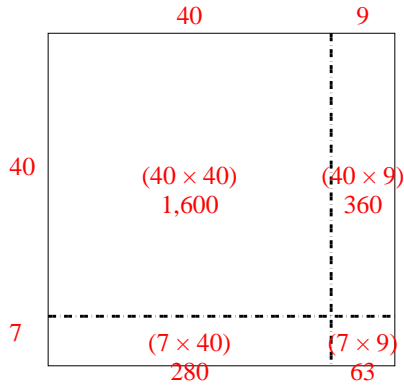
5. _____

6. _____

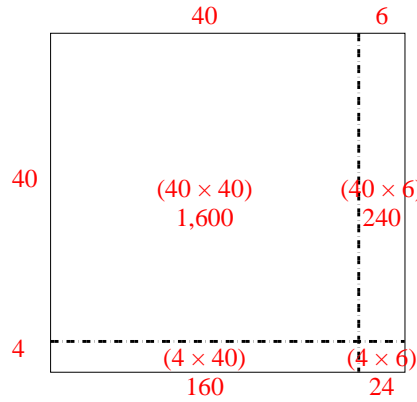


Use the array provided to solve each problem.

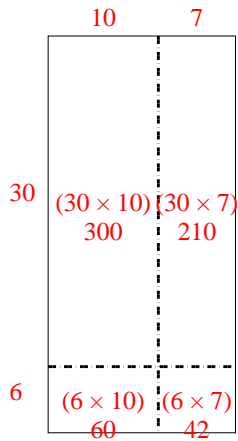
1) $47 \times 49 =$



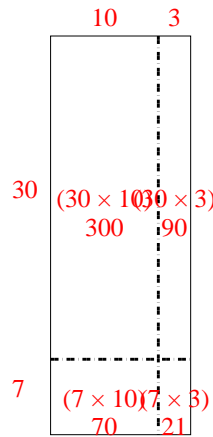
2) $44 \times 46 =$



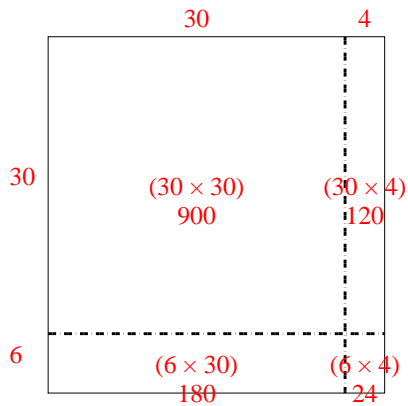
3) $36 \times 17 =$



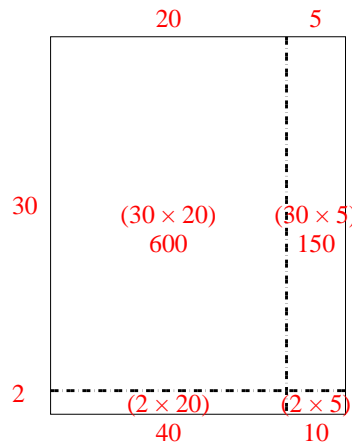
4) $37 \times 13 =$



5) $36 \times 34 =$



6) $32 \times 25 =$



Answers

1. **2,303**

2. **2,024**

3. **612**

4. **481**

5. **1,224**

6. **800**