





Use the array provided to solve each problem.


1) $62 \times 69 =$




2) $53 \times 39 =$




3) $57 \times 66 =$




4) $54 \times 57 =$



5) $46 \times 42 =$



6) $34 \times 27 =$



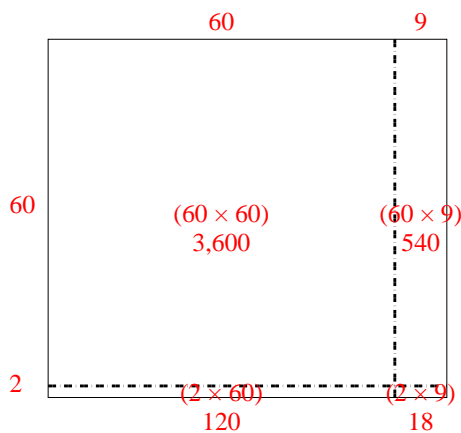
Answers

- 1. _____
- 2. _____
- 3. _____
- 4. _____
- 5. _____
- 6. _____

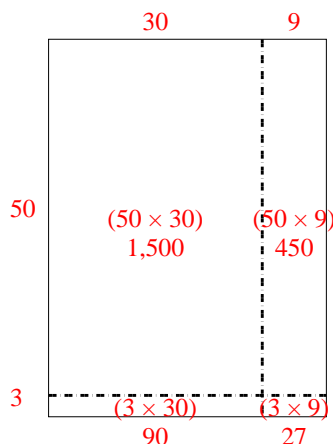


Use the array provided to solve each problem.

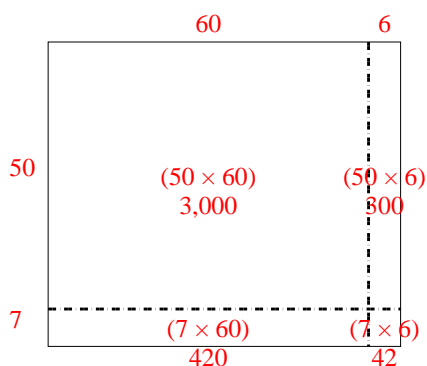
1) $62 \times 69 =$



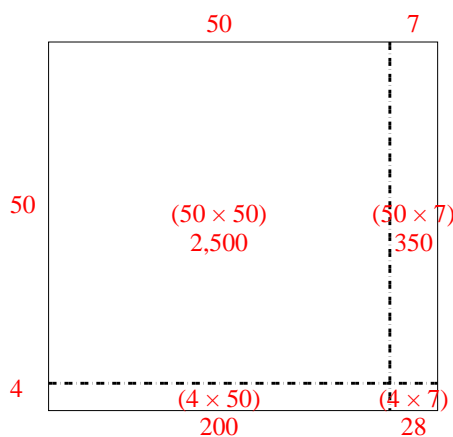
2) $53 \times 39 =$



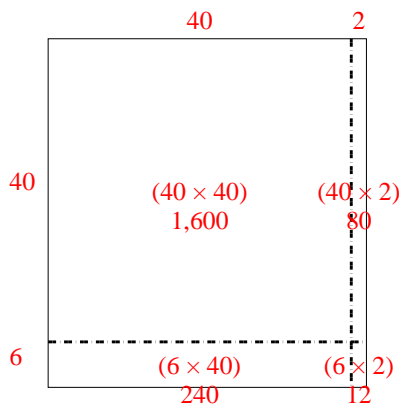
3) $57 \times 66 =$



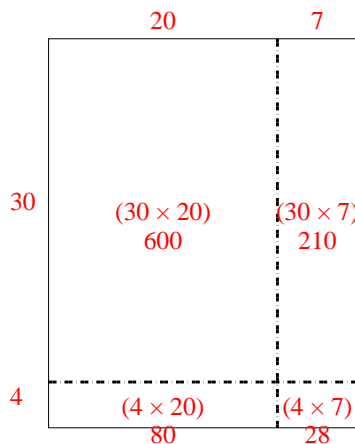
4) $54 \times 57 =$



5) $46 \times 42 =$



6) $34 \times 27 =$



Answers

1. **4,278**

2. **2,067**

3. **3,762**

4. **3,078**

5. **1,932**

6. **918**