





Use the array provided to solve each problem.


1)  $24 \times 20 =$




2)  $10 \times 16 =$




3)  $10 \times 15 =$




4)  $10 \times 12 =$



5)  $10 \times 11 =$



6)  $10 \times 13 =$



Answers

1. \_\_\_\_\_

2. \_\_\_\_\_

3. \_\_\_\_\_

4. \_\_\_\_\_

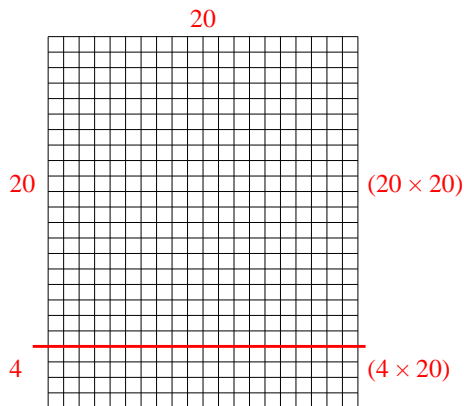
5. \_\_\_\_\_

6. \_\_\_\_\_

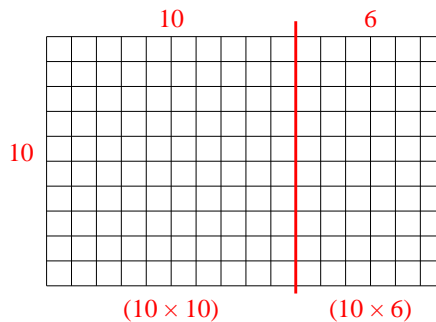


Use the array provided to solve each problem.

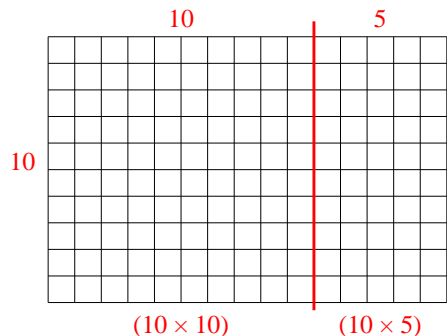
1)  $24 \times 20 =$



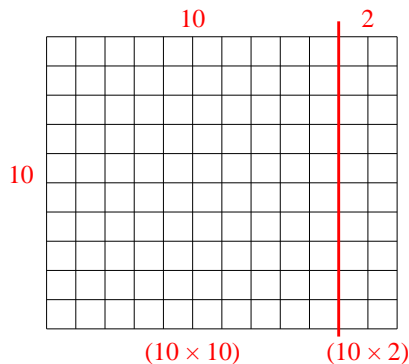
2)  $10 \times 16 =$



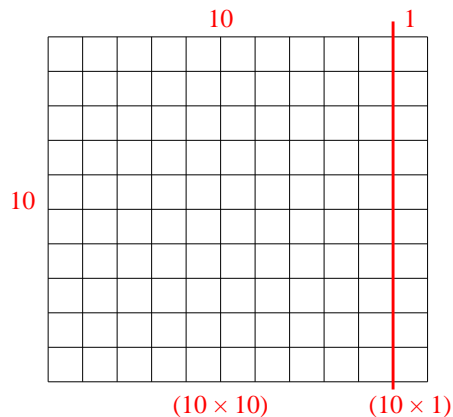
3)  $10 \times 15 =$



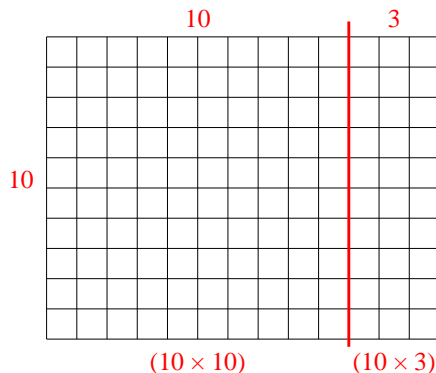
4)  $10 \times 12 =$



5)  $10 \times 11 =$



6)  $10 \times 13 =$



Answers

1. **480**

2. **160**

3. **150**

4. **120**

5. **110**

6. **130**