





Use the array provided to solve each problem.


1) $23 \times 20 =$




2) $10 \times 13 =$




3) $10 \times 11 =$




4) $10 \times 17 =$



5) $10 \times 16 =$



6) $19 \times 10 =$



Answers

1. _____

2. _____

3. _____

4. _____

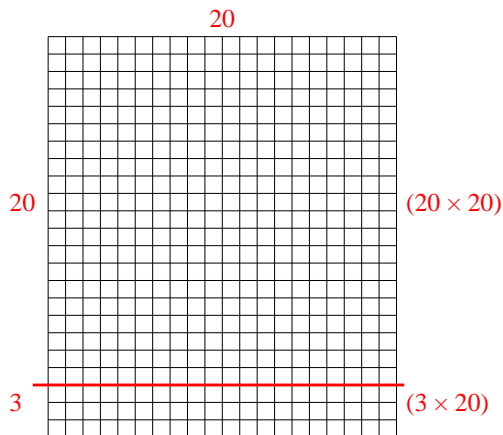
5. _____

6. _____

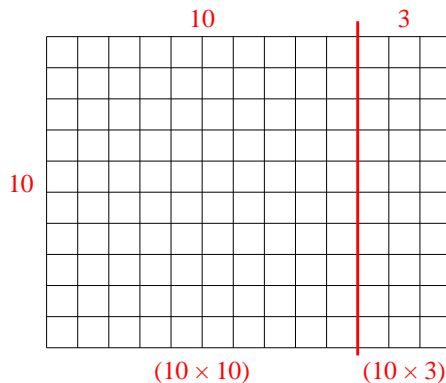


Use the array provided to solve each problem.

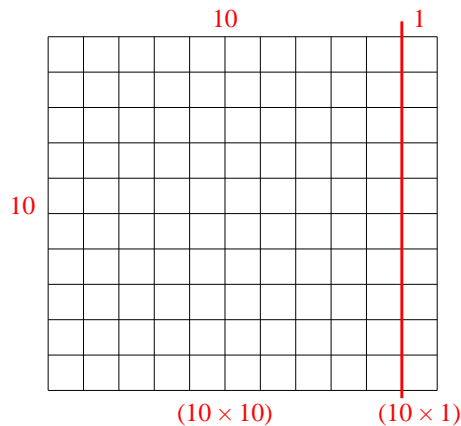
1) $23 \times 20 =$



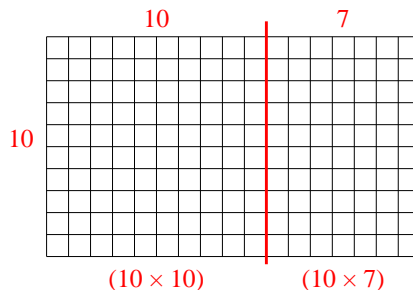
2) $10 \times 13 =$



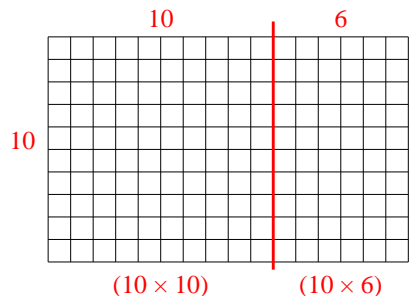
3) $10 \times 11 =$



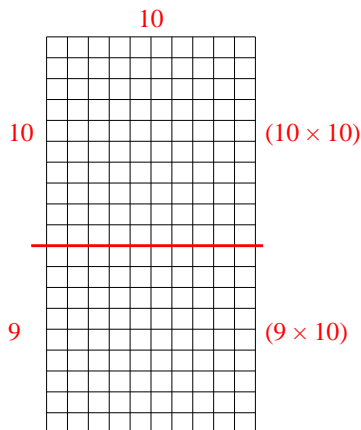
4) $10 \times 17 =$



5) $10 \times 16 =$



6) $19 \times 10 =$



Answers

1. 460

2. 130

3. 110

4. 170

5. 160

6. 190