
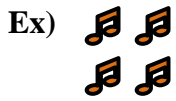




Write an equation to express the array and then find the number of shapes.

Answers



Ex. $2 \times 2 = 4$

1. _____

2. _____

3. _____

4. _____

5. _____

6. _____

7. _____

8. _____

9. _____


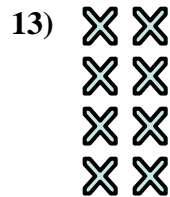


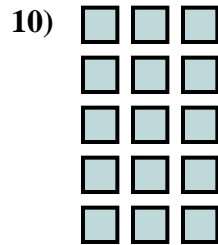
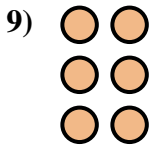






10. _____

11. _____

12. _____


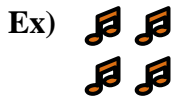
13. _____

14. _____








Write an equation to express the array and then find the number of shapes.



Answers

Ex. $2 \times 2 = 4$



1. $2 \times 4 = 8$

2. $2 \times 3 = 6$




3. $3 \times 3 = 9$

4. $5 \times 4 = 20$

5. $4 \times 4 = 16$

6. $2 \times 5 = 10$

7. $3 \times 4 = 12$

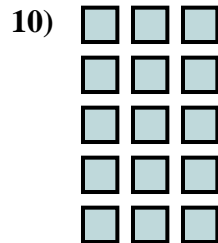
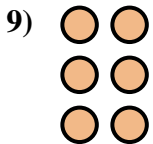


8. $4 \times 3 = 12$

9. $3 \times 2 = 6$

10. $5 \times 3 = 15$

11. $5 \times 2 = 10$



12. $4 \times 5 = 20$

13. $4 \times 2 = 8$

14. $3 \times 5 = 15$

