





Write an equation to express the array and then find the number of shapes.

Answers

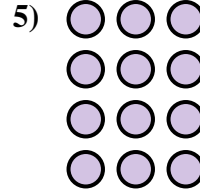



Ex. $2 \times 3 = 6$

1. _____

2. _____

3. _____

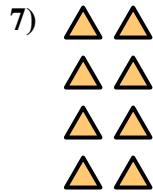



4. _____

5. _____

6. _____

7. _____





8. _____

9. _____

10. _____

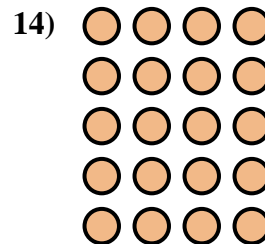
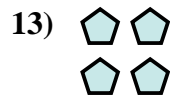
11. _____



12. _____



13. _____

14. _____





Write an equation to express the array and then find the number of shapes.



Answers

Ex. $2 \times 3 = 6$

1. $3 \times 5 = 15$

2. $3 \times 3 = 9$

3. $2 \times 5 = 10$

4. $3 \times 2 = 6$

5. $4 \times 3 = 12$

6. $4 \times 4 = 16$

7. $4 \times 2 = 8$

8. $3 \times 4 = 12$

9. $5 \times 5 = 25$

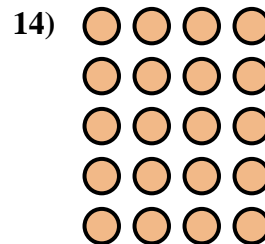
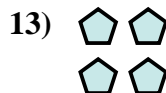


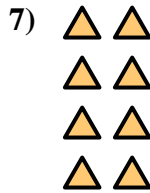

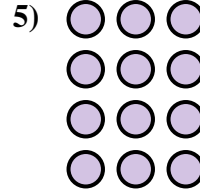

10. $4 \times 5 = 20$

11. $5 \times 2 = 10$

12. $2 \times 4 = 8$

13. $2 \times 2 = 4$

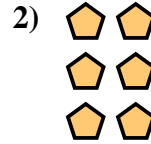
14. $5 \times 4 = 20$





Write an equation to express the array and then find the number of shapes.

Answers






Ex. $2 \times 2 = 4$

1. _____

2. _____

3. _____





4. _____

5. _____

6. _____

7. _____

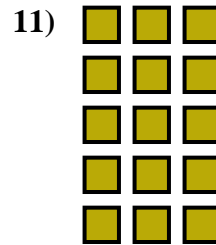



8. _____

9. _____

10. _____



11. _____



12. _____

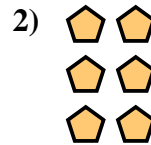
13. _____

14. _____





Write an equation to express the array and then find the number of shapes.



Answers

Ex. $2 \times 2 = 4$

1. $3 \times 3 = 9$

2. $3 \times 2 = 6$

3. $4 \times 3 = 12$

4. $3 \times 4 = 12$

5. $4 \times 2 = 8$

6. $4 \times 4 = 16$

7. $3 \times 5 = 15$

8. $4 \times 5 = 20$

9. $2 \times 4 = 8$



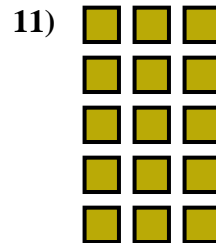





10. $2 \times 3 = 6$

11. $5 \times 3 = 15$

12. $5 \times 2 = 10$

13. $2 \times 5 = 10$

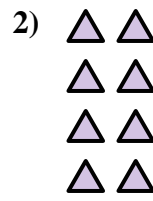
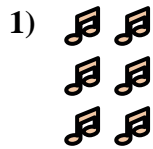
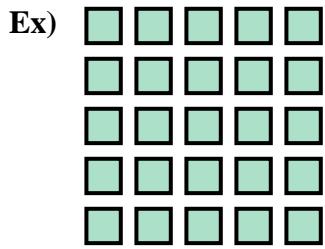
14. $5 \times 4 = 20$





Write an equation to express the array and then find the number of shapes.

Answers



Ex. $5 \times 5 = 25$

1. _____

2. _____

3. _____

4. _____

5. _____

6. _____

7. _____

8. _____

9. _____

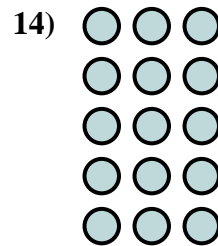
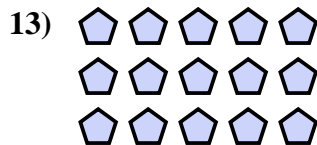
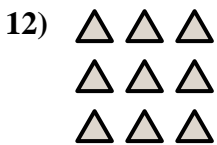
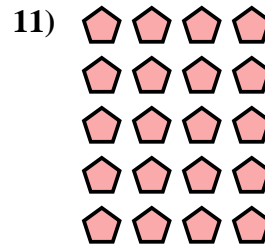



10. _____

11. _____

12. _____

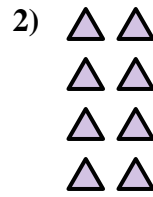
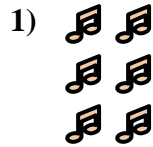
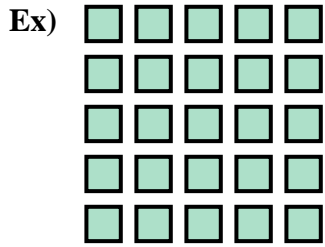
13. _____

14. _____





Write an equation to express the array and then find the number of shapes.



Answers

Ex. $5 \times 5 = 25$

1. $3 \times 2 = 6$

2. $4 \times 2 = 8$

3. $2 \times 3 = 6$

4. $4 \times 5 = 20$

5. $5 \times 2 = 10$

6. $2 \times 2 = 4$

7. $3 \times 4 = 12$

8. $2 \times 5 = 10$

9. $4 \times 3 = 12$

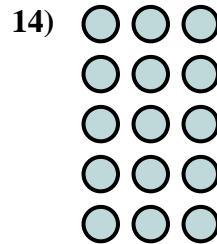

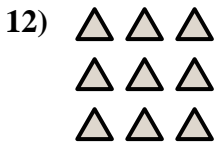
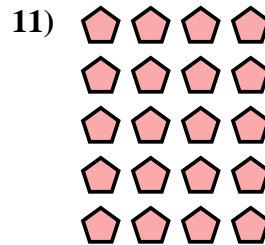
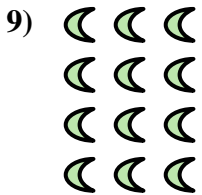
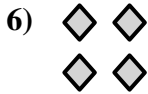


10. $4 \times 4 = 16$

11. $5 \times 4 = 20$

12. $3 \times 3 = 9$

13. $3 \times 5 = 15$

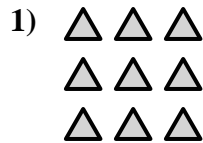

14. $5 \times 3 = 15$





Write an equation to express the array and then find the number of shapes.

Answers

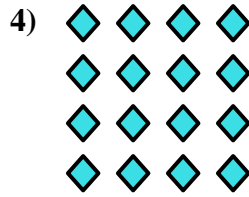



Ex. $5 \times 3 = 15$

1. _____

2. _____

3. _____




4. _____

5. _____

6. _____


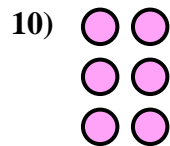

7. _____



8. _____

9. _____

10. _____

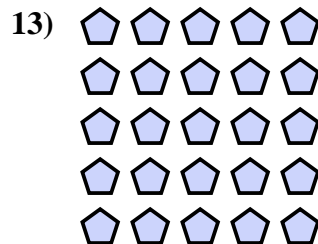



11. _____

12. _____



13. _____

14. _____





Write an equation to express the array and then find the number of shapes.



Answers

Ex. $5 \times 3 = 15$

1. $3 \times 3 = 9$

2. $2 \times 3 = 6$

3. $4 \times 2 = 8$

4. $4 \times 4 = 16$

5. $2 \times 5 = 10$

6. $2 \times 4 = 8$

7. $4 \times 3 = 12$

8. $5 \times 4 = 20$

9. $3 \times 4 = 12$

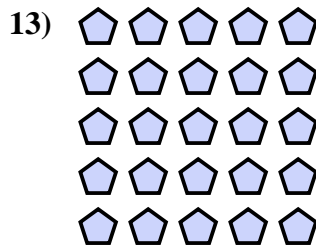


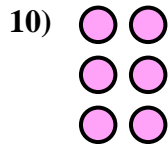


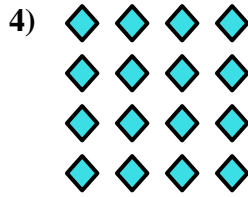

10. $3 \times 2 = 6$

11. $3 \times 5 = 15$

12. $4 \times 5 = 20$

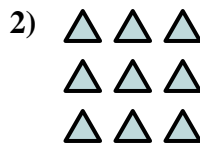

13. $5 \times 5 = 25$

14. $2 \times 2 = 4$





Write an equation to express the array and then find the number of shapes.



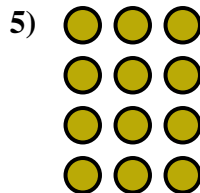

Answers

Ex. $2 \times 2 = 4$

1. _____

2. _____

3. _____


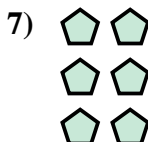



4. _____

5. _____

6. _____

7. _____

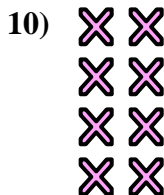


8. _____

9. _____

10. _____

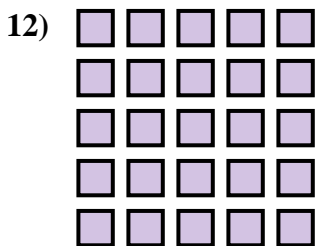
11. _____



12. _____

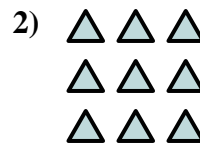

13. _____

14. _____





Write an equation to express the array and then find the number of shapes.



Answers

Ex. $2 \times 2 = 4$

1. $5 \times 2 = 10$

2. $3 \times 3 = 9$

3. $2 \times 3 = 6$

4. $3 \times 4 = 12$

5. $4 \times 3 = 12$

6. $5 \times 4 = 20$

7. $3 \times 2 = 6$

8. $5 \times 3 = 15$

9. $2 \times 5 = 10$


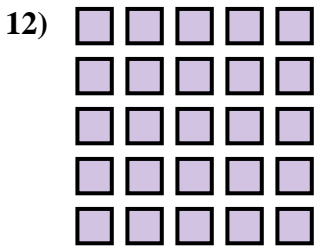
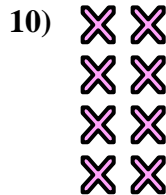
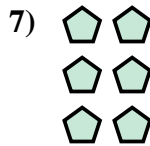

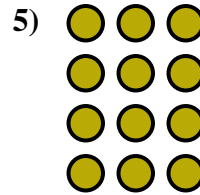

10. $4 \times 2 = 8$

11. $3 \times 5 = 15$

12. $5 \times 5 = 25$

13. $2 \times 4 = 8$



14. $4 \times 4 = 16$





Write an equation to express the array and then find the number of shapes.

Answers





Ex. $4 \times 4 = 16$

1. _____

2. _____

3. _____

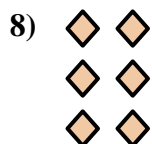




4. _____

5. _____

6. _____

7. _____



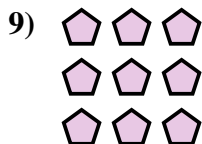


8. _____

9. _____

10. _____

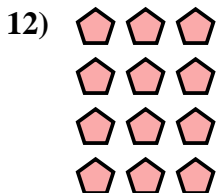
11. _____



12. _____

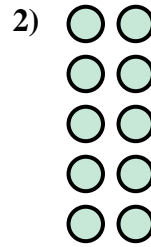
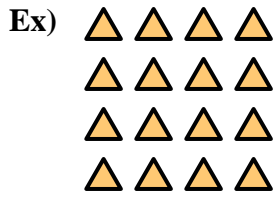
13. _____

14. _____





Write an equation to express the array and then find the number of shapes.



Answers

Ex. $4 \times 4 = 16$

1. $2 \times 4 = 8$

2. $5 \times 2 = 10$

3. $3 \times 4 = 12$

4. $3 \times 5 = 15$

5. $2 \times 3 = 6$

6. $4 \times 5 = 20$

7. $5 \times 3 = 15$

8. $3 \times 2 = 6$

9. $3 \times 3 = 9$

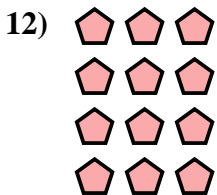


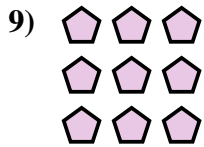
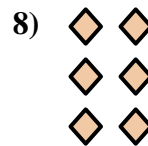



10. $5 \times 5 = 25$

11. $5 \times 4 = 20$

12. $4 \times 3 = 12$

13. $2 \times 2 = 4$

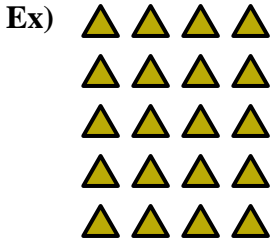
14. $2 \times 5 = 10$





Write an equation to express the array and then find the number of shapes.

Answers

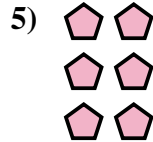




Ex. $5 \times 4 = 20$

1. _____

2. _____

3. _____


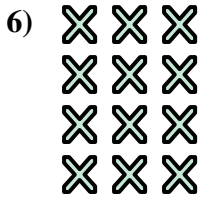


4. _____

5. _____

6. _____

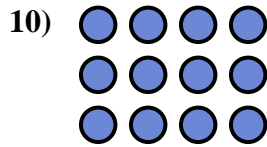

7. _____



8. _____

9. _____

10. _____

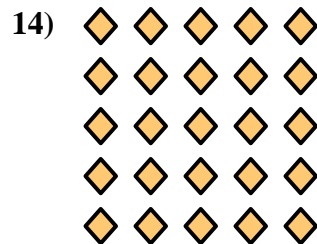



11. _____

12. _____

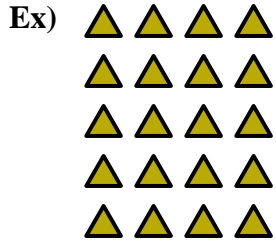
13. _____

14. _____





Write an equation to express the array and then find the number of shapes.



Answers

Ex. $5 \times 4 = 20$

1. $4 \times 2 = 8$

2. $2 \times 2 = 4$

3. $5 \times 3 = 15$

4. $4 \times 4 = 16$

5. $3 \times 2 = 6$

6. $4 \times 3 = 12$

7. $5 \times 2 = 10$

8. $3 \times 3 = 9$

9. $2 \times 3 = 6$

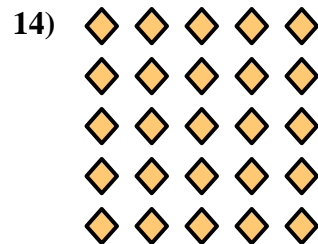

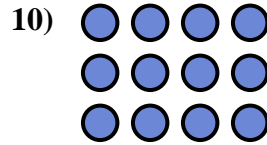


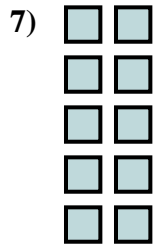

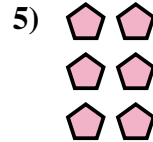


10. $3 \times 4 = 12$

11. $2 \times 5 = 10$

12. $2 \times 4 = 8$

13. $3 \times 5 = 15$



14. $5 \times 5 = 25$





Write an equation to express the array and then find the number of shapes.

Answers



Ex. $4 \times 4 = 16$

1. _____

2. _____

3. _____

4. _____

5. _____

6. _____

7. _____

8. _____

9. _____

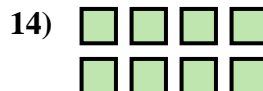
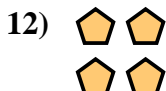


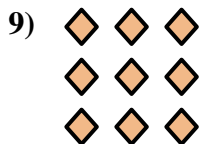
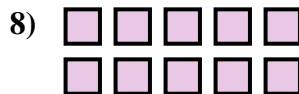
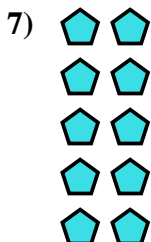

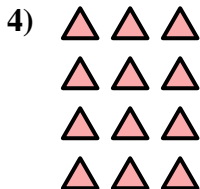
10. _____

11. _____

12. _____



13. _____

14. _____





Write an equation to express the array and then find the number of shapes.



Answers

Ex. $4 \times 4 = 16$

1. $5 \times 4 = 20$

2. $4 \times 5 = 20$

3. $2 \times 3 = 6$

4. $4 \times 3 = 12$

5. $5 \times 5 = 25$

6. $3 \times 5 = 15$

7. $5 \times 2 = 10$

8. $2 \times 5 = 10$

9. $3 \times 3 = 9$

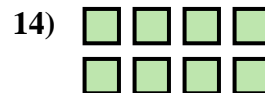
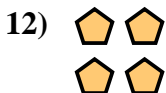

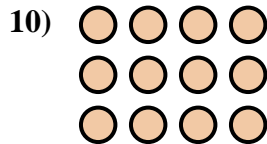
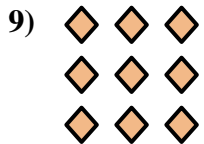
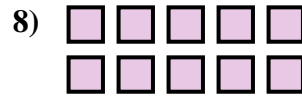
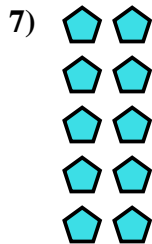
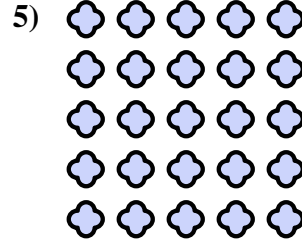
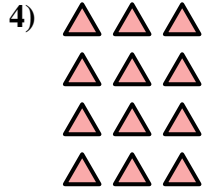
10. $3 \times 4 = 12$

11. $4 \times 2 = 8$

12. $2 \times 2 = 4$

13. $3 \times 2 = 6$

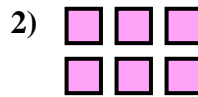
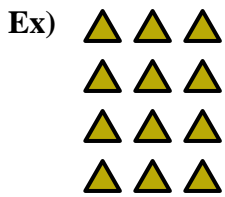
14. $2 \times 4 = 8$





Write an equation to express the array and then find the number of shapes.

Answers





Ex. $4 \times 3 = 12$

1. _____

2. _____

3. _____


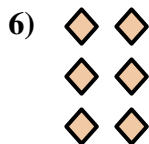


4. _____

5. _____

6. _____

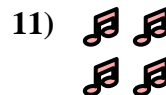


7. _____



8. _____

9. _____

10. _____






11. _____

12. _____

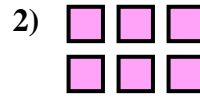

13. _____

14. _____







Write an equation to express the array and then find the number of shapes.



Answers

Ex. $4 \times 3 = 12$



1. $3 \times 3 = 9$

2. $2 \times 3 = 6$

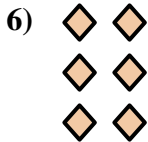
3. $3 \times 4 = 12$

4. $5 \times 4 = 20$

5. $2 \times 5 = 10$

6. $3 \times 2 = 6$

7. $2 \times 4 = 8$

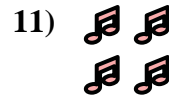




8. $4 \times 4 = 16$

9. $5 \times 3 = 15$

10. $5 \times 2 = 10$




11. $2 \times 2 = 4$



12. $4 \times 5 = 20$

13. $3 \times 5 = 15$



14. $4 \times 2 = 8$





Write an equation to express the array and then find the number of shapes.

Answers

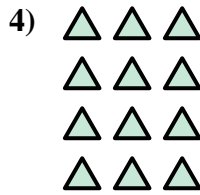



Ex. $3 \times 4 = 12$

1. _____

2. _____

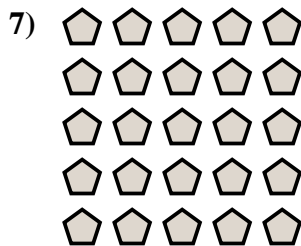
3. _____



4. _____

5. _____

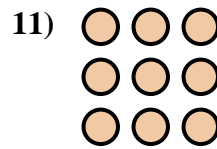
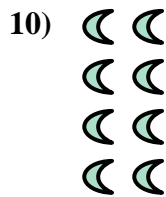

6. _____



7. _____

8. _____

9. _____



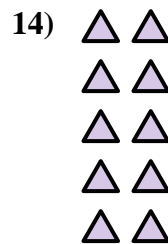
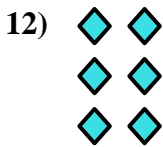
10. _____

11. _____

12. _____



13. _____

14. _____





Write an equation to express the array and then find the number of shapes.



Answers

Ex. $3 \times 4 = 12$

1. $2 \times 5 = 10$

2. $3 \times 5 = 15$

3. $4 \times 5 = 20$

4. $4 \times 3 = 12$

5. $5 \times 3 = 15$

6. $2 \times 3 = 6$

7. $5 \times 5 = 25$

8. $2 \times 2 = 4$

9. $4 \times 4 = 16$

10. $4 \times 2 = 8$

11. $3 \times 3 = 9$

12. $3 \times 2 = 6$

13. $2 \times 4 = 8$

14. $5 \times 2 = 10$

