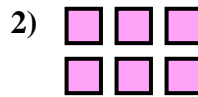
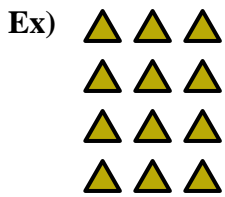




Write an equation to express the array and then find the number of shapes.

Answers





Ex. $4 \times 3 = 12$

1. _____

2. _____

3. _____

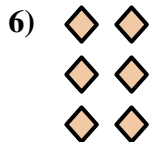


4. _____

5. _____

6. _____

7. _____

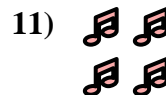




8. _____

9. _____

10. _____




11. _____



12. _____

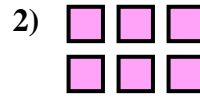

13. _____

14. _____







Write an equation to express the array and then find the number of shapes.



Answers

Ex. $4 \times 3 = 12$



1. $3 \times 3 = 9$

2. $2 \times 3 = 6$

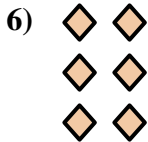
3. $3 \times 4 = 12$

4. $5 \times 4 = 20$

5. $2 \times 5 = 10$

6. $3 \times 2 = 6$

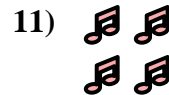


7. $2 \times 4 = 8$



8. $4 \times 4 = 16$

9. $5 \times 3 = 15$

10. $5 \times 2 = 10$



11. $2 \times 2 = 4$

12. $4 \times 5 = 20$

13. $3 \times 5 = 15$

14. $4 \times 2 = 8$

