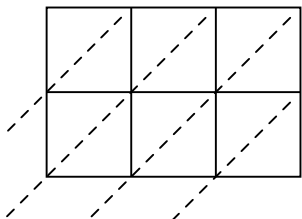


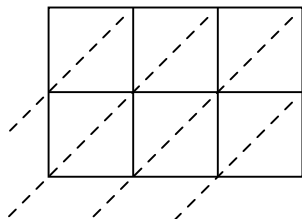


Use lattice multiplication to solve each problem.

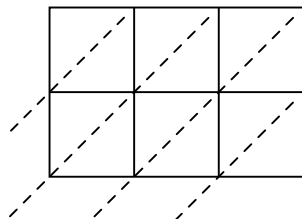
1) $636 \times 32 =$



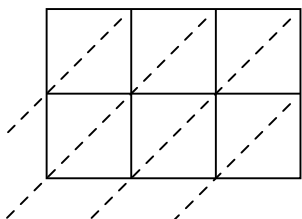
2) $339 \times 54 =$



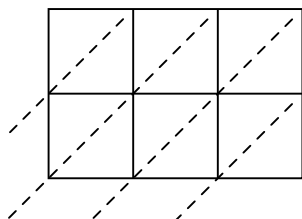
3) $637 \times 28 =$



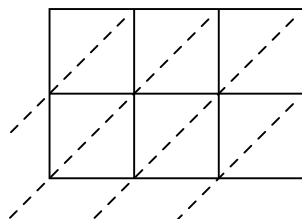
4) $525 \times 91 =$



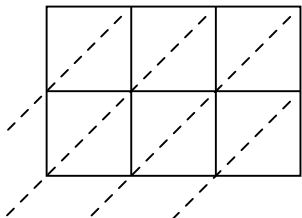
5) $768 \times 79 =$



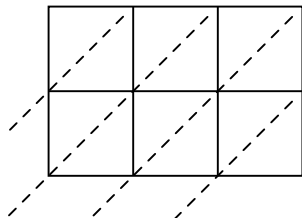
6) $686 \times 73 =$



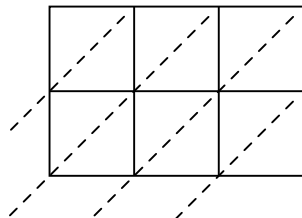
7) $675 \times 69 =$



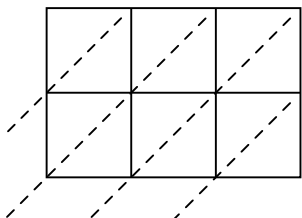
8) $714 \times 45 =$



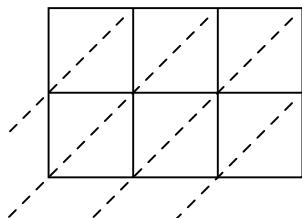
9) $389 \times 41 =$



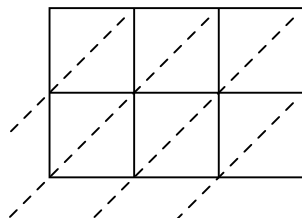
10) $135 \times 24 =$



11) $363 \times 59 =$



12) $417 \times 39 =$



Answers

1. _____

2. _____

3. _____

4. _____

5. _____

6. _____

7. _____

8. _____

9. _____

10. _____

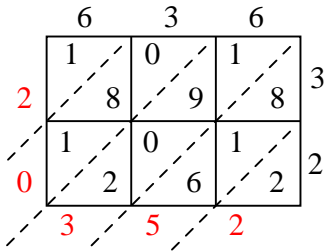
11. _____

12. _____

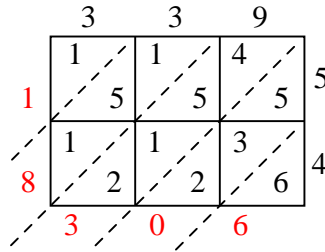


Use lattice multiplication to solve each problem.

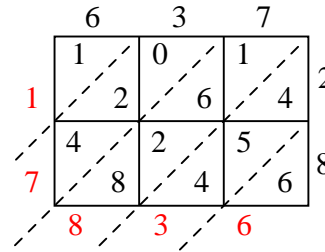
1) $636 \times 32 =$



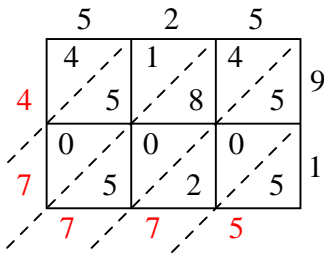
2) $339 \times 54 =$



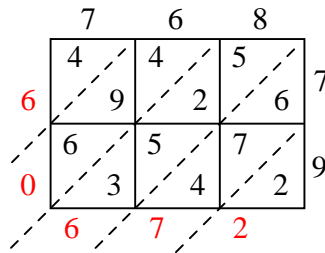
3) $637 \times 28 =$



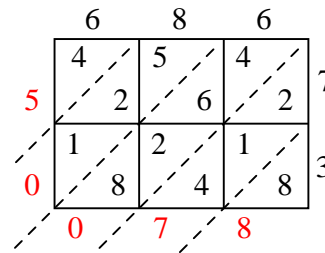
4) $525 \times 91 =$



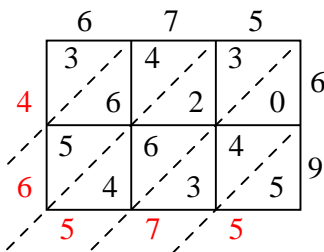
5) $768 \times 79 =$



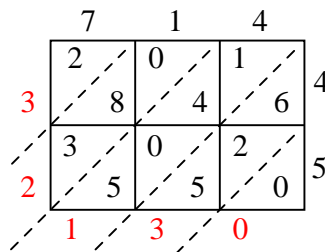
6) $686 \times 73 =$



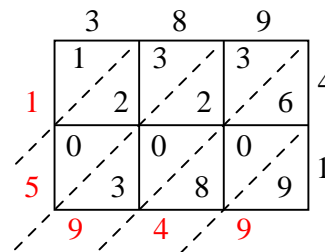
7) $675 \times 69 =$



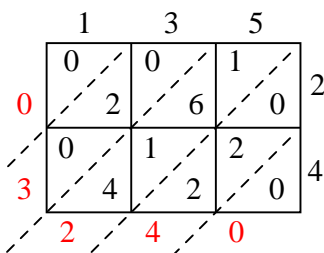
8) $714 \times 45 =$



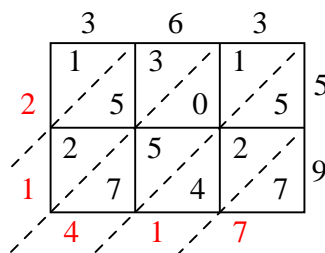
9) $389 \times 41 =$



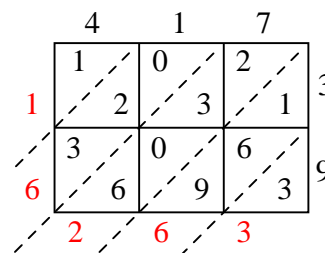
10) $135 \times 24 =$



11) $363 \times 59 =$



12) $417 \times 39 =$



Answers

1. 20,352
2. 18,306
3. 17,836
4. 47,775
5. 60,672
6. 50,078
7. 46,575
8. 32,130
9. 15,949
10. 3,240
11. 21,417
12. 16,263