

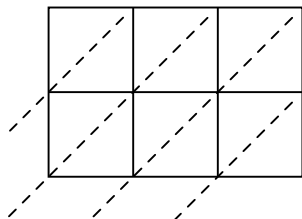


Use lattice multiplication to solve each problem.

1) $341 \times 47 =$



2) $768 \times 31 =$



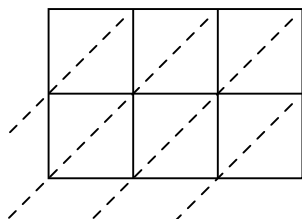
3) $166 \times 52 =$



4) $126 \times 82 =$



5) $130 \times 86 =$



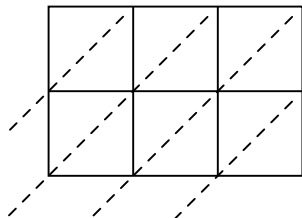
6) $692 \times 58 =$



7) $268 \times 37 =$



8) $535 \times 68 =$



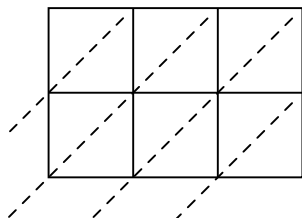
9) $631 \times 39 =$



10) $404 \times 13 =$



11) $173 \times 57 =$



12) $394 \times 75 =$



Answers

1. _____

2. _____

3. _____

4. _____

5. _____

6. _____

7. _____

8. _____

9. _____

10. _____

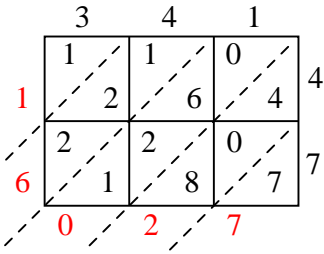
11. _____

12. _____

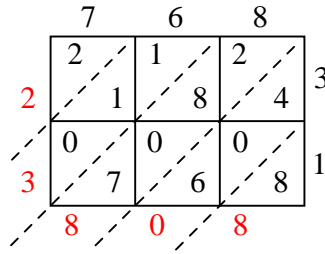


Use lattice multiplication to solve each problem.

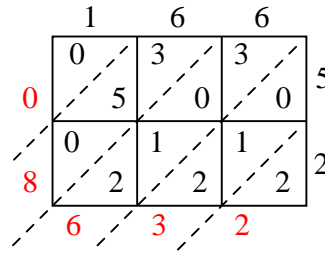
1) $341 \times 47 =$



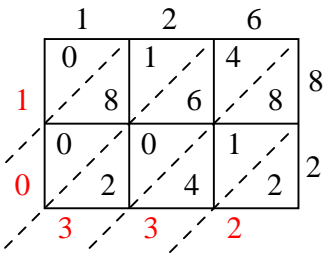
2) $768 \times 31 =$



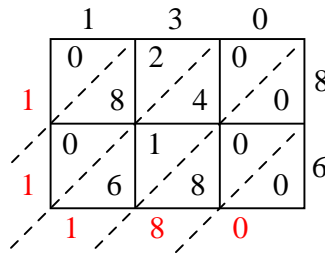
3) $166 \times 52 =$



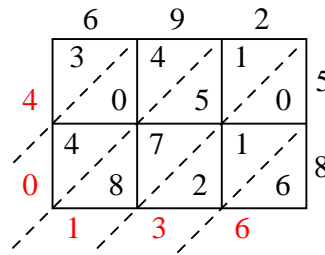
4) $126 \times 82 =$



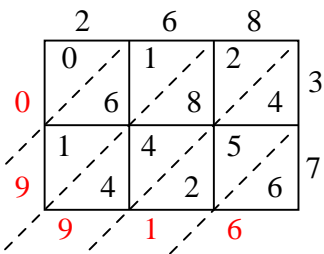
5) $130 \times 86 =$



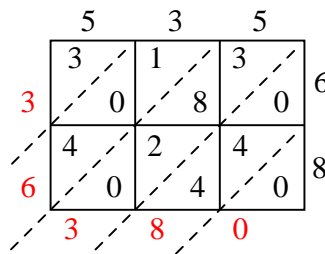
6) $692 \times 58 =$



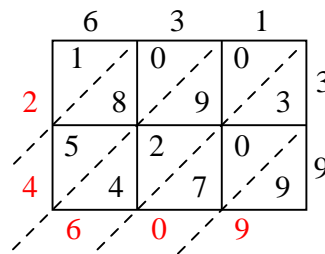
7) $268 \times 37 =$



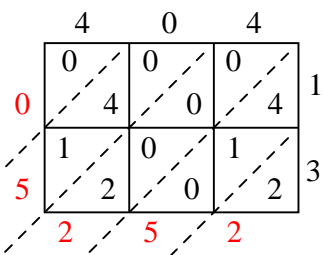
8) $535 \times 68 =$



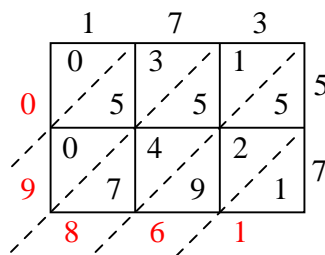
9) $631 \times 39 =$



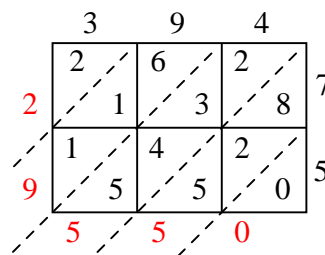
10) $404 \times 13 =$



11) $173 \times 57 =$



12) $394 \times 75 =$



Answers

1. **16,027**

2. **23,808**

3. **8,632**

4. **10,332**

5. **11,180**

6. **40,136**

7. **9,916**

8. **36,380**

9. **24,609**

10. **5,252**

11. **9,861**

12. **29,550**