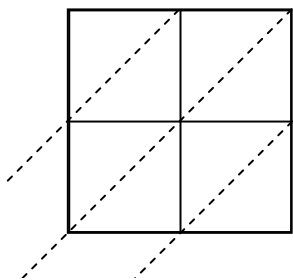


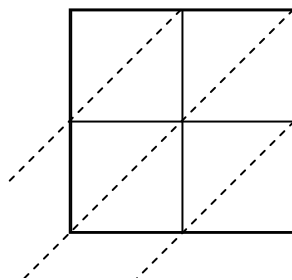


Use lattice multiplication to solve each problem.

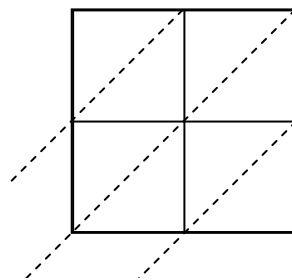
1)  $88 \times 14 =$



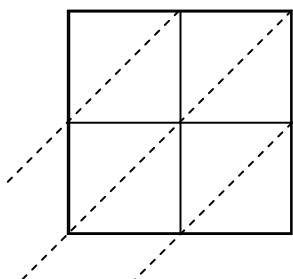
2)  $68 \times 34 =$



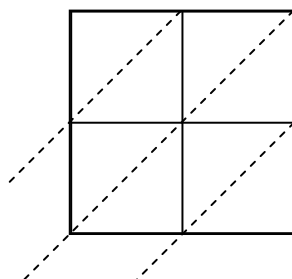
3)  $13 \times 37 =$



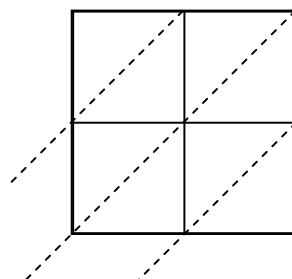
4)  $81 \times 34 =$



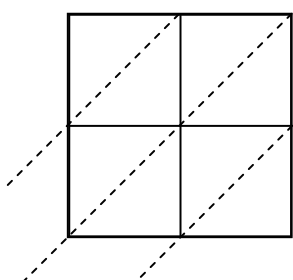
5)  $25 \times 82 =$



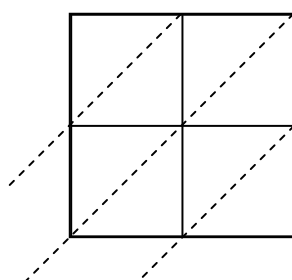
6)  $44 \times 99 =$



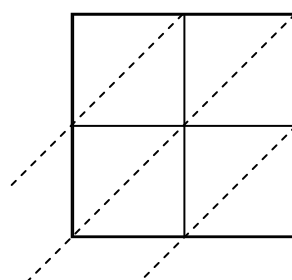
7)  $20 \times 70 =$



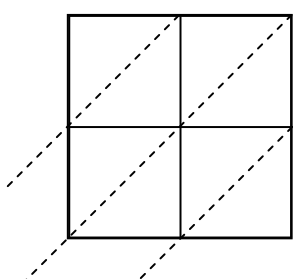
8)  $34 \times 98 =$



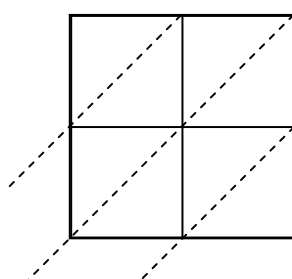
9)  $11 \times 53 =$



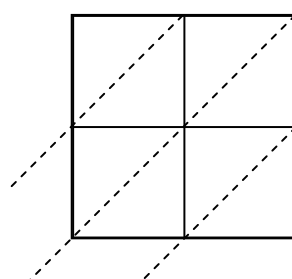
10)  $80 \times 53 =$



11)  $14 \times 75 =$



12)  $15 \times 51 =$



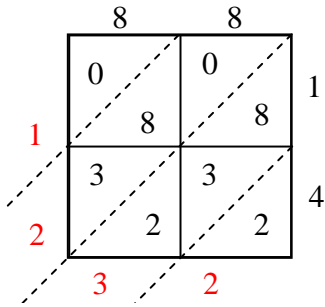
Answers

1. \_\_\_\_\_
2. \_\_\_\_\_
3. \_\_\_\_\_
4. \_\_\_\_\_
5. \_\_\_\_\_
6. \_\_\_\_\_
7. \_\_\_\_\_
8. \_\_\_\_\_
9. \_\_\_\_\_
10. \_\_\_\_\_
11. \_\_\_\_\_
12. \_\_\_\_\_

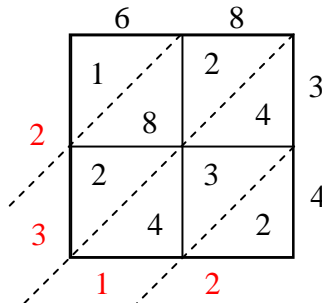


Use lattice multiplication to solve each problem.

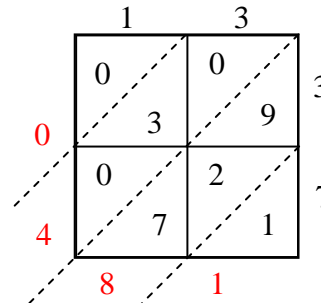
1)  $88 \times 14 =$



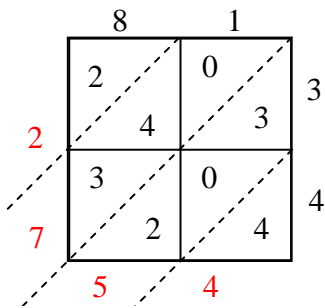
2)  $68 \times 34 =$



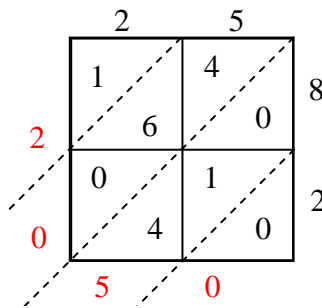
3)  $13 \times 37 =$



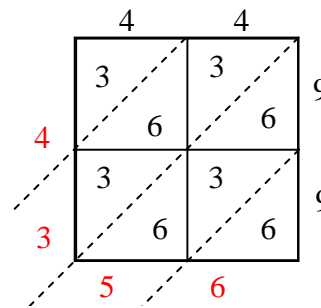
4)  $81 \times 34 =$



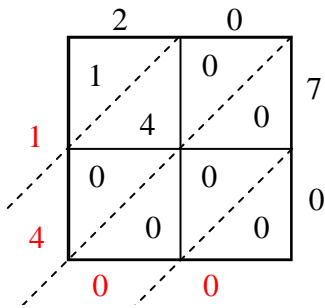
5)  $25 \times 82 =$



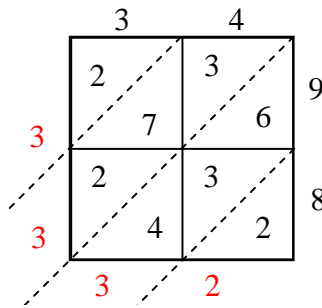
6)  $44 \times 99 =$



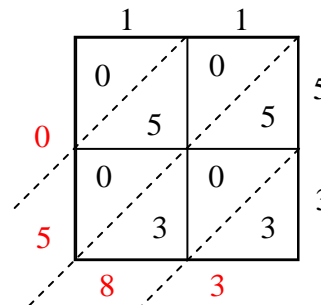
7)  $20 \times 70 =$



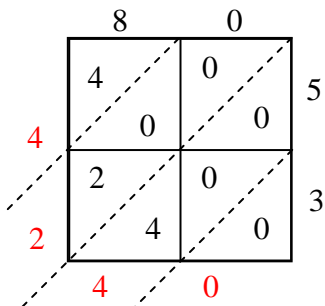
8)  $34 \times 98 =$



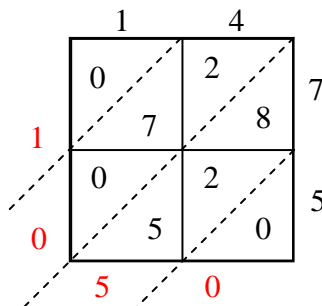
9)  $11 \times 53 =$



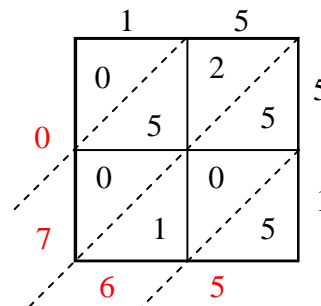
10)  $80 \times 53 =$



11)  $14 \times 75 =$



12)  $15 \times 51 =$



Answers

1. **1,232**

2. **2,312**

3. **481**

4. **2,754**

5. **2,050**

6. **4,356**

7. **1,400**

8. **3,332**

9. **583**

10. **4,240**

11. **1,050**

12. **765**