



Use lattice multiplication to solve each problem.

1)  $35 \times 11 =$



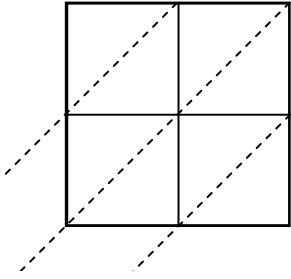
2)  $41 \times 55 =$



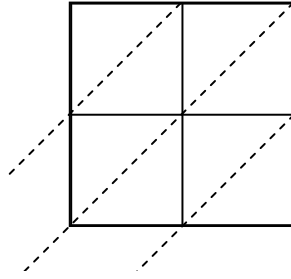
3)  $35 \times 39 =$



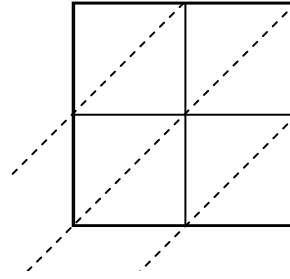
4)  $77 \times 58 =$



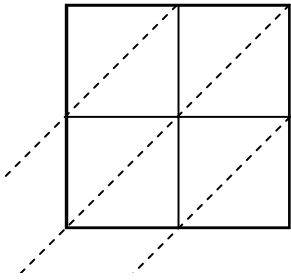
5)  $62 \times 51 =$



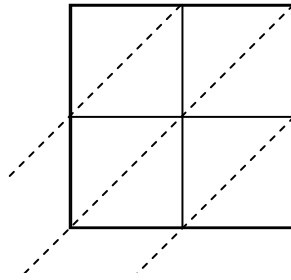
6)  $68 \times 18 =$



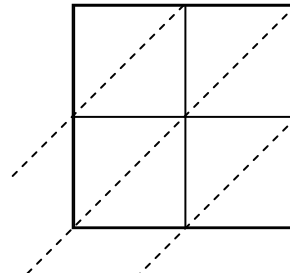
7)  $60 \times 32 =$



8)  $39 \times 90 =$



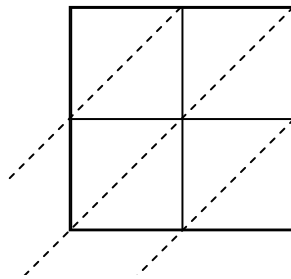
9)  $31 \times 95 =$



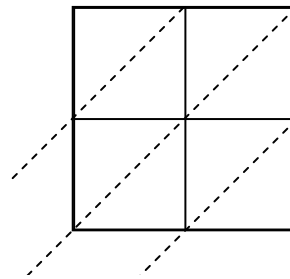
10)  $46 \times 83 =$



11)  $59 \times 59 =$



12)  $36 \times 62 =$



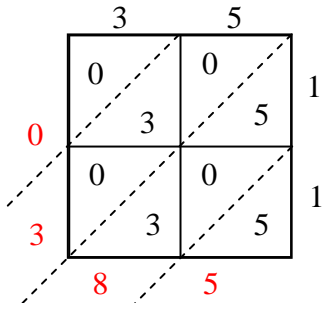
**Answers**

1. \_\_\_\_\_
2. \_\_\_\_\_
3. \_\_\_\_\_
4. \_\_\_\_\_
5. \_\_\_\_\_
6. \_\_\_\_\_
7. \_\_\_\_\_
8. \_\_\_\_\_
9. \_\_\_\_\_
10. \_\_\_\_\_
11. \_\_\_\_\_
12. \_\_\_\_\_

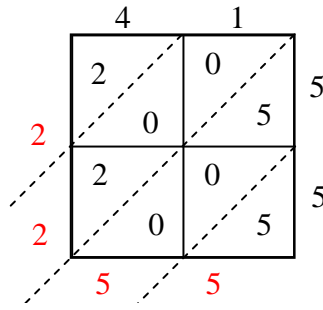


Use lattice multiplication to solve each problem.

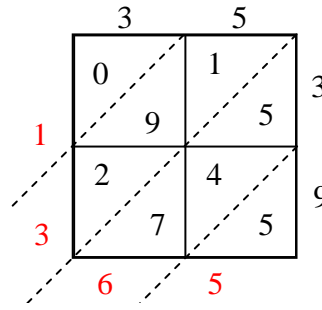
1)  $35 \times 11 =$



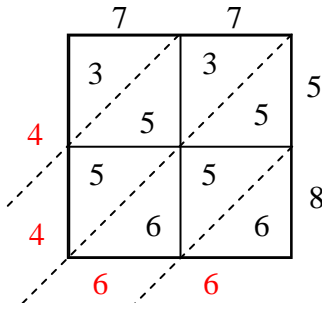
2)  $41 \times 55 =$



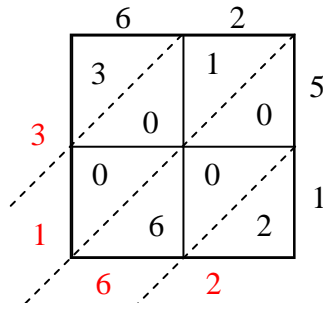
3)  $35 \times 39 =$



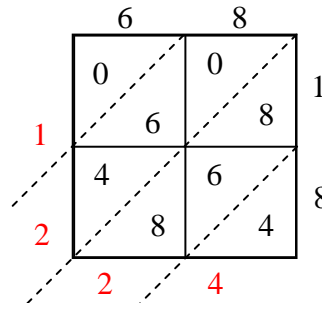
4)  $77 \times 58 =$



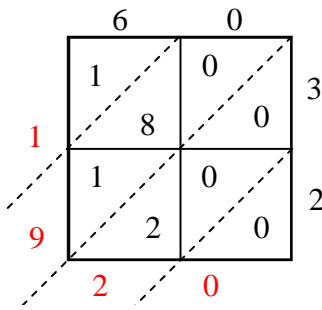
5)  $62 \times 51 =$



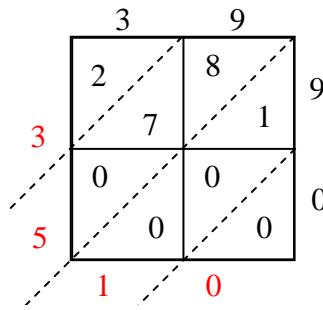
6)  $68 \times 18 =$



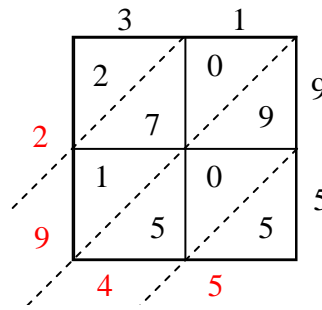
7)  $60 \times 32 =$



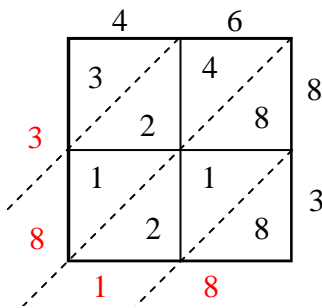
8)  $39 \times 90 =$



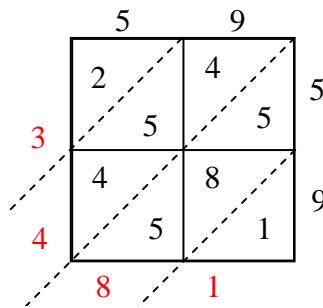
9)  $31 \times 95 =$



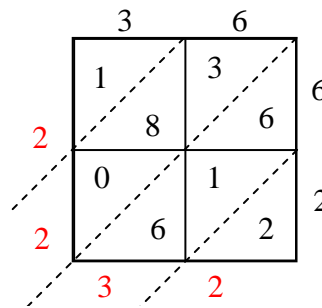
10)  $46 \times 83 =$



11)  $59 \times 59 =$



12)  $36 \times 62 =$



Answers

1. **385**

2. **2,255**

3. **1,365**

4. **4,466**

5. **3,162**

6. **1,224**

7. **1,920**

8. **3,510**

9. **2,945**

10. **3,818**

11. **3,481**

12. **2,232**