



Solve each problem.

Answers

- 1) Gwen spent \$6.92 on a movie ticket. She gave the cashier the money shown. How much change should she get back?



1. _____

2. _____

3. _____

- 2) Victor spent \$8.05 buying some new toys. He bought them using the money shown. How much change should he get back?



4. _____

5. _____

6. _____


- 3) At the fair Janet spent \$17.24 buying fair food. She gave the cashier the money shown. How much change should she get back?



- 4) George spent \$17.07 on candy at the mall. He gave the cashier the money shown. How much change should he get back?



- 5) Carol bought a new board game for \$12.24. She gave the cashier the money shown. How much change should she get back?



- 6) Edward bought \$12.97 worth of groceries. He gave the cashier the money shown. How much change should he get back?





Solve each problem.

- 1) Gwen spent \$6.92 on a movie ticket. She gave the cashier the money shown. How much change should she get back?




<u>Answers</u>	
1.	\$14.08
2.	\$2.05
3.	\$0.10
4.	\$2.93
5.	\$0.10
6.	\$7.03

- 2) Victor spent \$8.05 buying some new toys. He bought them using the money shown. How much change should he get back?




- 3) At the fair Janet spent \$17.24 buying fair food. She gave the cashier the money shown. How much change should she get back?



- 4) George spent \$17.07 on candy at the mall. He gave the cashier the money shown. How much change should he get back?



- 5) Carol bought a new board game for \$12.24. She gave the cashier the money shown. How much change should she get back?



- 6) Edward bought \$12.97 worth of groceries. He gave the cashier the money shown. How much change should he get back?

