





Determine the amount of money shown.



Answers

1. _____

2. _____

3. _____

4. _____

5. _____

6. _____

7. _____


8. _____

9. _____

10. _____



Determine the amount of money shown.



Answers

1. \$0.81

2. \$0.95

3. \$0.98

4. \$0.99

5. \$0.96

6. \$0.92

7. \$0.98

8. \$0.99

9. \$0.98

10. \$0.68