




Use the units provided to measure the width of each of the bars.



Answers

1. _____

2. _____

3. _____

4. _____

5. _____

6. _____

7. _____


8. _____

9. _____

10. _____



Use the units provided to measure the width of each of the bars.



Answers

1. 2

2. 1

3. 15

4. 4

5. 12

6. 9


7. 8

8. 6

9. 11

10. 14

Cut out and use the units shown to measure the bars on the previous page.






Use the units provided to measure the width of each of the bars.

Answers



1. _____



2. _____



3. _____



4. _____



5. _____




6. _____



7. _____



8. _____



9. _____



10. _____



Use the units provided to measure the width of each of the bars.



Answers

1. 10

2. 1

3. 9

4. 2

5. 4

6. 3


7. 12

8. 7

9. 11

10. 6

Cut out and use the units shown to measure the bars on the previous page.





Use the units provided to measure the width of each of the bars.



Answers

1. _____

2. _____

3. _____

4. _____

5. _____

6. _____

7. _____


8. _____

9. _____

10. _____



Use the units provided to measure the width of each of the bars.



Answers

1. 9

2. 13

3. 2

4. 4

5. 1

6. 8


7. 3

8. 5

9. 14

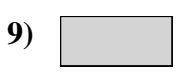
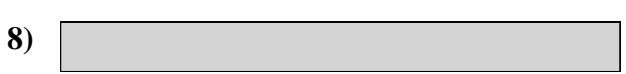

10. 12

Cut out and use the units shown to measure the bars on the previous page.





Use the units provided to measure the width of each of the bars.



Answers

1. _____

2. _____

3. _____

4. _____

5. _____

6. _____

7. _____


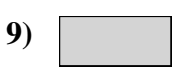
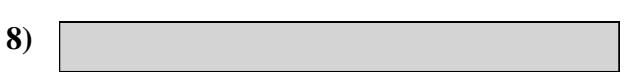


8. _____

9. _____

10. _____



Use the units provided to measure the width of each of the bars.



Answers

1. 8

2. 2

3. 3

4. 10

5. 7

6. 9


7. 4

8. 5

9. 1

10. 6

Cut out and use the units shown to measure the bars on the previous page.






Use the units provided to measure the width of each of the bars.

Answers



1. _____



2. _____



3. _____



4. _____




5. _____




6. _____




7. _____



8. _____





9. _____



10. _____



Use the units provided to measure the width of each of the bars.



Answers

1. 10

2. 1

3. 4

4. 3

5. 6

6. 8


7. 9

8. 11

9. 5

10. 13

Cut out and use the units shown to measure the bars on the previous page.





Use the units provided to measure the width of each of the bars.



Answers

1. _____

2. _____

3. _____

4. _____

5. _____

6. _____

7. _____

8. _____

9. _____

10. _____



Use the units provided to measure the width of each of the bars.



Answers

1. 1

2. 7

3. 11

4. 8

5. 2

6. 14


7. 12

8. 6

9. 10


10. 5

Cut out and use the units shown to measure the bars on the previous page.





Use the units provided to measure the width of each of the bars.



Answers

1. _____

2. _____

3. _____

4. _____

5. _____

6. _____

7. _____






8. _____

9. _____

10. _____



Use the units provided to measure the width of each of the bars.



Answers

1. 5

2. 10

3. 13

4. 1

5. 11

6. 15


7. 8

8. 14

9. 6

10. 9

Cut out and use the units shown to measure the bars on the previous page.





Use the units provided to measure the width of each of the bars.

Answers



1. _____



2. _____



3. _____



4. _____



5. _____



6. _____



7. _____



8. _____



9. _____



10. _____



Use the units provided to measure the width of each of the bars.



Answers

1. 5

2. 6

3. 4

4. 3

5. 10

6. 2


7. 1

8. 8

9. 7

10. 9

Cut out and use the units shown to measure the bars on the previous page.





Use the units provided to measure the width of each of the bars.



Answers

1. _____

2. _____

3. _____

4. _____

5. _____

6. _____

7. _____

8. _____

9. _____

10. _____



Use the units provided to measure the width of each of the bars.



Answers

1. 7

2. 3

3. 9

4. 1

5. 8

6. 10

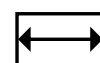
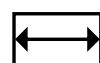
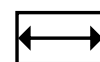
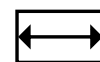
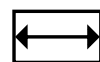
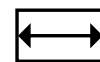
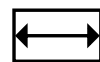
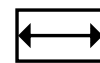
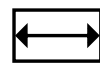
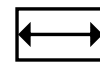
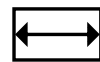
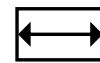
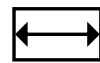
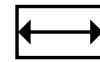
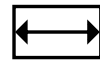
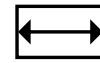
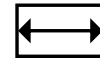
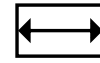
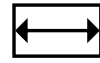
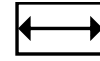
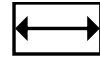
7. 4

8. 2

9. 11

10. 5

Cut out and use the units shown to measure the bars on the previous page.





Use the units provided to measure the width of each of the bars.



Answers

1. _____

2. _____

3. _____

4. _____

5. _____

6. _____

7. _____


8. _____

9. _____

10. _____



Use the units provided to measure the width of each of the bars.



Answers

1. 10

2. 1

3. 8

4. 7

5. 4

6. 3

7. 2

8. 9

9. 11

10. 6

Cut out and use the units shown to measure the bars on the previous page.

