



Determine which letter best represents the length / height.

**Answers**

**Millimeter (mm)**

**Centimeter (cm)**

**Meter (m)**


**Kilometer (km)**

A millimeter is about the thickness of a credit card.


10 mm = 1 cm.  
The metal portion of a pencil is about 1 cm. A ruler is about 30 centimeters.

100 cm = 1 m  
From the floor to a door knob is about 1 meter.

1,000 m = 1 km  
Most major roads are at least a kilometer long.



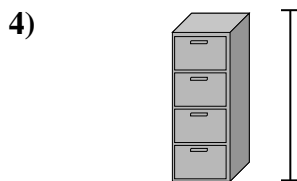
- Notebook Paper  
A. 15 centimeters  
B. 25 centimeters  
C. 60 centimeters  
D. 1 meter




- Mountain  
A. 9 meters  
B. 3 kilometers  
C. 60 centimeters  
D. 700 millimeters



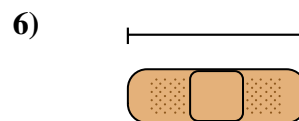
- Pen  
A. 5 meters  
B. 30 millimeters  
C. 12 centimeters  
D. 30 centimeters




- File Cabinet  
A. 30 millimeters  
B. 60 centimeters  
C. 1.5 millimeters  
D. 30 centimeters



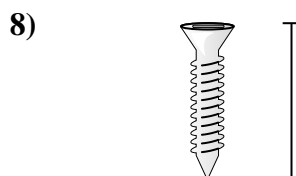
- Frog  
A. 4 millimeters  
B. 60 centimeters  
C. 8 centimeters  
D. 20 centimeters



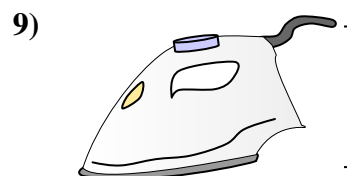
- Bandage  
A. 9 centimeters  
B. 3 kilometers  
C. 60 centimeters  
D. 1 meter



- Bug  
A. 30 centimeters  
B. 7 millimeters  
C. 5 centimeters  
D. 10 centimeters



- Screw  
A. 3 centimeters  
B. 25 centimeters  
C. 20 centimeters  
D. 1 meter



- Clothes Iron  
A. 40 centimeters  
B. 15 centimeters  
C. 60 centimeters  
D. 240 centimeters

- 1. \_\_\_\_\_
- 2. \_\_\_\_\_
- 3. \_\_\_\_\_
- 4. \_\_\_\_\_
- 5. \_\_\_\_\_
- 6. \_\_\_\_\_
- 7. \_\_\_\_\_
- 8. \_\_\_\_\_
- 9. \_\_\_\_\_



Determine which letter best represents the length / height.

**Answers**

**Millimeter (mm)**

**Centimeter (cm)**

**Meter (m)**


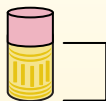
**Kilometer (km)**

A millimeter is about the thickness of a credit card.


10 mm = 1 cm.  
The metal portion of a pencil is about 1 cm. A ruler is about 30 centimeters.

100 cm = 1 m  
From the floor to a door knob is about 1 meter.

1,000 m = 1 km  
Most major roads are at least a kilometer long.



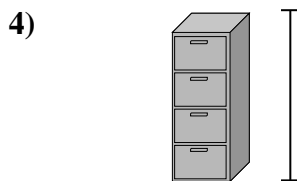
- Notebook Paper  
A. 15 centimeters  
B. 25 centimeters  
C. 60 centimeters  
D. 1 meter




- Mountain  
A. 9 meters  
B. 3 kilometers  
C. 60 centimeters  
D. 700 millimeters



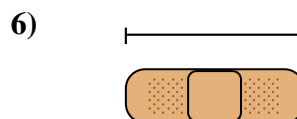
- Pen  
A. 5 meters  
B. 30 millimeters  
C. 12 centimeters  
D. 30 centimeters



- File Cabinet  
A. 30 millimeters  
B. 60 centimeters  
C. 1.5 millimeters  
D. 30 centimeters



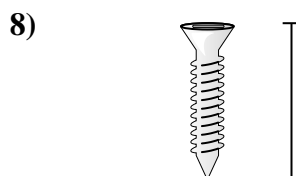
- Frog  
A. 4 millimeters  
B. 60 centimeters  
C. 8 centimeters  
D. 20 centimeters



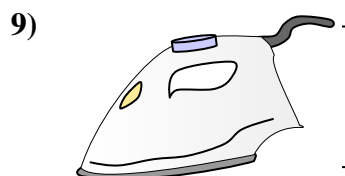
- Bandage  
A. 9 centimeters  
B. 3 kilometers  
C. 60 centimeters  
D. 1 meter



- Bug  
A. 30 centimeters  
B. 7 millimeters  
C. 5 centimeters  
D. 10 centimeters



- Screw  
A. 3 centimeters  
B. 25 centimeters  
C. 20 centimeters  
D. 1 meter



- Clothes Iron  
A. 40 centimeters  
B. 15 centimeters  
C. 60 centimeters  
D. 240 centimeters

1.   **B**    
2.   **B**    
3.   **C**    
4.   **C**    
5.   **C**    
6.   **A**    
7.   **B**    
8.   **A**    
9.   **B**