



Determine which letter best represents the length / height.

Answers

Millimeter (mm)

Centimeter (cm)

Meter (m)


Kilometer (km)

A millimeter is about the thickness of a credit card.


10 mm = 1 cm.
The metal portion of a pencil is about 1 cm. A ruler is about 30 centimeters.

100 cm = 1 m
From the floor to a door knob is about 1 meter.

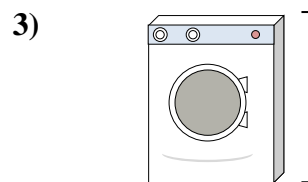
1,000 m = 1 km
Most major roads are at least a kilometer long.



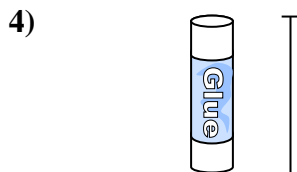
Notebook Paper
A. 60 centimeters
B. 15 centimeters
C. 1 meter
D. 25 centimeters




Gallon of Milk
A. 3 meters
B. 20 centimeters
C. 10 millimeters
D. 8 centimeters



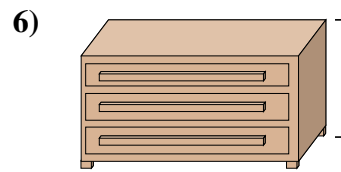
Washing Machine
A. 10 centimeters
B. 30 centimeters
C. 1 meter
D. 2 meters




Glue Stick
A. 30 centimeters
B. 10 centimeters
C. 6 kilometers
D. 25 centimeters



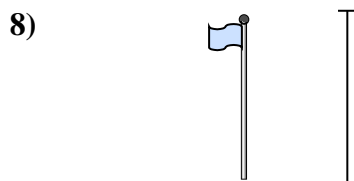
Elephant
A. 45 centimeters
B. 4 meters
C. 150 millimeters
D. 2 kilometers



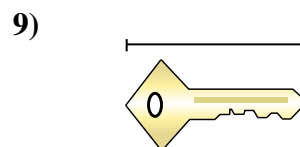
Dresser
A. 45 centimeters
B. 30 centimeters
C. 90 centimeters
D. 3 meters



Bowling Ball Height
A. 10 centimeters
B. 1 meter
C. 25 centimeters
D. 305 centimeters



Flag Pole
A. 300 centimeters
B. 9 meters
C. 2 meters
D. 2 kilometers



Key
A. 2 meters
B. 5 centimeters
C. 15 centimeters
D. 150 centimeters

1. _____
2. _____
3. _____
4. _____
5. _____
6. _____
7. _____
8. _____
9. _____



Determine which letter best represents the length / height.

Millimeter (mm)

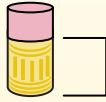
A millimeter is about the thickness of a credit card.



Centimeter (cm)

10 mm = 1 cm.

The metal portion of a pencil is about 1 cm. A ruler is about 30 centimeters.



Meter (m)

100 cm = 1 m

From the floor to a door knob is about 1 meter.



Kilometer (km)

1,000 m = 1 km

Most major roads are at least a kilometer long.



Answers

1. **D**

2. **B**

3. **C**

4. **B**


5. **B**

6. **C**


7. **C**

8. **B**

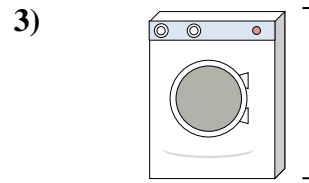
9. **B**




Notebook Paper
A. 60 centimeters
B. 15 centimeters
C. 1 meter
D. 25 centimeters




Gallon of Milk
A. 3 meters
B. 20 centimeters
C. 10 millimeters
D. 8 centimeters



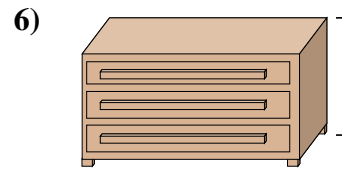
Washing Machine
A. 10 centimeters
B. 30 centimeters
C. 1 meter
D. 2 meters




Glue Stick
A. 30 centimeters
B. 10 centimeters
C. 6 kilometers
D. 25 centimeters



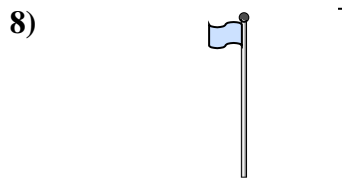
Elephant
A. 45 centimeters
B. 4 meters
C. 150 millimeters
D. 2 kilometers



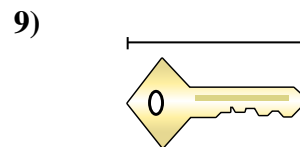
Dresser
A. 45 centimeters
B. 30 centimeters
C. 90 centimeters
D. 3 meters



Bowling Ball Height
A. 10 centimeters
B. 1 meter
C. 25 centimeters
D. 305 centimeters



Flag Pole
A. 300 centimeters
B. 9 meters
C. 2 meters
D. 2 kilometers



Key
A. 2 meters
B. 5 centimeters
C. 15 centimeters
D. 150 centimeters