






Measure the width of each block in inches and in centimeters.



**Answers**

Ex. 1 1/2 3 - 4

1. \_\_\_\_\_

2. \_\_\_\_\_

3. \_\_\_\_\_

4. \_\_\_\_\_

5. \_\_\_\_\_

6. \_\_\_\_\_


7. \_\_\_\_\_

8. \_\_\_\_\_

9. \_\_\_\_\_



Measure the width of each block in inches and in centimeters.



**Answers**

Ex. 1 1/2 3 - 4

1. 2 5 - 6

2. 1 2 - 3

3. 4 10 - 11

4. 3 7 - 8

5. 5 1/2 13 - 14

6. 4 1/2 11 - 12

7. 0 1/2 1 - 2

8. 5 12 - 13

9. 2 1/2 6 - 7