




Measure the width of each block in inches and in centimeters.

Ex)



**Answers**

Ex. 1 2-3

1)



1. \_\_\_\_\_

2. \_\_\_\_\_

2)



3. \_\_\_\_\_

4. \_\_\_\_\_


3)



5. \_\_\_\_\_

6. \_\_\_\_\_

4)



7. \_\_\_\_\_

8. \_\_\_\_\_

5)



9. \_\_\_\_\_

6)



7)



8)




9)





Measure the width of each block in inches and in centimeters.



**Answers**

Ex. 1    2 - 3

1. 1 1/2    3 - 4

2. 5    12 - 13

3. 5 1/2    13 - 14

4. 0 1/2    1 - 2

5. 3    7 - 8

6. 2    5 - 6

7. 4    10 - 11

8. 4 1/2    11 - 12

9. 3 1/2    8 - 9