



Measure the width and height of each block in inches and in centimeters.

Ex)



**Answers**

Ex. 5 1/2 0 1/2 **14** **1.3**

1. \_\_\_\_\_

2. \_\_\_\_\_


3. \_\_\_\_\_

4. \_\_\_\_\_


1)



2)



3)



4)





Measure the width and height of each block in inches and in centimeters.

Ex)



Answers

Ex. 5 1/2 0 1/2 **14** **1.3**

1. 2 1/2 0 1/2 **6.4** **1.3**

2. **5** **1** 12.7 2.5


3. 1 1/2 1 1/2 **3.8** **3.8**

4. **4** 0 1/2 10.2 1.3


1)



2)



3)



4)

