



Measure the width and height of each block in inches and in centimeters.

Answers

Ex)



Ex. 2 1/2 1 6.4 2.5


1. _____

2. _____


3. _____

4. _____


1)



2)



3)



4)





Measure the width and height of each block in inches and in centimeters.

Ex)



Answers

Ex. $2\frac{1}{2}$ 1 6.4 2.5

1. $4\frac{1}{2}$ $1\frac{1}{2}$ 11.4 3.8

2. 3 1 7.6 2.5

3. 5 $1\frac{1}{2}$ 12.7 3.8

4. 2 $0\frac{1}{2}$ 5.1 1.3


1)



2)



3)




4)






Measure the width and height of each block in inches and in centimeters.


Ex)



1)




2)



3)



4)



Answers

Ex. 1 1 1/2 2.5 3.8

1. _____

2. _____


3. _____

4. _____



Measure the width and height of each block in inches and in centimeters.

Ex)



Answers

Ex. 1 1 1/2 2.5 3.8


1. 1 1/2 1 1/2 3.8 3.8

2. 5 1 12.7 2.5


3. 5 1/2 0 1/2 14 1.3

4. 0 1/2 1 1/2 1.3 3.8

1)




2)



3)



4)





Measure the width and height of each block in inches and in centimeters.

Ex)



Answers

Ex. 4 1/2 1 11.4 2.5


1. _____

2. _____

3. _____

4. _____

1)




2)



3)



4)





Measure the width and height of each block in inches and in centimeters.

Ex)



Answers

Ex. $4\frac{1}{2}$ **1** 11.4 2.5


1. $5\frac{1}{2}$ $1\frac{1}{2}$ **14** **3.8**

2. **1** $0\frac{1}{2}$ **2.5** **1.3**

3. $1\frac{1}{2}$ $0\frac{1}{2}$ **3.8** **1.3**

4. **4** $1\frac{1}{2}$ **10.2** **3.8**

1)



2)



3)

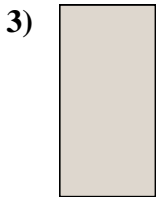



4)





Measure the width and height of each block in inches and in centimeters.



Answers

Ex. 3 1 7.6 2.5

1. _____

2. _____


3. _____

4. _____



Measure the width and height of each block in inches and in centimeters.

Ex)



Answers

Ex. 3 1 7.6 2.5

1. 5 0 1/2 12.7 1.3

2. 1 1/2 0 1/2 3.8 1.3

3. 0 1/2 1 1.3 2.5

4. 4 1/2 0 1/2 11.4 1.3

1)



2)



3)



4)





Measure the width and height of each block in inches and in centimeters.

Ex)



Answers

Ex. 3 0 1/2 7.6 1.3


1. _____

2. _____


3. _____

4. _____

1)




2)



3)


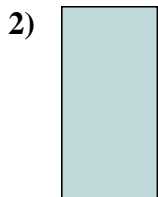


4)





Measure the width and height of each block in inches and in centimeters.



Answers

Ex. 3 0 1/2 7.6 1.3

1. 1 1/2 1 3.8 2.5

2. 0 1/2 1 1.3 2.5

3. 5 1/2 1 14 2.5

4. 1 1 1/2 2.5 3.8



Measure the width and height of each block in inches and in centimeters.

Ex)



Answers

Ex. 5 1/2 0 1/2 **14** **1.3**


1. _____

2. _____


3. _____

4. _____


1)




2)



3)



4)





Measure the width and height of each block in inches and in centimeters.

Ex)



Answers

Ex. 5 1/2 0 1/2 **14** **1.3**


1. 3 1/2 1 1/2 **8.9** **3.8**

2. **4** 0 1/2 **10.2** **1.3**


3. **5** **1** 12.7 2.5

4. **1** **1** 2.5 2.5

1)




2)



3)



4)





Measure the width and height of each block in inches and in centimeters.

Ex)



Answers

Ex. 4 0 1/2 10.2 1.3

1. _____

2. _____

3. _____

4. _____

1)




2)



3)



4)





Measure the width and height of each block in inches and in centimeters.

Ex)



Answers

Ex. 4 0 1/2 10.2 1.3


1. 0 1/2 1 1/2 1.3 3.8

2. 1 1/2 0 1/2 3.8 1.3

3. 5 1/2 0 1/2 14 1.3

4. 3 1 1/2 7.6 3.8

1)




2)



3)



4)





Measure the width and height of each block in inches and in centimeters.

Ex)



Answers

Ex. 3 1/2 0 1/2 8.9 1.3


1. _____

2. _____

3. _____

4. _____


1)




2)



3)



4)





Measure the width and height of each block in inches and in centimeters.

Ex)



Ex. 3 1/2 0 1/2 8.9 1.3


1. 1 1 1/2 2.5 3.8

2. 1 1/2 1 3.8 2.5

3. 5 1/2 1 1/2 14 3.8

4. 5 1 12.7 2.5


1)




2)



3)



4)




Answers



Measure the width and height of each block in inches and in centimeters.

Ex)



Answers

Ex. 4 1 1/2 10.2 3.8


1. _____

2. _____

3. _____

4. _____

1)




2)



3)




4)





Measure the width and height of each block in inches and in centimeters.

Ex)



Answers

Ex. 4 1 1/2 10.2 3.8


1. 2 1 1/2 5.1 3.8

2. 3 0 1/2 7.6 1.3

3. 3 1/2 1 1/2 8.9 3.8

4. 0 1/2 0 1/2 1.3 1.3

1)




2)



3)



4)





Measure the width and height of each block in inches and in centimeters.

Ex)



Answers

Ex. 1 0 1/2 2.5 1.3

1. _____

2. _____


3. _____

4. _____

1)



2)



3)



4)





Measure the width and height of each block in inches and in centimeters.

Ex)



Answers

Ex. 1 0 1/2 2.5 1.3

1. 3 1/2 0 1/2 8.9 1.3

2. 5 1/2 1 14 2.5


3. 5 1 12.7 2.5

4. 4 1/2 1 11.4 2.5

1)



2)



3)



4)

