



Measure the width and height of each block in inches and in centimeters.

Ex)



Answers

Ex. 2 1/2 1 6.4 2.5


1. _____

2. _____


3. _____

4. _____


1)



2)



3)



4)





Measure the width and height of each block in inches and in centimeters.

Ex)



Answers

Ex. $2\frac{1}{2}$ 1 6.4 2.5

1. $4\frac{1}{2}$ 1\frac{1}{2} 11.4 3.8

2. 3 1 7.6 2.5

3. 5 1\frac{1}{2} 12.7 3.8

4. 2 0\frac{1}{2} 5.1 1.3


1)



2)



3)



4)

