




Measure the width and height of each block in inches and in centimeters.

**Answers**

Ex)



Ex. 5 1/2 1 1/2 **14** **3.8**

1. \_\_\_\_\_

2. \_\_\_\_\_

3. \_\_\_\_\_

4. \_\_\_\_\_

1)




2)



3)

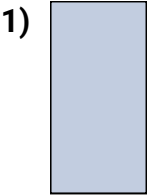



4)





Measure the width and height of each block in inches and in centimeters.



**Answers**

- Ex.  $\underline{5\frac{1}{2}}$   $\underline{1\frac{1}{2}}$  **14** **3.8**
1.  $\underline{0\frac{1}{2}}$  **1** **1.3** **2.5**
2.  $\underline{1\frac{1}{2}}$  **1** **3.8** **2.5**
3.  $\underline{3\frac{1}{2}}$  **1** **8.9** **2.5**
4. **3** **1** **7.6** **2.5**