













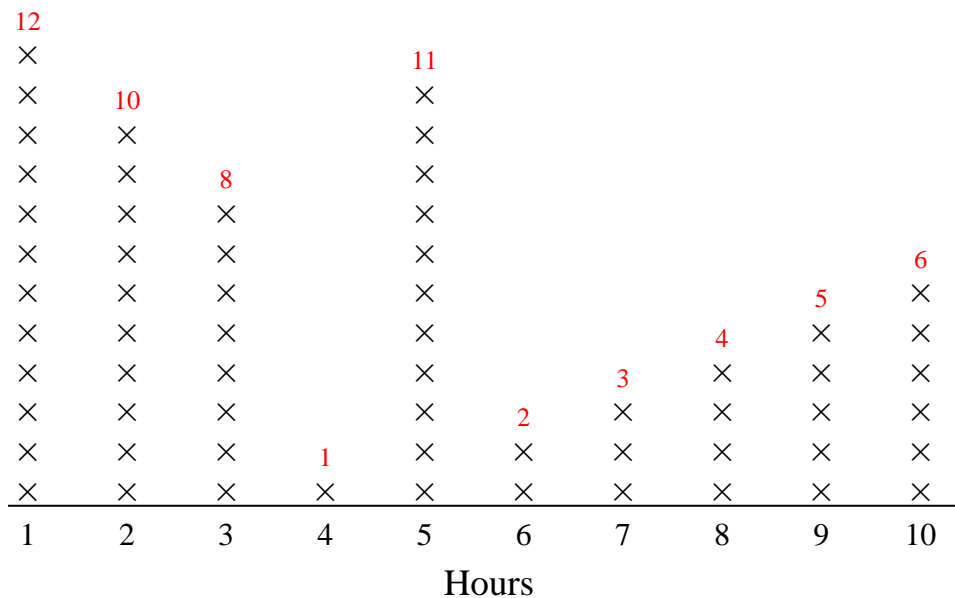








Use the line plots to answer each question.



Each x = 1 car

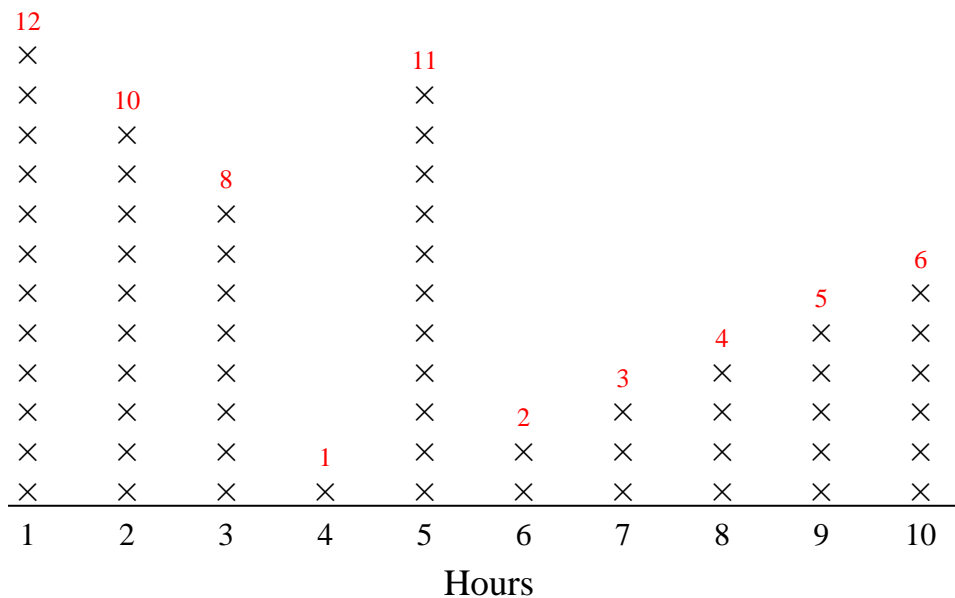
Answers

1. \_\_\_\_\_
2. \_\_\_\_\_
3. \_\_\_\_\_
4. \_\_\_\_\_
5. \_\_\_\_\_
6. \_\_\_\_\_
7. \_\_\_\_\_
8. \_\_\_\_\_
9. \_\_\_\_\_
10. \_\_\_\_\_
11. \_\_\_\_\_

- 1) How many hours did she sell fewer than 3 cars?
- 2) How many cars did she sell in hour 2?
- 3) How many hours did she sell more than 5 cars?
- 4) Which hours (if any) did she sell more than 8 cars?
- 5) She sold the most cars which hour?
- 6) What is the combined number of cars she sold in hour 10 and in hour 8?
- 7) Did she sell more cars in hour 7 or in hour 6?
- 8) Which hour did she sell the fewest cars?
- 9) Which hour did she sell exactly 1 cars?
- 10) Did she sell fewer cars in hour 6 or in hour 10?
- 11) What is the difference in the number of cars she sold in hour 5 and the number she sold in hour 3?



Use the line plots to answer each question.



Each x = 1 car

Answers

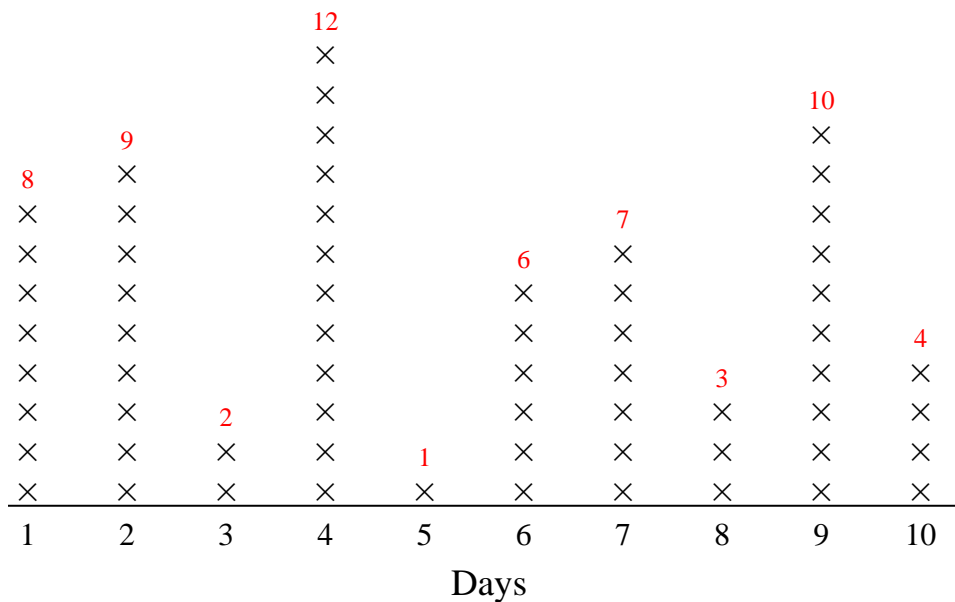
1. 2
2. 10
3. 5
4. 1,2,5
5. 1
6. 10
7. 7
8. 4
9. 4
10. 6
11. 3

- 1) How many hours did she sell fewer than 3 cars?
- 2) How many cars did she sell in hour 2?
- 3) How many hours did she sell more than 5 cars?
- 4) Which hours (if any) did she sell more than 8 cars?
- 5) She sold the most cars which hour?
- 6) What is the combined number of cars she sold in hour 10 and in hour 8?
- 7) Did she sell more cars in hour 7 or in hour 6?
- 8) Which hour did she sell the fewest cars?
- 9) Which hour did she sell exactly 1 cars?
- 10) Did she sell fewer cars in hour 6 or in hour 10?
- 11) What is the difference in the number of cars she sold in hour 5 and the number she sold in hour 3?





Use the line plots to answer each question.



Each x = 1 box

Answers

1. 5
2. 6
3. 4
4. 9
5. 3
6. 5
7. 6
8. 1,2,4,6,7,9
9. 6
10. 1
11. 1

- 1) How many days did he sell fewer than 7 boxes?
- 2) Did he sell fewer boxes on day 7 or day 6?
- 3) He sold the greatest number of boxes on which day?
- 4) How many days did he sell more than 1 boxes?
- 5) What is the combined amount of boxes he sold on day 5 and on day 3?
- 6) He sold the least amount of chocolate on which day?
- 7) Which day did he sell exactly 6 boxes?
- 8) Which days (if any) did he sell more than 5 boxes?
- 9) Did he sell more boxes on day 10 or day 6?
- 10) How many boxes did he sell on day 5?
- 11) What is the difference in the number of boxes he sold on day 5 and the number he sold on day 3?

















