





Create and label the line plot using the set of numbers provided.

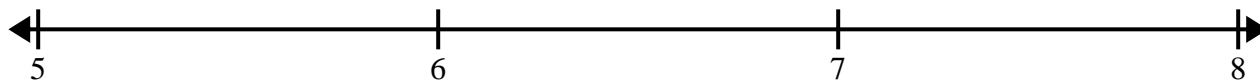
- 1) $3\frac{1}{8}$ $3\frac{2}{8}$ $3\frac{5}{8}$ $3\frac{5}{8}$ $3\frac{4}{8}$ 3 $4\frac{1}{8}$ 5
 $3\frac{2}{8}$ $5\frac{2}{8}$ 5 $5\frac{2}{8}$ 5 $4\frac{6}{8}$ $3\frac{5}{8}$ $5\frac{3}{8}$



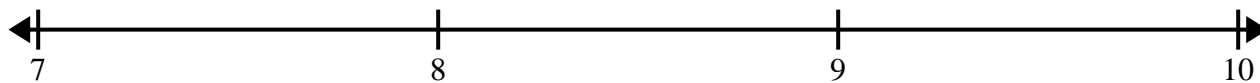
- 2) 4 $5\frac{1}{2}$ $3\frac{1}{2}$ $5\frac{1}{2}$ 3 3 $4\frac{1}{2}$ $3\frac{1}{2}$
 3 5 $3\frac{1}{2}$ 5 4 $4\frac{1}{2}$ 5 $5\frac{1}{2}$




- 3) $7\frac{6}{8}$ 5 $6\frac{3}{8}$ $5\frac{3}{8}$ $7\frac{3}{8}$ $7\frac{2}{8}$ $6\frac{6}{8}$ 5
 $6\frac{4}{8}$ $7\frac{5}{8}$ $6\frac{3}{8}$ $7\frac{2}{8}$ $6\frac{3}{8}$ $7\frac{1}{8}$ $6\frac{7}{8}$ $7\frac{5}{8}$



- 4) $7\frac{2}{4}$ $9\frac{3}{4}$ $7\frac{1}{4}$ $8\frac{2}{4}$ 9 $9\frac{1}{4}$ $9\frac{3}{4}$ 7
 $8\frac{3}{4}$ $7\frac{3}{4}$ 9 9 $8\frac{3}{4}$ 7 $7\frac{2}{4}$ $7\frac{2}{4}$



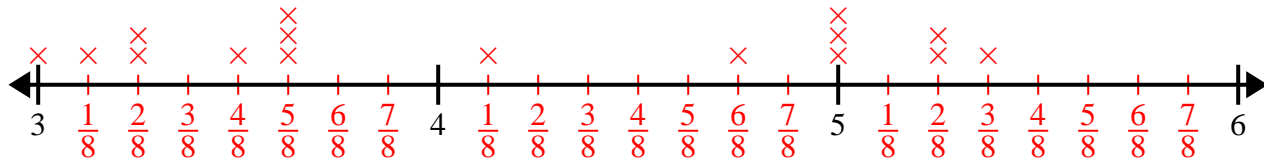
- 5) 8 7 $7\frac{1}{4}$ $8\frac{1}{4}$ 8 $9\frac{2}{4}$ $7\frac{2}{4}$ $8\frac{2}{4}$
 $7\frac{3}{4}$ $9\frac{3}{4}$ $7\frac{3}{4}$ $8\frac{2}{4}$ $7\frac{2}{4}$ $7\frac{2}{4}$ $7\frac{3}{4}$ 9



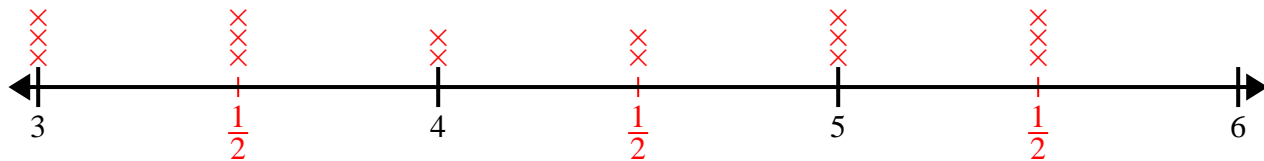


Create and label the line plot using the set of numbers provided.

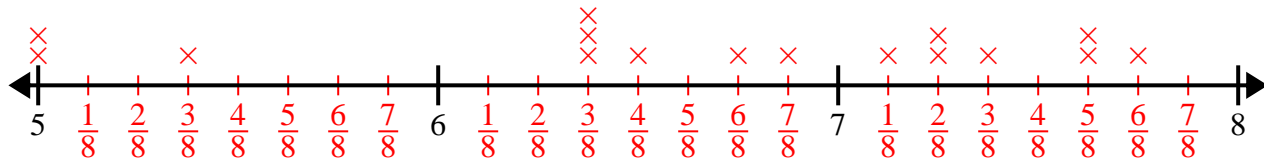
- 1) $3\frac{1}{8}$ $3\frac{2}{8}$ $3\frac{5}{8}$ $3\frac{5}{8}$ $3\frac{4}{8}$ 3 $4\frac{1}{8}$ 5
 $3\frac{2}{8}$ $5\frac{2}{8}$ 5 $5\frac{2}{8}$ 5 $4\frac{6}{8}$ $3\frac{5}{8}$ $5\frac{3}{8}$



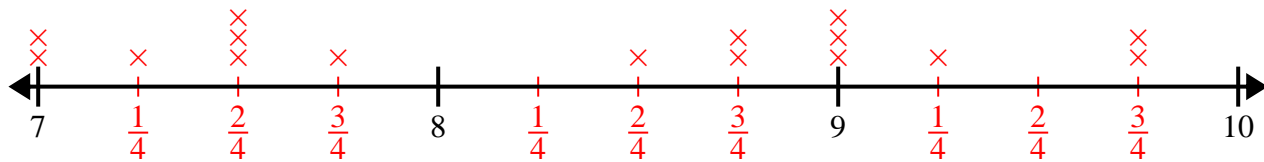
- 2) 4 $5\frac{1}{2}$ $3\frac{1}{2}$ $5\frac{1}{2}$ 3 3 $4\frac{1}{2}$ $3\frac{1}{2}$
 3 5 $3\frac{1}{2}$ 5 4 $4\frac{1}{2}$ 5 $5\frac{1}{2}$



- 3) $7\frac{6}{8}$ 5 $6\frac{3}{8}$ $5\frac{3}{8}$ $7\frac{3}{8}$ $7\frac{2}{8}$ $6\frac{6}{8}$ 5
 $6\frac{4}{8}$ $7\frac{5}{8}$ $6\frac{3}{8}$ $7\frac{2}{8}$ $6\frac{3}{8}$ $7\frac{1}{8}$ $6\frac{7}{8}$ $7\frac{5}{8}$



- 4) $7\frac{2}{4}$ $9\frac{3}{4}$ $7\frac{1}{4}$ $8\frac{2}{4}$ 9 $9\frac{1}{4}$ $9\frac{3}{4}$ 7
 $8\frac{3}{4}$ $7\frac{3}{4}$ 9 9 $8\frac{3}{4}$ 7 $7\frac{2}{4}$ $7\frac{2}{4}$



- 5) 8 7 $7\frac{1}{4}$ $8\frac{1}{4}$ 8 $9\frac{2}{4}$ $7\frac{2}{4}$ $8\frac{2}{4}$
 $7\frac{3}{4}$ $9\frac{3}{4}$ $7\frac{3}{4}$ $8\frac{2}{4}$ $7\frac{2}{4}$ $7\frac{2}{4}$ $7\frac{3}{4}$ 9

