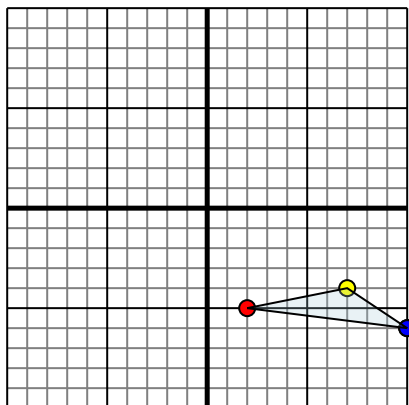




Reflect each shape as described.

1)

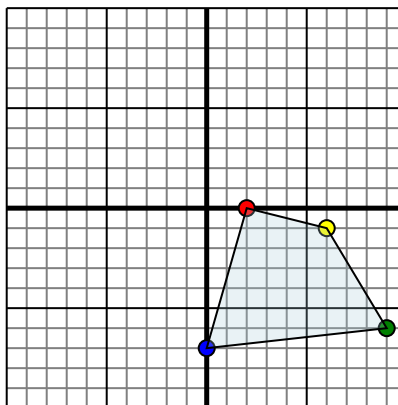


The shape above has the following coordinates:

- A. (2,-5)
- B. (7,-4)
- C. (10,-6)

Reflect the shape over the Y axis.

2)

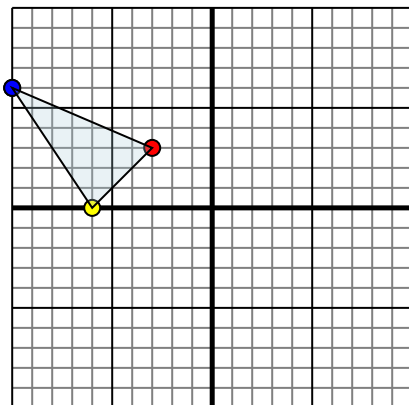


The shape above has the following coordinates:

- A. (2,0)
- B. (6,-1)
- C. (9,-6)
- D. (0,-7)

Reflect the shape over the X axis.

3)

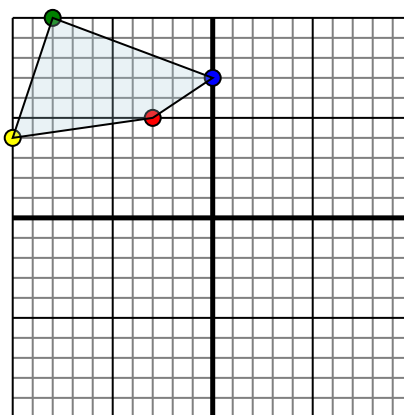


The shape above has the following coordinates:

- A. (-3,3)
- B. (-6,0)
- C. (-10,6)

Reflect the shape over the X axis.

4)



The shape above has the following coordinates:

- A. (-3,5)
- B. (-10,4)
- C. (-8,10)
- D. (0,7)

Reflect the shape over the Y axis.

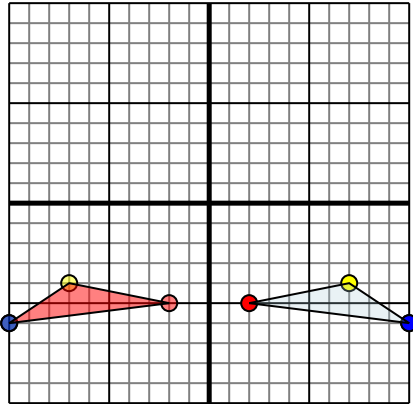
Answers

- 1. _____
- 2. _____
- 3. _____
- 4. _____



Reflect each shape as described.

1)

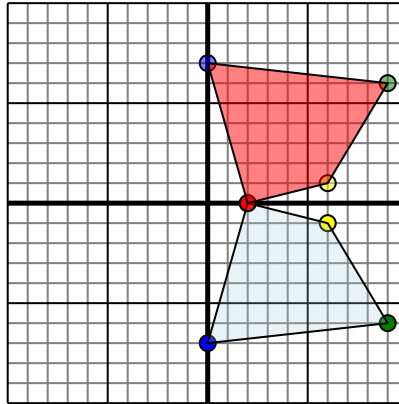


The shape above has the following coordinates:

- A. (2,-5)
- B. (7,-4)
- C. (10,-6)

Reflect the shape over the Y axis.

2)

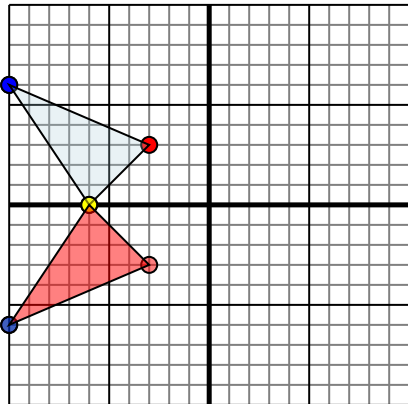


The shape above has the following coordinates:

- A. (2,0)
- B. (6,-1)
- C. (9,-6)
- D. (0,-7)

Reflect the shape over the X axis.

3)

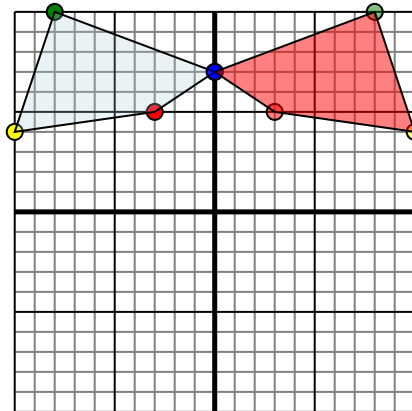


The shape above has the following coordinates:

- A. (-3,3)
- B. (-6,0)
- C. (-10,6)

Reflect the shape over the X axis.

4)



The shape above has the following coordinates:

- A. (-3,5)
- B. (-10,4)
- C. (-8,10)
- D. (0,7)

Reflect the shape over the Y axis.

Answers

1. -2,-5 -7,-4 -10,-6 Graph
2. 2,0 6,1 9,6 0,7 Graph
3. -3,-3 -6,0 -10,-6 Graph
4. 3,5 10,4 8,10 0,7 Graph