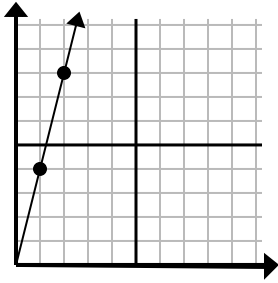




Determine which choice represents a point on the line if it were to continue.

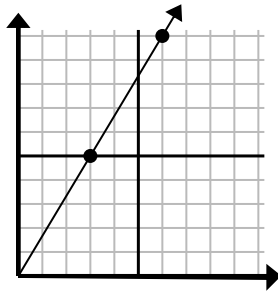
Answers

1)



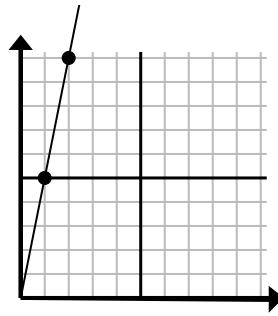
- A. (6, 24)
- B. (3, 12)
- C. (5, 20)
- D. (4, 6)

2)



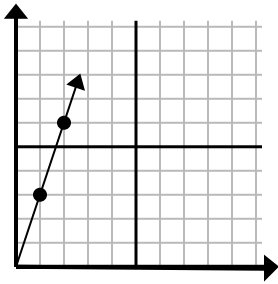
- A. (10, 6)
- B. (21, 35)
- C. (12, 20)
- D. (9, 15)

3)



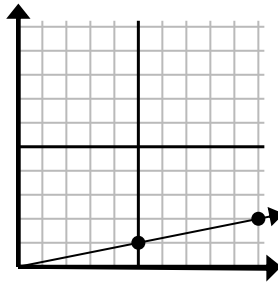
- A. (3, 15)
- B. (7, 35)
- C. (5, 25)
- D. (7, 6)

4)



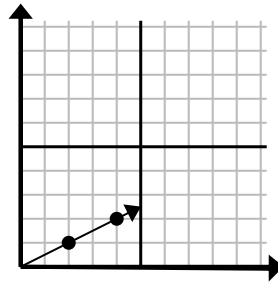
- A. (4, 12)
- B. (3, 9)
- C. (6, 4)
- D. (7, 4)

5)



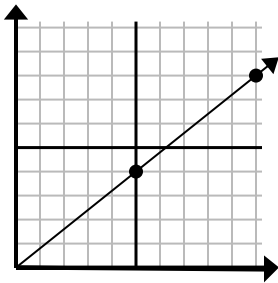
- A. (13, 4)
- B. (13, 3)
- C. (35, 7)
- D. (15, 3)

6)



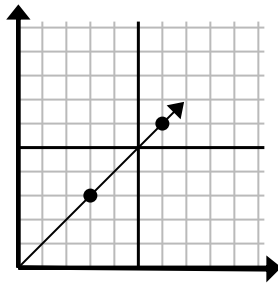
- A. (6, 3)
- B. (8, 4)
- C. (14, 7)
- D. (10, 5)

7)



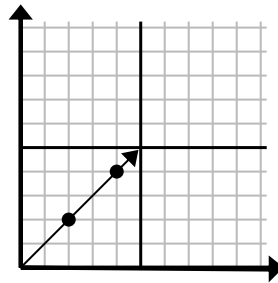
- A. (12, 9)
- B. (15, 12)
- C. (25, 20)
- D. (30, 24)

8)



- A. (21, 21)
- B. (9, 4)
- C. (18, 18)
- D. (9, 9)

9)



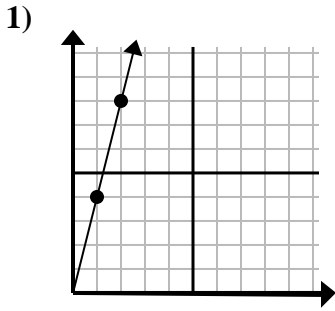
- A. (8, 5)
- B. (6, 6)
- C. (12, 12)
- D. (14, 14)

1. _____
2. _____
3. _____
4. _____
5. _____
6. _____
7. _____
8. _____
9. _____

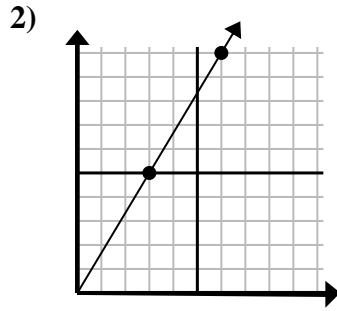


Determine which choice represents a point on the line if it were to continue.

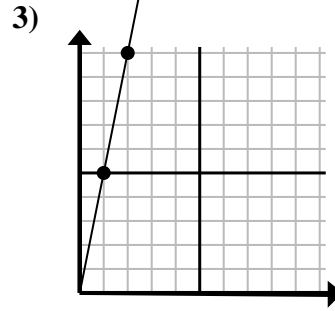
Answers



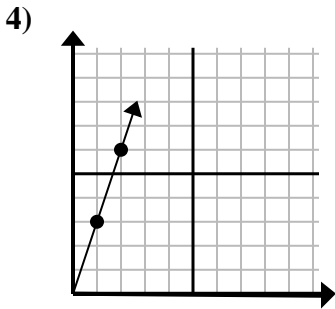
- A. (6, 24)
- B. (3, 12)
- C. (5, 20)
- D. (4, 6)



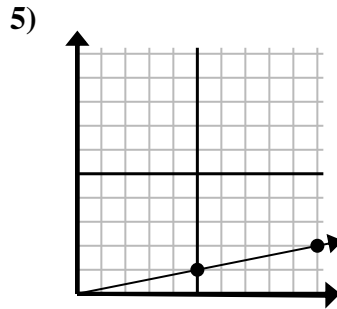
- A. (10, 6)
- B. (21, 35)
- C. (12, 20)
- D. (9, 15)



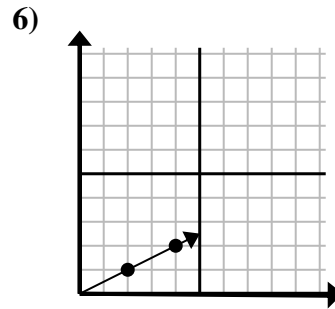
- A. (3, 15)
- B. (7, 35)
- C. (5, 25)
- D. (7, 6)



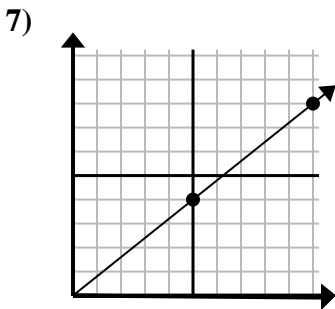
- A. (4, 12)
- B. (3, 9)
- C. (6, 4)
- D. (7, 4)



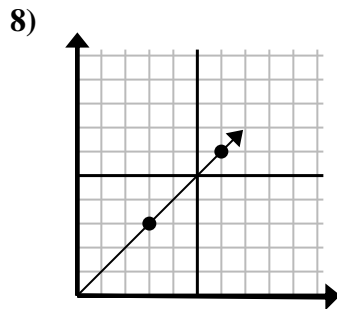
- A. (13, 4)
- B. (13, 3)
- C. (35, 7)
- D. (15, 3)



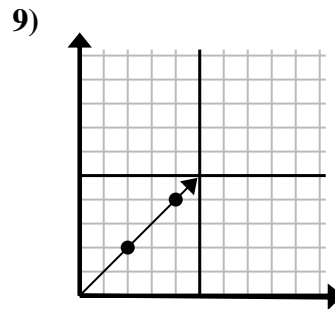
- A. (6, 3)
- B. (8, 4)
- C. (14, 7)
- D. (10, 5)



- A. (12, 9)
- B. (15, 12)
- C. (25, 20)
- D. (30, 24)



- A. (21, 21)
- B. (9, 4)
- C. (18, 18)
- D. (9, 9)



- A. (8, 5)
- B. (6, 6)
- C. (12, 12)
- D. (14, 14)

- 1. **B**
- 2. **D**
- 3. **A**
- 4. **B**
- 5. **D**
- 6. **A**
- 7. **B**
- 8. **D**
- 9. **B**