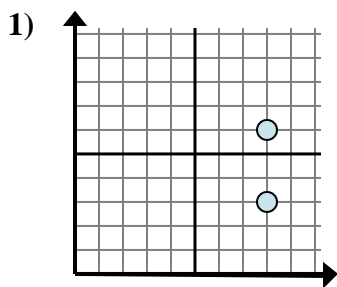


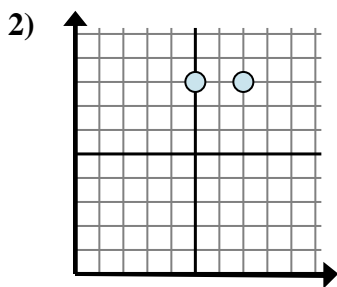


Determine which expression best shows the distance between the two points.

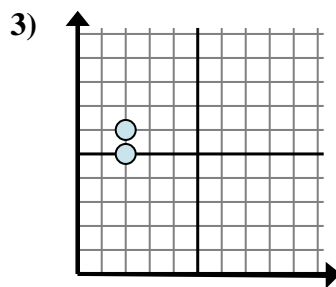
Answers



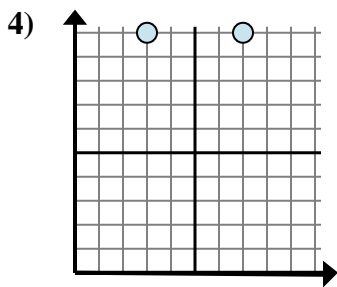
- A. $6 - 3$
- B. $6 - 8$
- C. $8 - 8$
- D. $3 - 8$



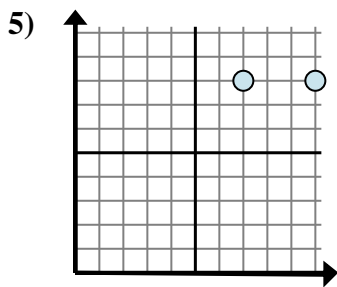
- A. $8 - 7$
- B. $7 - 5$
- C. $8 - 7$
- D. $8 - 8$



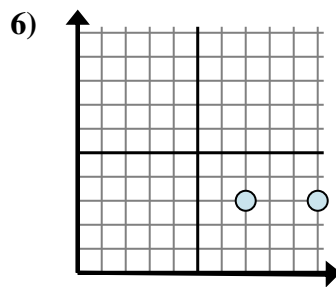
- A. $6 - 5$
- B. $2 - 5$
- C. $5 - 2$
- D. $6 - 2$



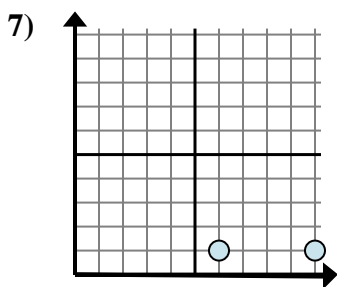
- A. $7 - 3$
- B. $10 - 3$
- C. $10 - 3$
- D. $10 - 10$



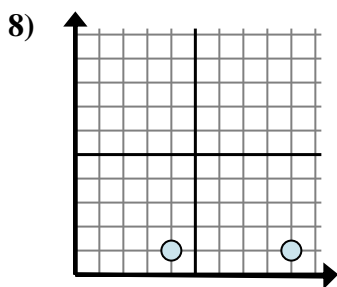
- A. $8 - 8$
- B. $10 - 8$
- C. $7 - 8$
- D. $10 - 7$



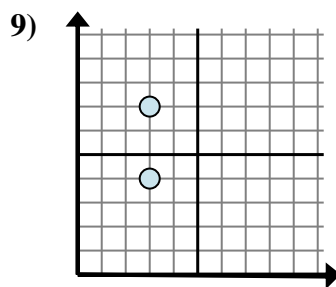
- A. $10 - 7$
- B. $7 - 3$
- C. $3 - 10$
- D. $3 - 10$



- A. $10 - 6$
- B. $6 - 1$
- C. $6 - 10$
- D. $1 - 1$



- A. $4 - 9$
- B. $9 - 4$
- C. $1 - 9$
- D. $4 - 1$



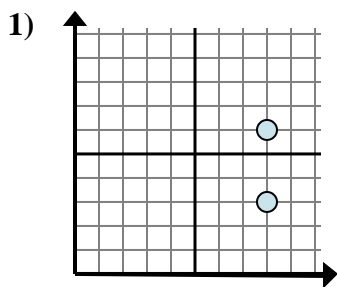
- A. $3 - 3$
- B. $4 - 3$
- C. $3 - 3$
- D. $7 - 4$

- 1. _____
- 2. _____
- 3. _____
- 4. _____
- 5. _____
- 6. _____
- 7. _____
- 8. _____
- 9. _____

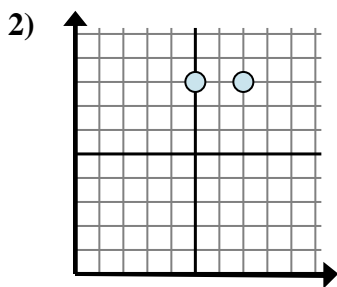


Determine which expression best shows the distance between the two points.

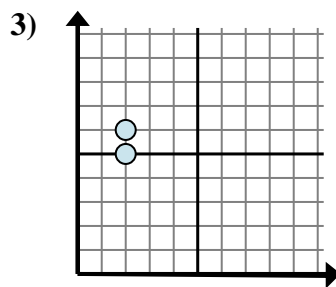
Answers



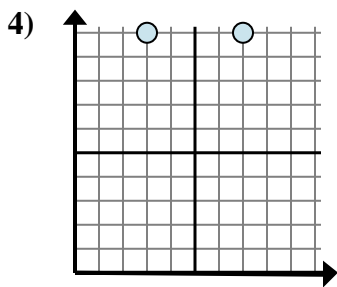
- A. $6 - 3$
- B. $6 - 8$
- C. $8 - 8$
- D. $3 - 8$



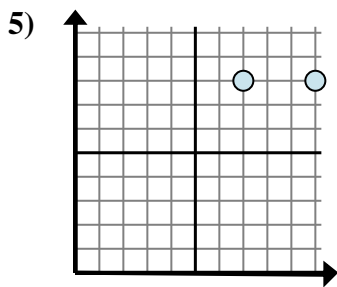
- A. $8 - 7$
- B. $7 - 5$
- C. $8 - 7$
- D. $8 - 8$



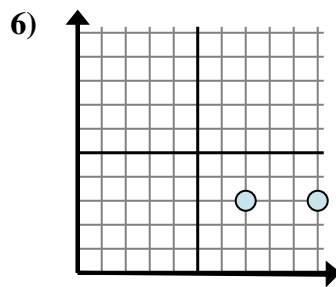
- A. $6 - 5$
- B. $2 - 5$
- C. $5 - 2$
- D. $6 - 2$



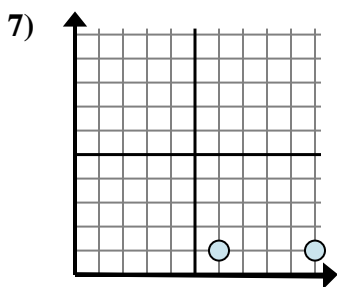
- A. $7 - 3$
- B. $10 - 3$
- C. $10 - 3$
- D. $10 - 10$



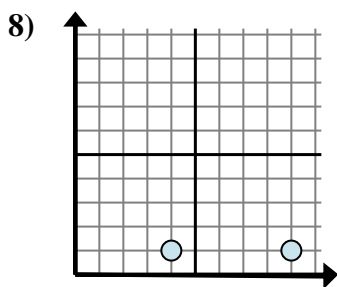
- A. $8 - 8$
- B. $10 - 8$
- C. $7 - 8$
- D. $10 - 7$



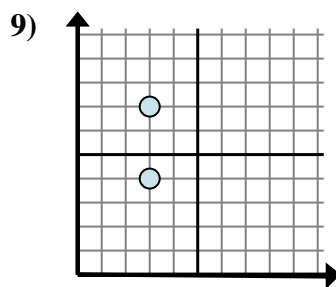
- A. $10 - 7$
- B. $7 - 3$
- C. $3 - 10$
- D. $3 - 10$



- A. $10 - 6$
- B. $6 - 1$
- C. $6 - 10$
- D. $1 - 1$



- A. $4 - 9$
- B. $9 - 4$
- C. $1 - 9$
- D. $4 - 1$



- A. $3 - 3$
- B. $4 - 3$
- C. $3 - 3$
- D. $7 - 4$

- 1. **A**
- 2. **B**
- 3. **A**
- 4. **A**
- 5. **D**
- 6. **A**
- 7. **A**
- 8. **B**
- 9. **D**