
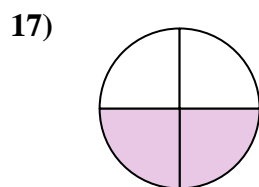

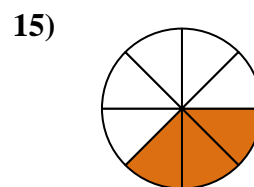
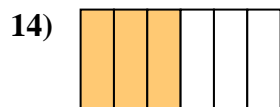

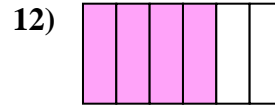
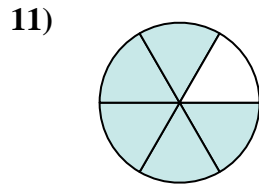
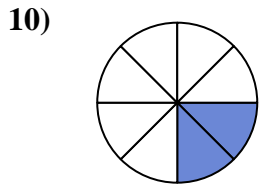
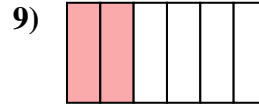
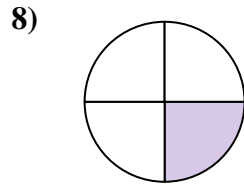
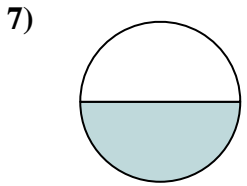
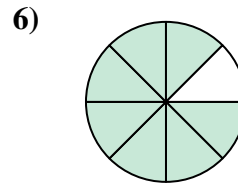
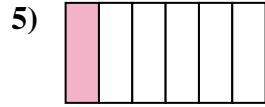
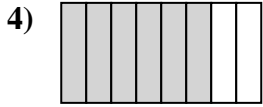
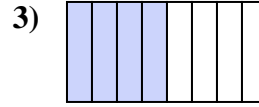
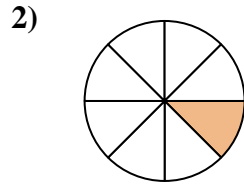
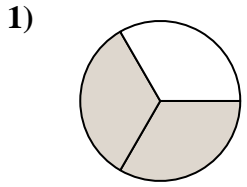




Write the shaded amount as a fraction of the whole amount.


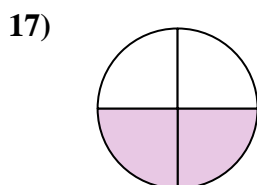

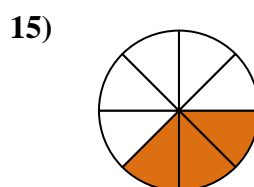
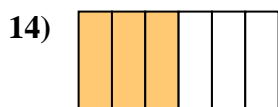
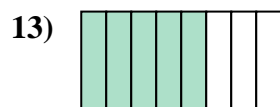

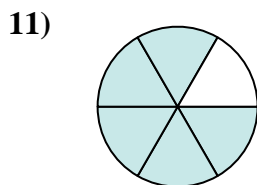
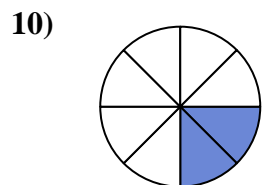
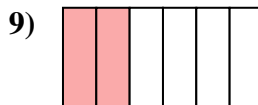
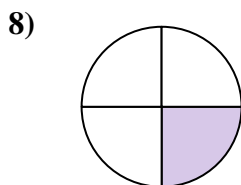
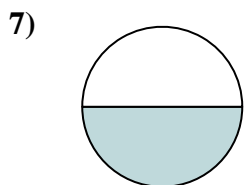
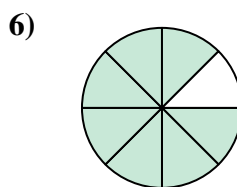

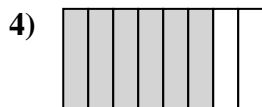
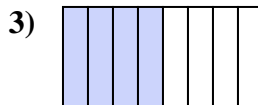
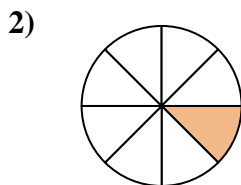
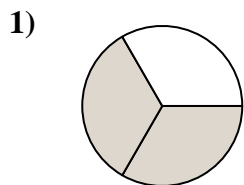


Answers

1. \_\_\_\_\_
2. \_\_\_\_\_
3. \_\_\_\_\_
4. \_\_\_\_\_
5. \_\_\_\_\_
6. \_\_\_\_\_
7. \_\_\_\_\_
8. \_\_\_\_\_
9. \_\_\_\_\_
10. \_\_\_\_\_
11. \_\_\_\_\_
12. \_\_\_\_\_
13. \_\_\_\_\_
14. \_\_\_\_\_
15. \_\_\_\_\_
16. \_\_\_\_\_
17. \_\_\_\_\_
18. \_\_\_\_\_



Write the shaded amount as a fraction of the whole amount.



Answers

1.  $\frac{2}{3}$

2.  $\frac{1}{8}$

3.  $\frac{4}{8}$

4.  $\frac{6}{8}$

5.  $\frac{1}{6}$

6.  $\frac{7}{8}$

7.  $\frac{1}{2}$

8.  $\frac{1}{4}$

9.  $\frac{2}{6}$

10.  $\frac{2}{8}$

11.  $\frac{5}{6}$

12.  $\frac{4}{6}$

13.  $\frac{5}{8}$

14.  $\frac{3}{6}$

15.  $\frac{3}{8}$

16.  $\frac{1}{3}$

17.  $\frac{2}{4}$

18.  $\frac{3}{4}$