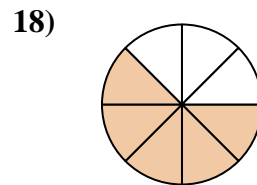
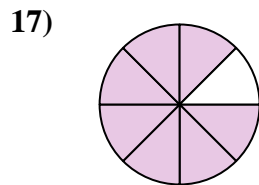
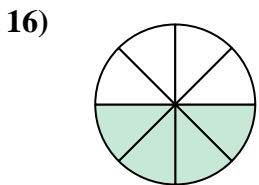
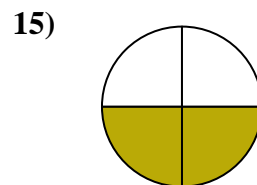
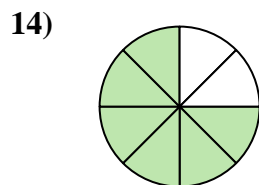
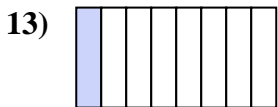
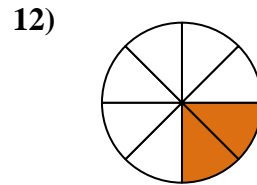
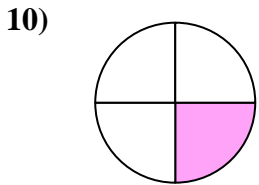
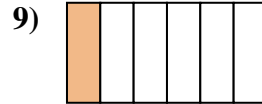
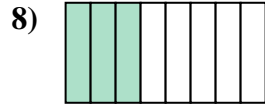
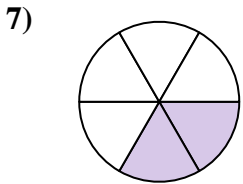
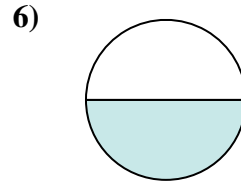
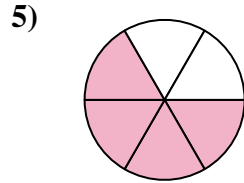
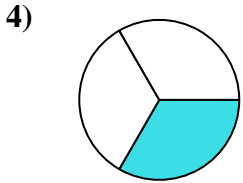
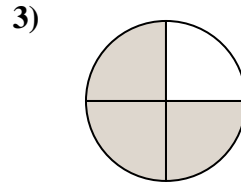
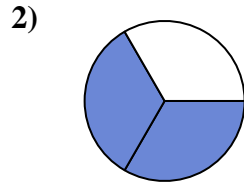




Write the shaded amount as a fraction of the whole amount.



Answers

1. _____

2. _____

3. _____

4. _____

5. _____

6. _____

7. _____

8. _____

9. _____

10. _____

11. _____

12. _____

13. _____

14. _____

15. _____

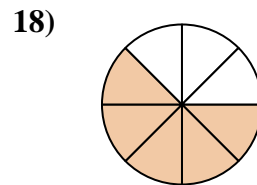
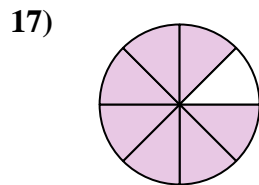
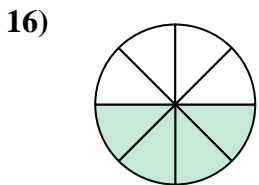
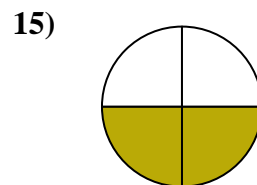
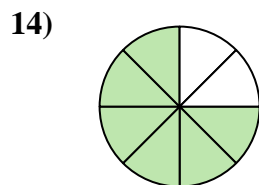
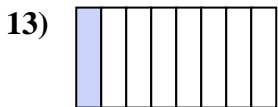
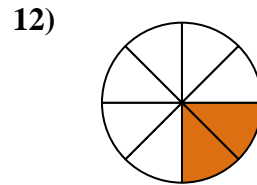
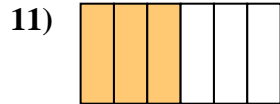
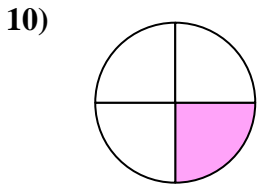
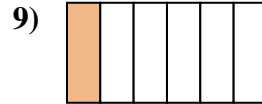
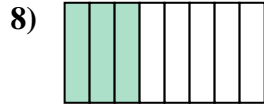
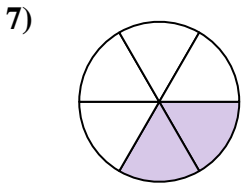
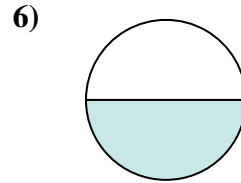
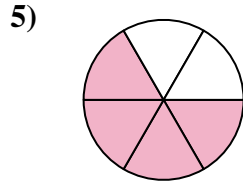
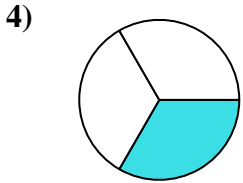
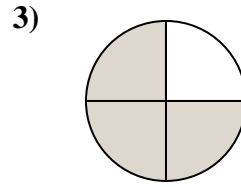
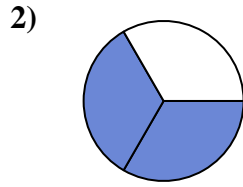
16. _____

17. _____

18. _____



Write the shaded amount as a fraction of the whole amount.



Answers

1. $\frac{5}{6}$

2. $\frac{2}{3}$

3. $\frac{3}{4}$

4. $\frac{1}{3}$

5. $\frac{4}{6}$

6. $\frac{1}{2}$

7. $\frac{2}{6}$

8. $\frac{3}{8}$

9. $\frac{1}{6}$

10. $\frac{1}{4}$

11. $\frac{3}{6}$

12. $\frac{2}{8}$

13. $\frac{1}{8}$

14. $\frac{6}{8}$

15. $\frac{2}{4}$

16. $\frac{4}{8}$

17. $\frac{7}{8}$

18. $\frac{5}{8}$