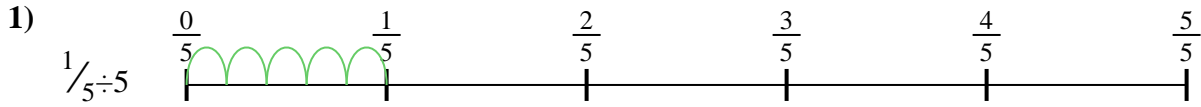


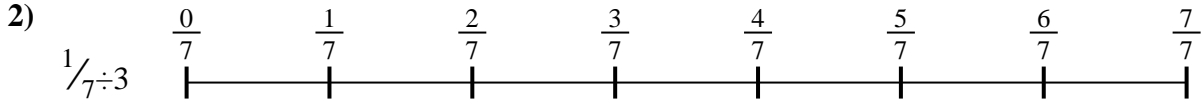


Use the numberline to solve each problem. The first is marked for you.

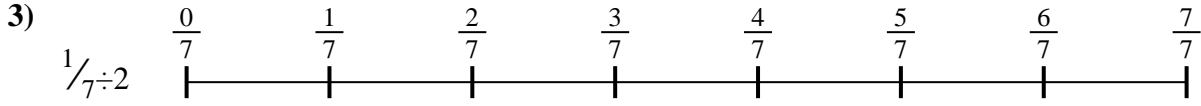
Answers



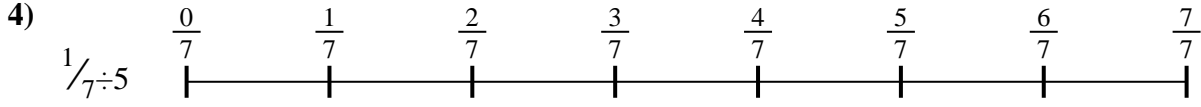
1. _____



2. _____




3. _____



4. _____




5. _____



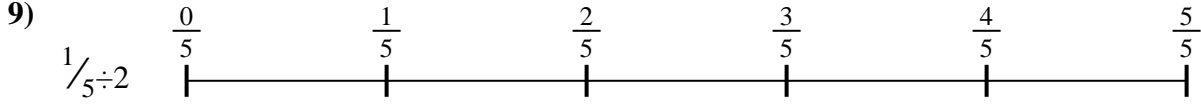
6. _____



7. _____



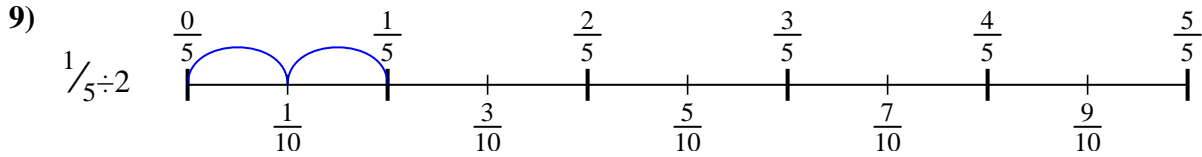
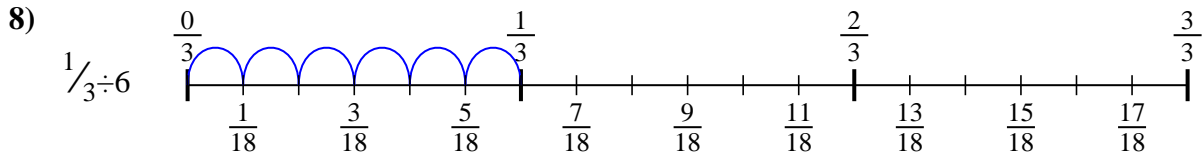
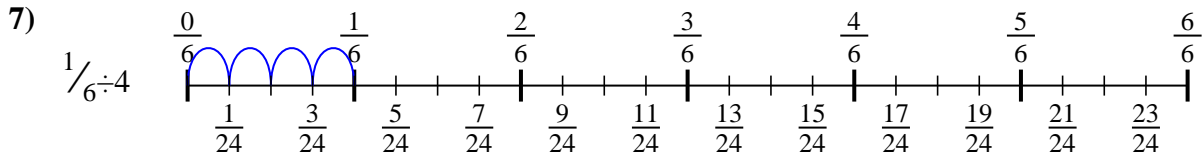
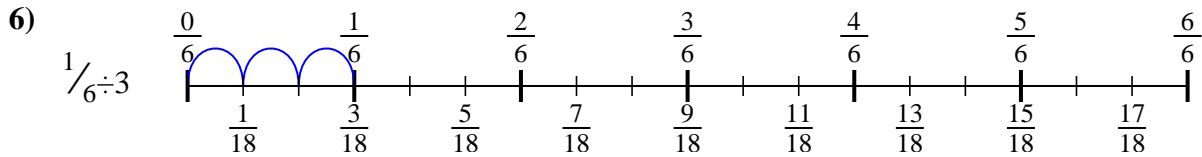
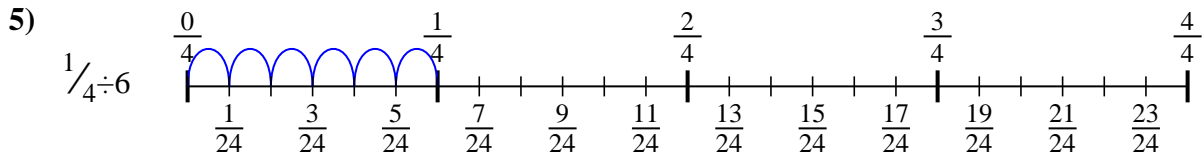
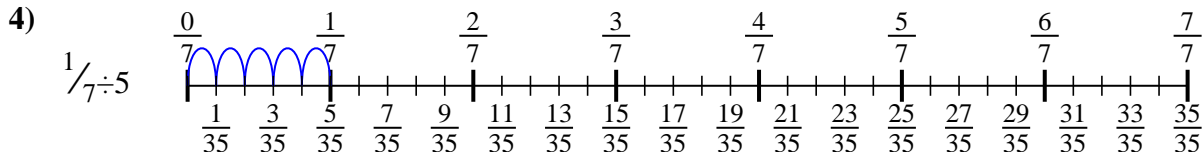
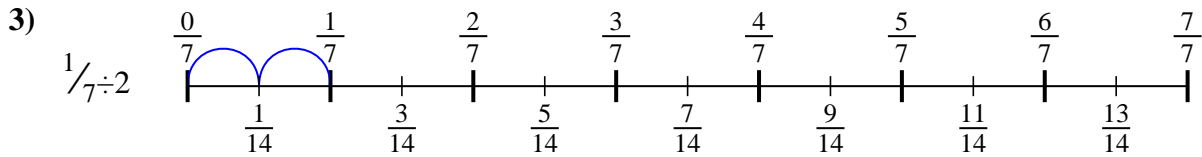
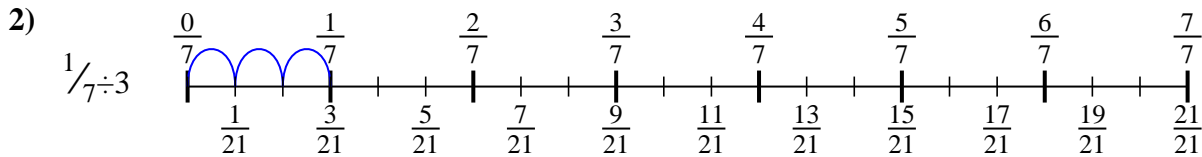
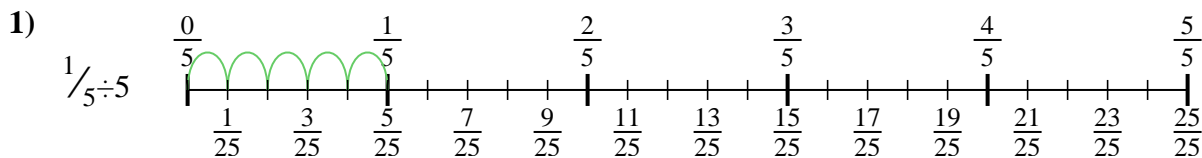
8. _____



9. _____



Use the numberline to solve each problem. The first is marked for you.



Answers

1. $\frac{1}{25}$

2. $\frac{1}{21}$

3. $\frac{1}{14}$

4. $\frac{1}{35}$

5. $\frac{1}{24}$

6. $\frac{1}{18}$

7. $\frac{1}{24}$

8. $\frac{1}{18}$

9. $\frac{1}{10}$



Use the numberline to solve each problem. The first is marked for you.

Answers

$\frac{1}{18}$

$\frac{1}{35}$

$\frac{1}{18}$

$\frac{1}{21}$

$\frac{1}{24}$

$\frac{1}{14}$

$\frac{1}{10}$

$\frac{1}{25}$

$\frac{1}{24}$

1. _____
2. _____
3. _____
4. _____
5. _____
6. _____
7. _____
8. _____
9. _____

