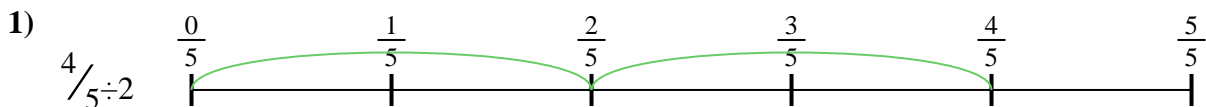





Use the numberline to solve each problem. The first is marked for you.

Answers




1. _____



2. _____



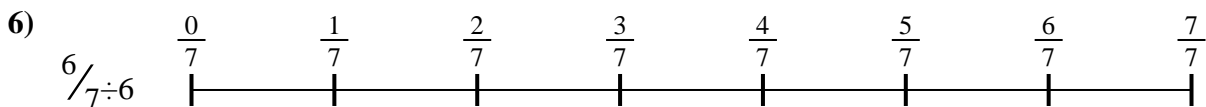
3. _____



4. _____



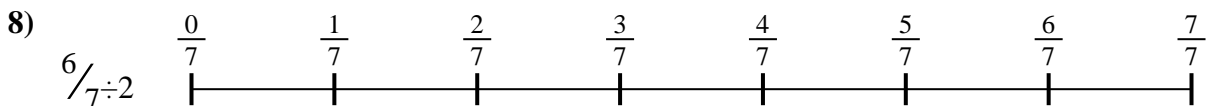
5. _____



6. _____



7. _____



8. _____

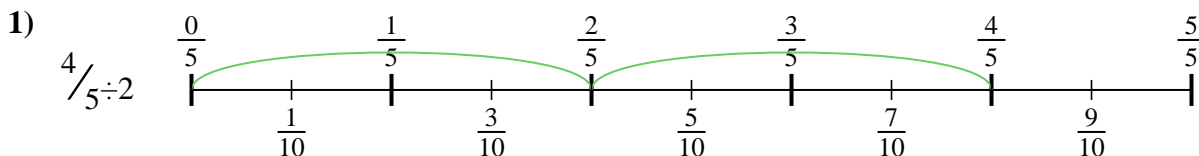


9. _____

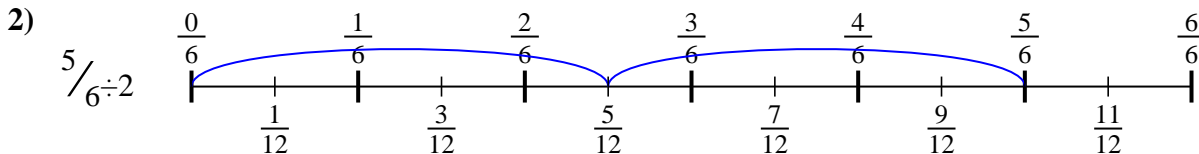


Use the numberline to solve each problem. The first is marked for you.

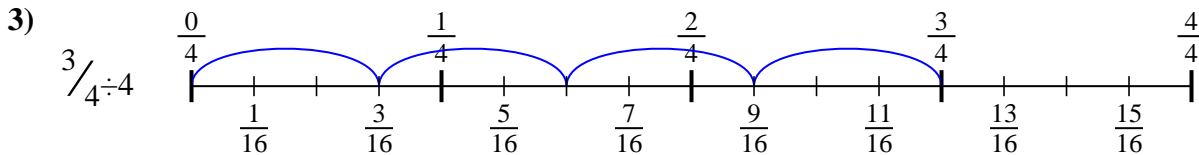
Answers



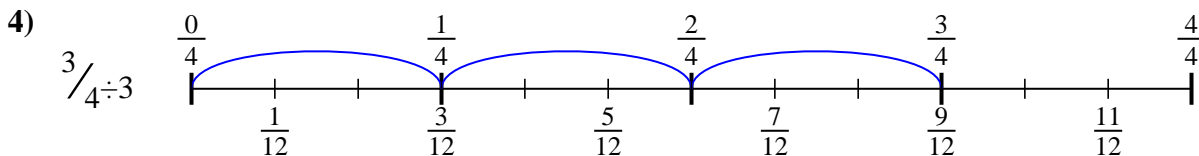
1. $\frac{4}{10}$



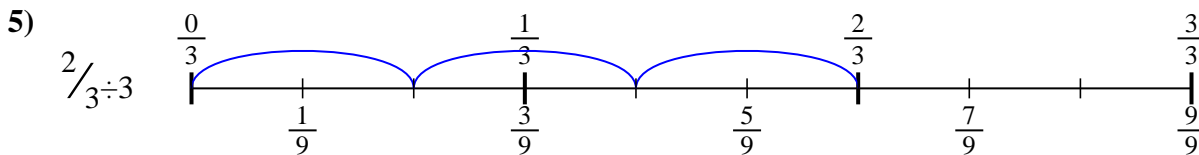
2. $\frac{5}{12}$



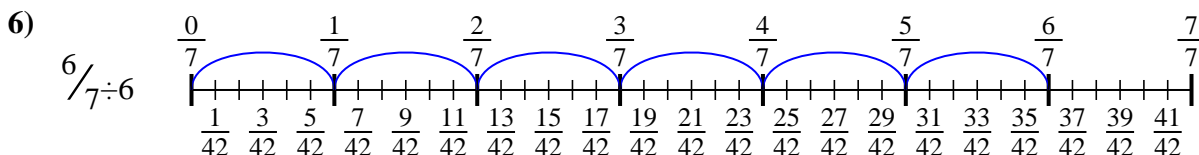
3. $\frac{3}{16}$



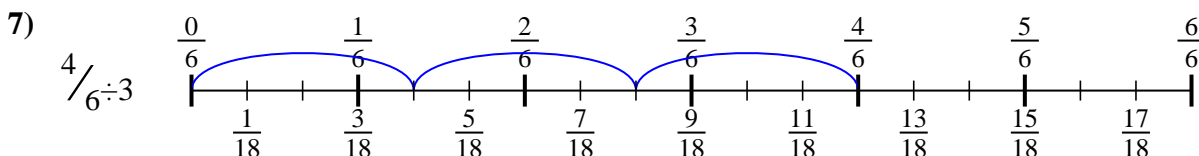
4. $\frac{3}{12}$



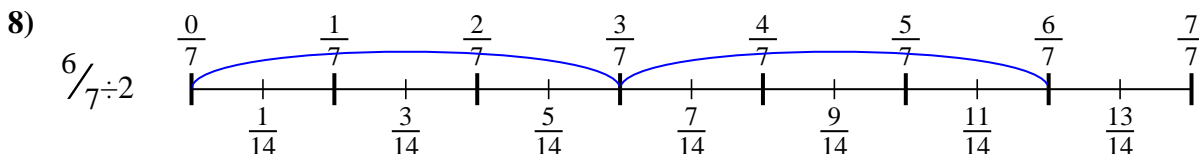
5. $\frac{2}{9}$



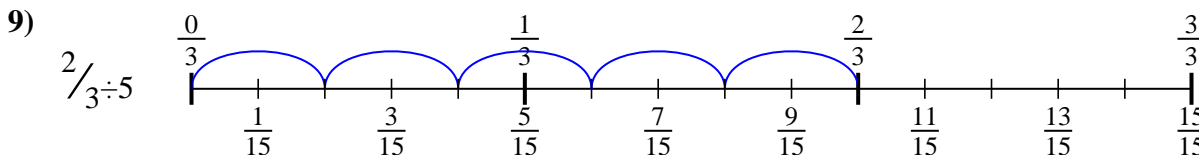
6. $\frac{6}{42}$



7. $\frac{4}{18}$



8. $\frac{6}{14}$



9. $\frac{2}{15}$



Use the numberline to solve each problem. The first is marked for you.

Answers

$\frac{6}{14}$

$\frac{4}{10}$

$\frac{3}{12}$

$\frac{2}{9}$

$\frac{2}{15}$

$\frac{6}{42}$

$\frac{4}{18}$

$\frac{3}{16}$

$\frac{5}{12}$

1. _____

2. _____

3. _____

4. _____

5. _____

6. _____

7. _____

8. _____

9. _____

