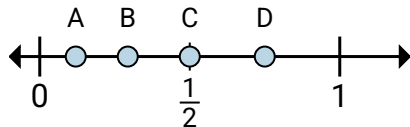




Determine which letter best shows the location of the fraction.

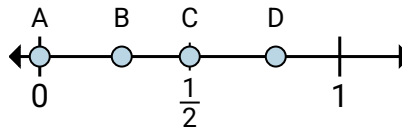
**Answers**

1)



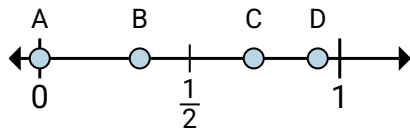
- a. Which letter best shows  $\frac{4}{8}$ ?  
b. Which letter best shows  $\frac{6}{8}$ ?

2)



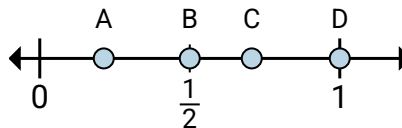
- a. Which letter best shows  $\frac{0}{4}$ ?  
b. Which letter best shows  $\frac{2}{4}$ ?

3)



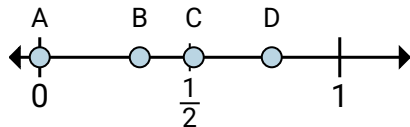
- a. Which letter best shows  $\frac{0}{3}$ ?  
b. Which letter best shows  $\frac{1}{3}$ ?

4)



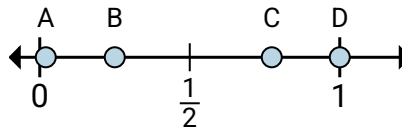
- a. Which letter best shows  $\frac{2}{2}$ ?  
b. Which letter best shows  $\frac{1}{2}$ ?

5)



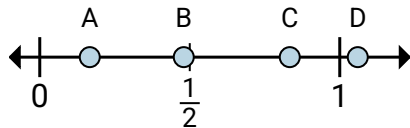
- a. Which letter best shows  $\frac{0}{6}$ ?  
b. Which letter best shows  $\frac{2}{6}$ ?

6)



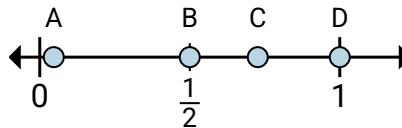
- a. Which letter best shows  $\frac{2}{8}$ ?  
b. Which letter best shows  $\frac{8}{8}$ ?

7)



- a. Which letter best shows  $\frac{5}{6}$ ?  
b. Which letter best shows  $\frac{1}{6}$ ?

8)



- a. Which letter best shows  $\frac{1}{2}$ ?  
b. Which letter best shows  $\frac{2}{2}$ ?

1. \_\_\_\_\_

2. \_\_\_\_\_

3. \_\_\_\_\_

4. \_\_\_\_\_

5. \_\_\_\_\_

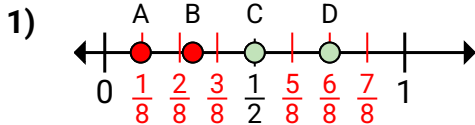
6. \_\_\_\_\_

7. \_\_\_\_\_

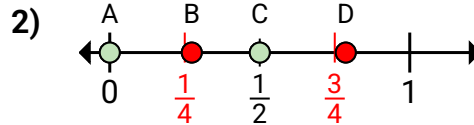
8. \_\_\_\_\_



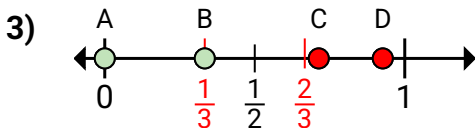
Determine which letter best shows the location of the fraction.

**Answers**

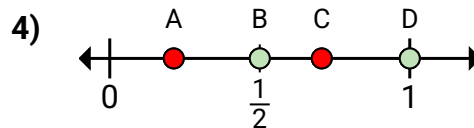
- a. Which letter best shows  $\frac{4}{8}$ ?  
b. Which letter best shows  $\frac{6}{8}$ ?



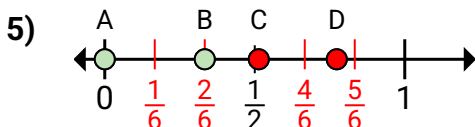
- a. Which letter best shows  $\frac{0}{4}$ ?  
b. Which letter best shows  $\frac{2}{4}$ ?



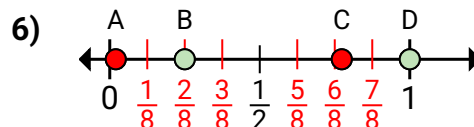
- a. Which letter best shows  $\frac{0}{3}$ ?  
b. Which letter best shows  $\frac{1}{3}$ ?



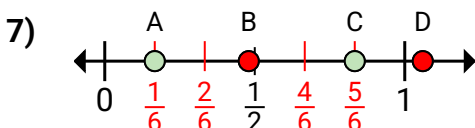
- a. Which letter best shows  $\frac{2}{2}$ ?  
b. Which letter best shows  $\frac{1}{2}$ ?



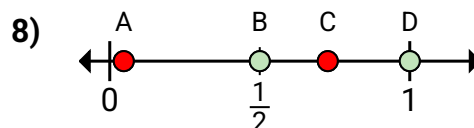
- a. Which letter best shows  $\frac{0}{6}$ ?  
b. Which letter best shows  $\frac{2}{6}$ ?



- a. Which letter best shows  $\frac{2}{8}$ ?  
b. Which letter best shows  $\frac{8}{8}$ ?



- a. Which letter best shows  $\frac{5}{6}$ ?  
b. Which letter best shows  $\frac{1}{6}$ ?



- a. Which letter best shows  $\frac{1}{2}$ ?  
b. Which letter best shows  $\frac{2}{2}$ ?

1. C D  
2. A C  
3. A B  
4. D B  
5. A B  
6. B D  
7. C A  
8. B D